

Name : _____

Score : _____

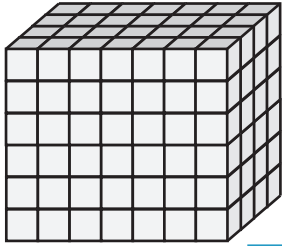
Rectangular Prism - Counting Squares

MS1

□ = 1 in²

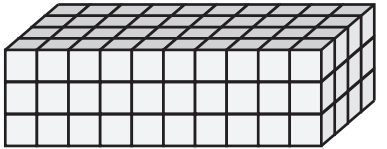

Find the surface area of each rectangular prism.

1)



Surface Area = _____

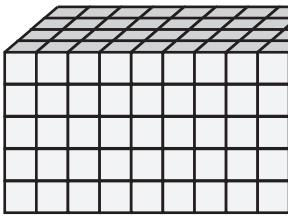
2)



3)

face Area = _____

4)



Surface Area = _____

Access the largest collection of worksheets for just **\$19.95** per year!

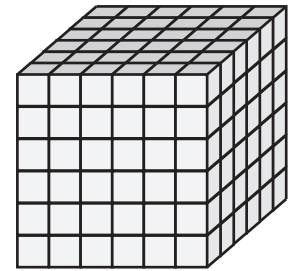
Members, please log in to download this worksheet.

Log in

Not a member? Please sign up to gain complete access.

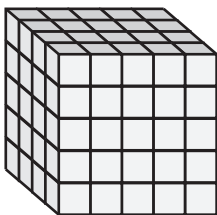
Sign up

www.mathworksheets4kids.com

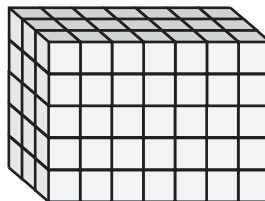


face Area = _____

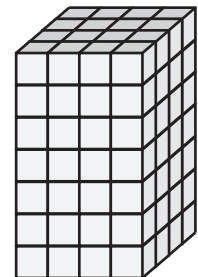
7)



Surface Area = _____



Surface Area = _____



Surface Area = _____

Name : _____

Answer key

Score : _____

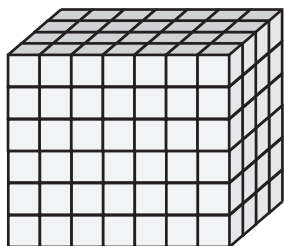
Rectangular Prism - Counting Squares

MS1

□ = 1 in²


Find the surface area of each rectangular prism.

1)




Surface Area = 188 in²

2)

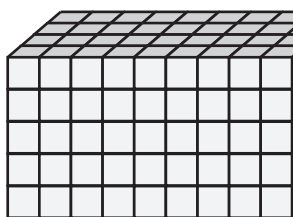


3)



face Area = 164 in²

4)



Surface Area = 220 in²

Access the largest collection of worksheets for just **\$19.95** per year!

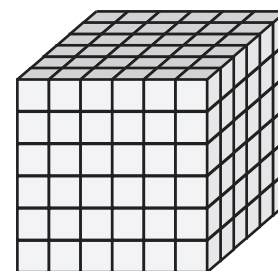
Members, please log in to download this worksheet.

Log in

Not a member? Please sign up to gain complete access.

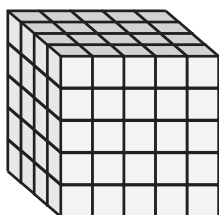
Sign up

www.mathworksheets4kids.com

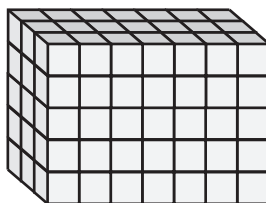


face Area = 216 in²

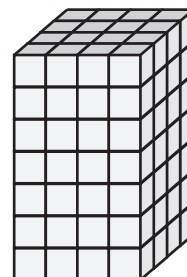
7)



Surface Area = 130 in²



Surface Area = 142 in²



Surface Area = 144 in²