

Name : _____

Score : _____


Rectangular Prism - Counting Squares

MS2

□ = 1 ft²


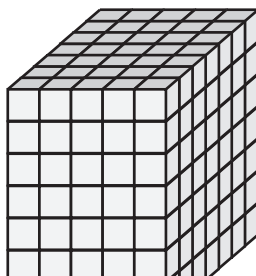
Find the surface area of each rectangular prism.

1)



Surface Area = _____

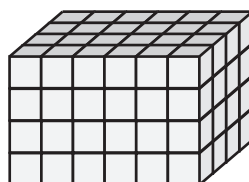
2)



3)

face Area = _____

4)



Access the largest collection of worksheets for just **\$19.95** per year!

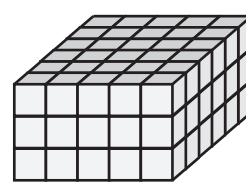
Members, please log in to download this worksheet.

Log in

Not a member? Please sign up to gain complete access.

Sign up




www.mathworksheets4kids.com



Surface Area = _____

face Area = _____

7)



Surface Area = _____

Surface Area = _____

Surface Area = _____

Name : _____

Answer key

Score : _____

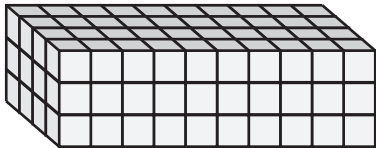
Rectangular Prism - Counting Squares

MS2

□ = 1 ft²


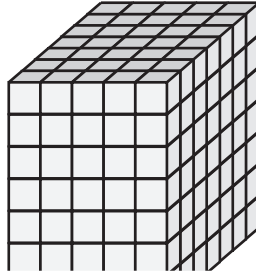
Find the surface area of each rectangular prism.

1)



Surface Area = 164 ft²

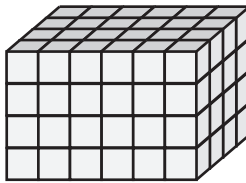
2)



3)

face Area = 122 ft²

4)



Access the largest collection of worksheets for just **\$19.95** per year!

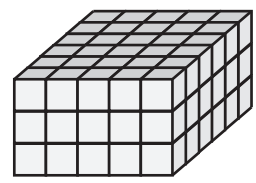
Members, please log in to download this worksheet.

Log in

Not a member? Please sign up to gain complete access.

Sign up




www.mathworksheets4kids.com



Surface Area = 128 ft²

face Area = 126 ft²

7)



Surface Area = 160 ft²

Surface Area = 248 ft²

Surface Area = 208 ft²