

Name : \_\_\_\_\_

Score : \_\_\_\_\_


## Rectangular Prism - Counting Squares

MS3

□ = 1 yd<sup>2</sup>

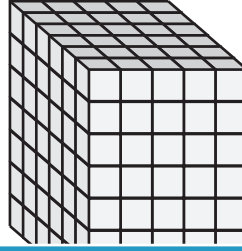
Find the surface area of each rectangular prism.

1)

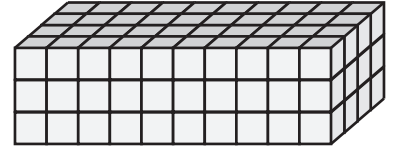


Surface Area = \_\_\_\_\_

2)

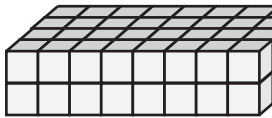


3)



face Area = \_\_\_\_\_

4)



Surface Area = \_\_\_\_\_

Access the largest collection of worksheets for just **\$19.95** per year!


Members, please log in to download this worksheet.

**Log in**

Not a member? Please sign up to gain complete access.

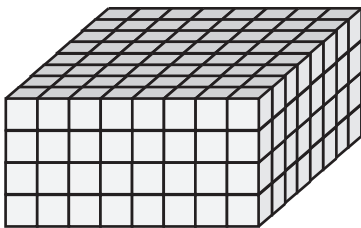
**Sign up**

[www.mathworksheets4kids.com](http://www.mathworksheets4kids.com)




face Area = \_\_\_\_\_

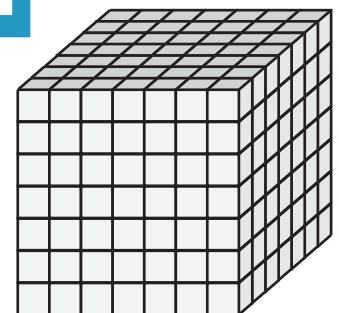
7)



Surface Area = \_\_\_\_\_



Surface Area = \_\_\_\_\_



Surface Area = \_\_\_\_\_

Name : \_\_\_\_\_

**Answer key**

Score : \_\_\_\_\_


**Rectangular Prism - Counting Squares**

MS3

□ = 1 yd<sup>2</sup>

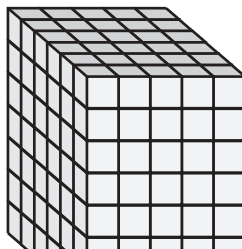
Find the surface area of each rectangular prism.

1)




Surface Area = 158 yd<sup>2</sup>

2)

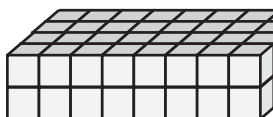


3)



face Area = 164 yd<sup>2</sup>

4)



Surface Area = 112 yd<sup>2</sup>

**PREVIEW**  
Access the largest collection of  
worksheets for just **\$19.95** per year!


Members, please  
log in to  
download this  
worksheet.

**Log in**

Not a member?  
Please sign up to  
gain complete  
access.

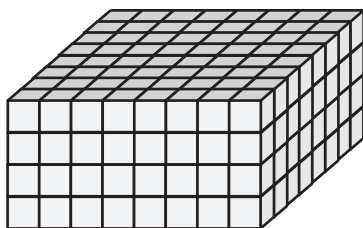
**Sign up**

[www.mathworksheets4kids.com](http://www.mathworksheets4kids.com)




face Area = 122 yd<sup>2</sup>

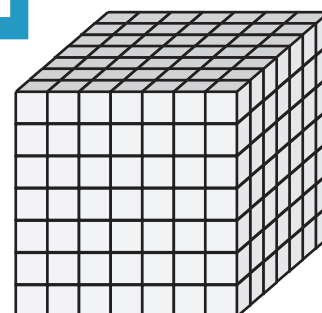
7)



Surface Area = 256 yd<sup>2</sup>



Surface Area = 248 yd<sup>2</sup>



Surface Area = 294 yd<sup>2</sup>