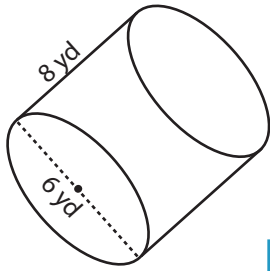


Surface Area - Cylinder

ES3

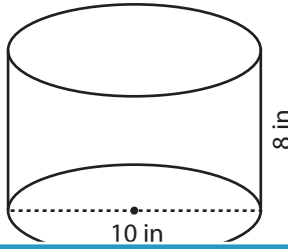
Find the exact surface area of each cylinder.

1)



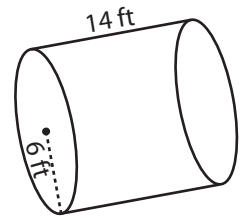
Surface Area = _____

2)

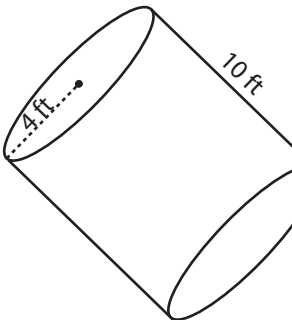


Surface Area = _____

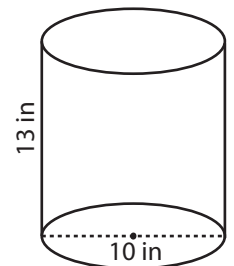
3)



4)

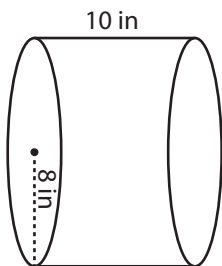


Surface Area = _____

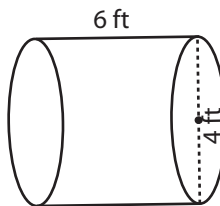


Surface Area = _____

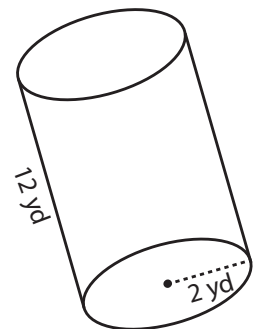
7)



Surface Area = _____



Surface Area = _____



Surface Area = _____

PREVIEW

Access the largest collection of worksheets for just **\$19.95** per year!

Members, please log in to download this worksheet.

Log in

Not a member? Please sign up to gain complete access.

Sign up

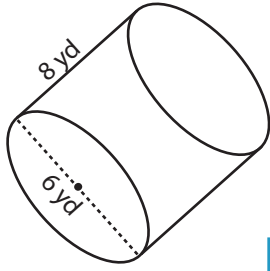
www.mathworksheets4kids.com

Answer key**Surface Area - Cylinder**

ES3

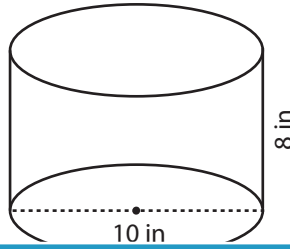
Find the exact surface area of each cylinder.

1)



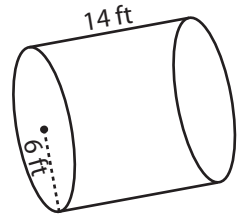
Surface Area = $66\pi \text{ yd}^2$

2)

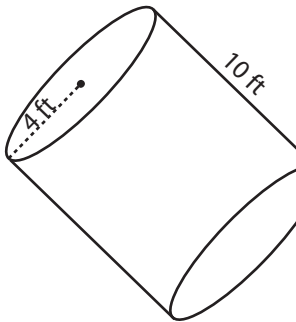


Surface Area = $240\pi \text{ ft}^2$

3)



4)



Surface Area = $112\pi \text{ ft}^2$

PREVIEW

Access the largest collection of worksheets for just **\$19.95** per year!

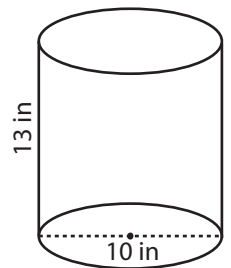
Members, please log in to download this worksheet.

Log in

Not a member? Please sign up to gain complete access.

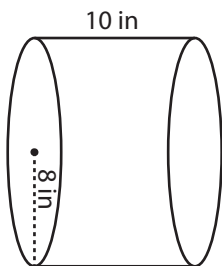
Sign up

www.mathworksheets4kids.com

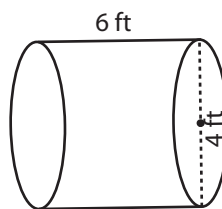


Surface Area = $180\pi \text{ in}^2$

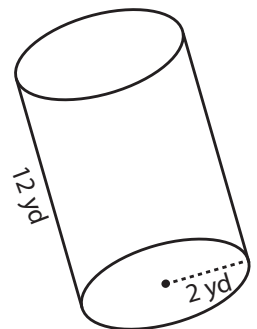
7)



Surface Area = $288\pi \text{ in}^2$



Surface Area = $32\pi \text{ ft}^2$



Surface Area = $56\pi \text{ yd}^2$