

Name : _____

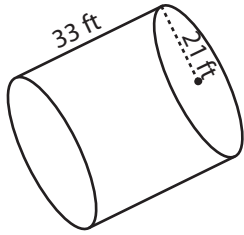
Score : _____

Surface Area - Cylinder

MS3

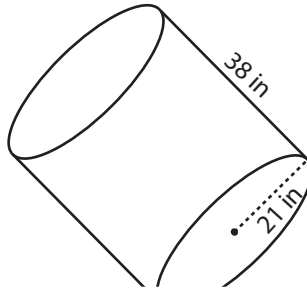
Find the surface area of each cylinder. Round the answer to nearest tenth. (use $\pi = 3.14$)

1)

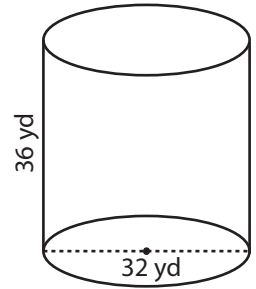


Surface Area = _____

2)

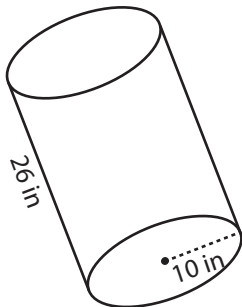


3)



Surface Area = _____

4)



Surface Area = _____

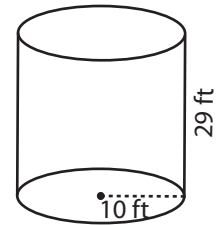
PREVIEW

Access the largest collection of worksheets for just **\$19.95** per year!

Members, please log in to download this worksheet. **Log in**

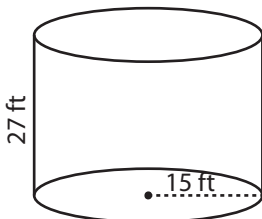
Not a member? Please sign up to gain complete access. **Sign up**

www.mathworksheets4kids.com

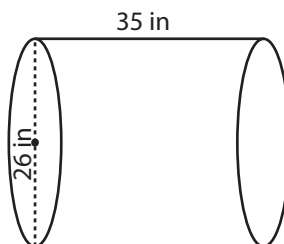


Surface Area = _____

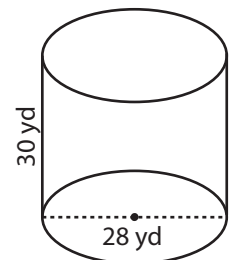
7)



Surface Area = _____



Surface Area = _____



Surface Area = _____

Name : _____

Score : _____

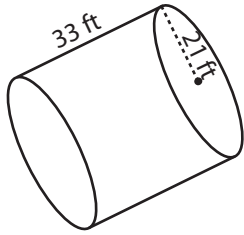
Answer key

Surface Area - Cylinder

MS3

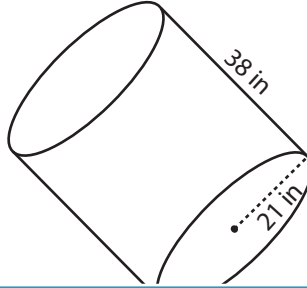
Find the surface area of each cylinder. Round the answer to nearest tenth. (use $\pi = 3.14$)

1)



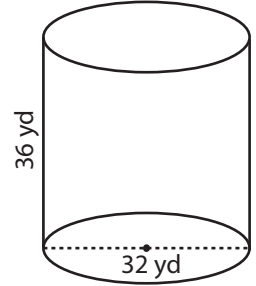
Surface Area = 7121.5 ft²

2)

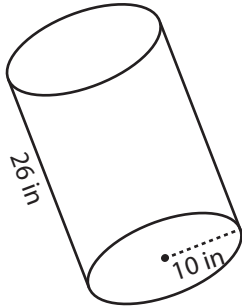


Surface Area = 5225 yd²

3)



4)



Surface Area = 2260.8 in²

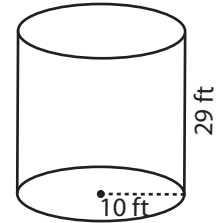
PREVIEW

Access the largest collection of worksheets for just **\$19.95** per year!

Members, please log in to download this worksheet. **Log in**

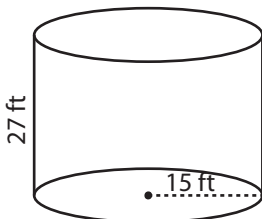
Not a member? Please sign up to gain complete access. **Sign up**

www.mathworksheets4kids.com

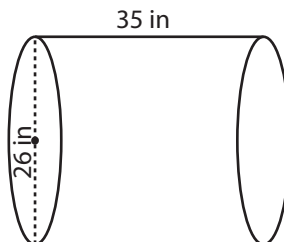


Surface Area = 2449.2 ft²

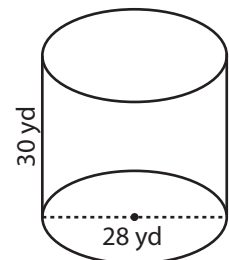
7)



Surface Area = 3956.4 ft²



Surface Area = 3918.7 in²



Surface Area = 3868.5 yd²