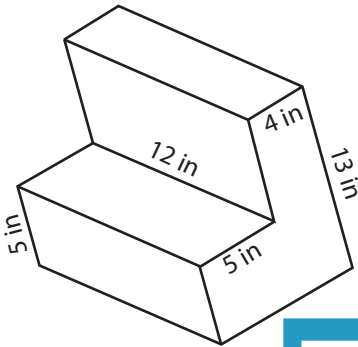


Surface Area - L Blocks

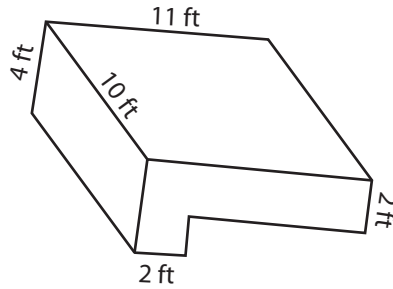
ES3

Find the surface area of each L-block.

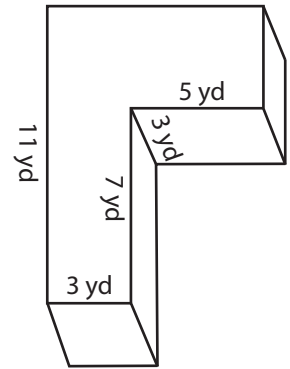
1)



2)



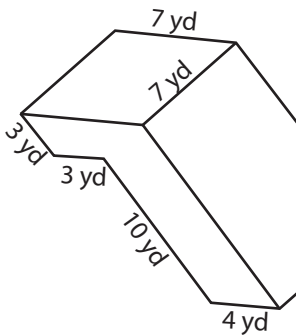
3)



Surface Area = _____

Surface Area = _____

4)



Access the largest collection of worksheets for just **\$19.95** per year!

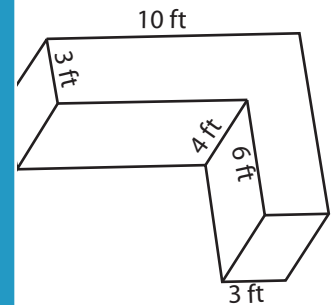
Members, please log in to download this worksheet.

Log in

Not a member? Please sign up to gain complete access.

Sign up

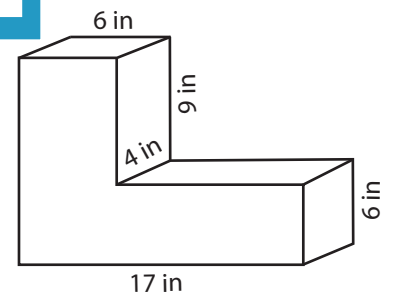
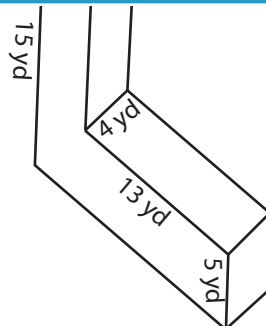
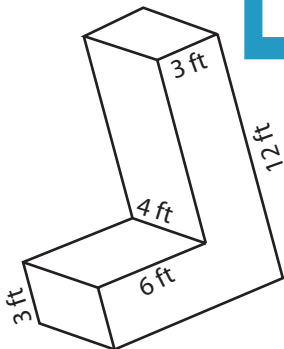
www.mathworksheets4kids.com



Surface Area = _____

Surface Area = _____

7)



Surface Area = _____

Surface Area = _____

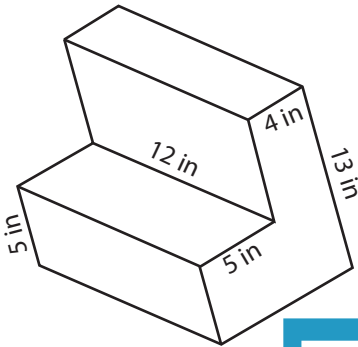
Surface Area = _____

Surface Area - L Blocks

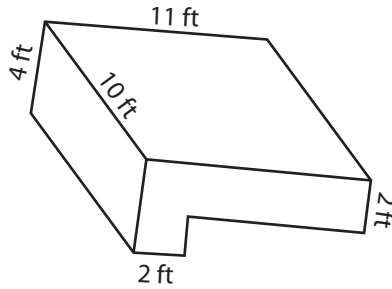
ES3

Find the surface area of each L-block.

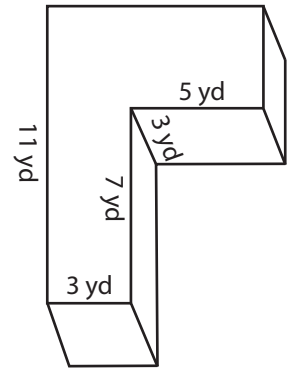
1)



2)



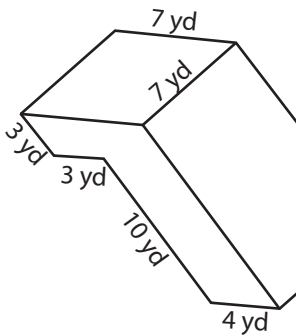
3)



Surface Area = 682 in²

Surface Area = 220 yd²

4)



Access the largest collection of worksheets for just **\$19.95** per year!

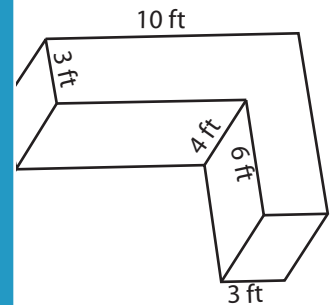
Members, please log in to download this worksheet.

Not a member? Please sign up to gain complete access.

Log in

Sign up

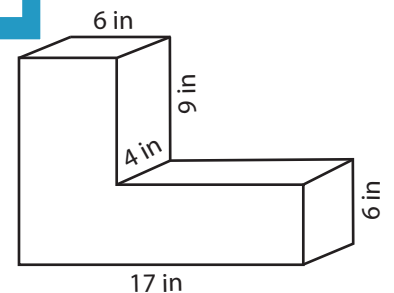
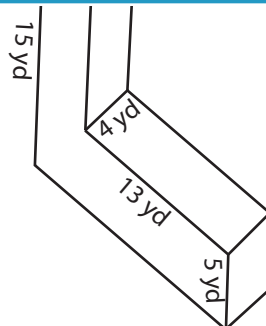
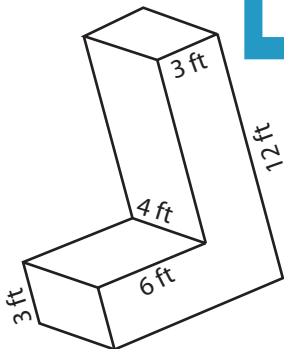
www.mathworksheets4kids.com



Surface Area = 402 yd²

Surface Area = 248 ft²

7)



Surface Area = 276 ft²

Surface Area = 544 yd²

Surface Area = 568 in²