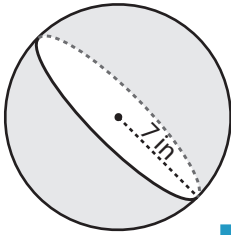


Surface Area - Mixed Shapes

ES3

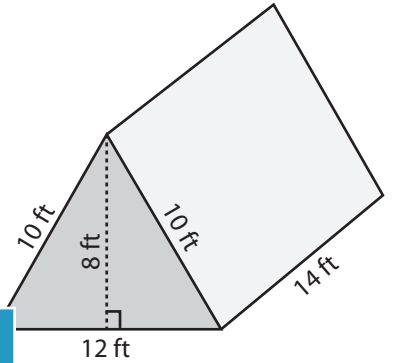
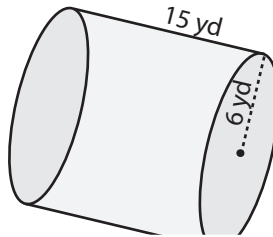
Find the exact surface area of each shape.

1)



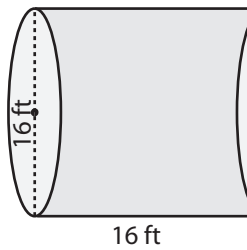
Surface Area = _____

2)

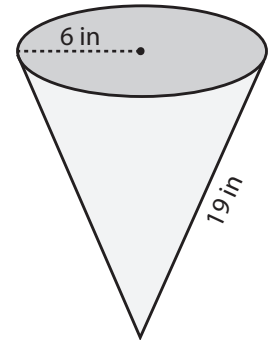


Surface Area = _____

4)

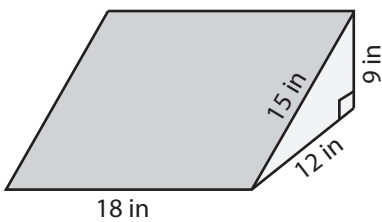


Surface Area = _____

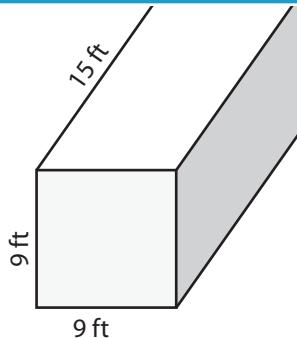


Surface Area = _____

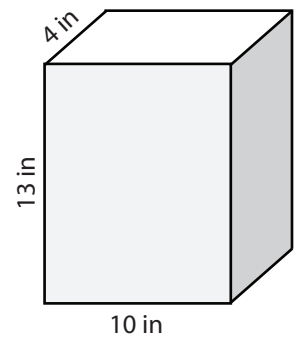
7)



Surface Area = _____



Surface Area = _____



Surface Area = _____

PREVIEW

Access the largest collection of worksheets for just **\$19.95** per year!

Members, please log in to download this worksheet.

Log in

Not a member? Please sign up to gain complete access.

Sign up

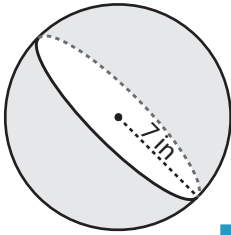
www.mathworksheets4kids.com

Surface Area - Mixed Shapes

ES3

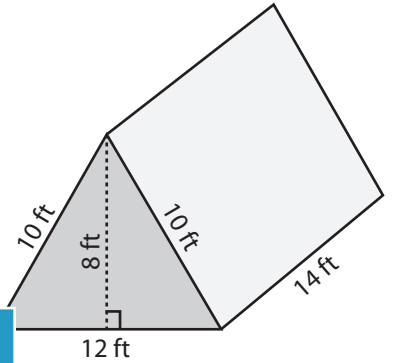
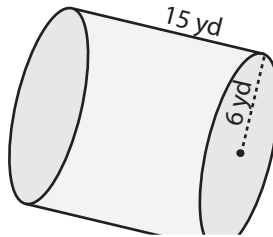
Find the exact surface area of each shape.

1)



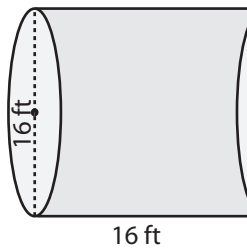
Surface Area = 196π

2)

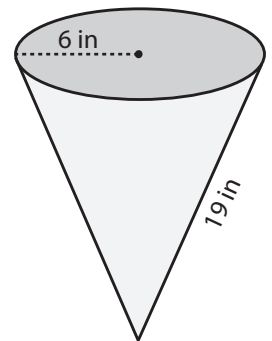


Surface Area = 544 ft²

4)

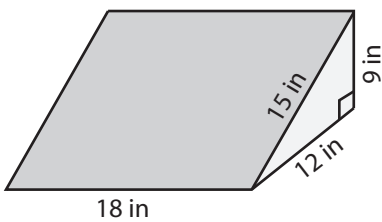


Surface Area = 384π

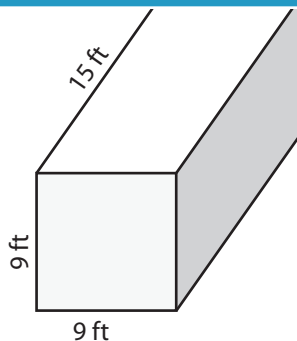


Surface Area = 150π in²

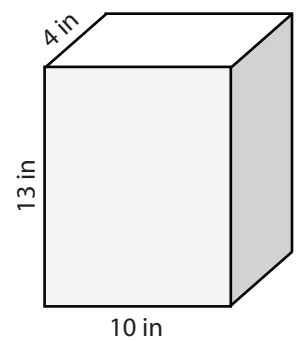
7)



Surface Area = 756 in²



Surface Area = 702 ft²



Surface Area = 444 in²

PREVIEW

Access the largest collection of worksheets for just **\$19.95** per year!

Members, please log in to download this worksheet.

Log in

Not a member? Please sign up to gain complete access.

Sign up

www.mathworksheets4kids.com