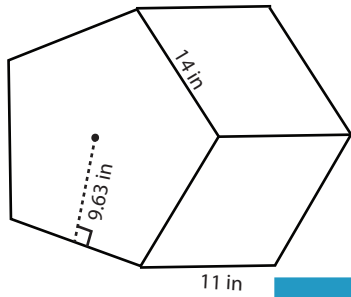


**Surface Area - Polygonal Prism**

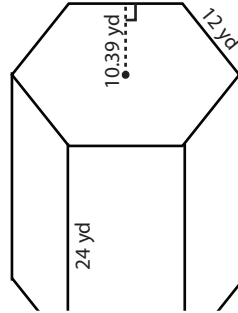
Find the surface area of each regular polygonal prism.

1)

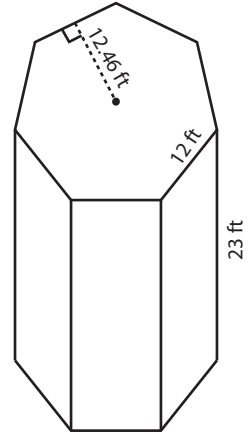


Surface Area = \_\_\_\_\_

2)

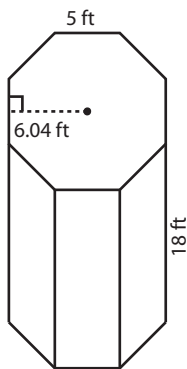


3)

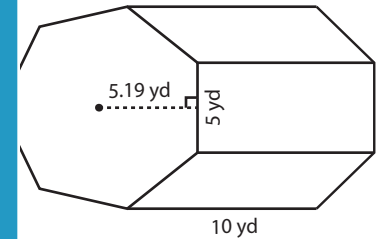


Surface Area = \_\_\_\_\_

4)

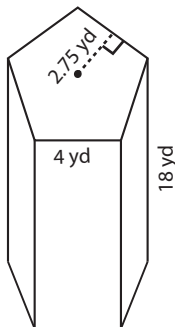


Surface Area = \_\_\_\_\_

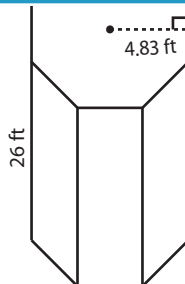


Surface Area = \_\_\_\_\_

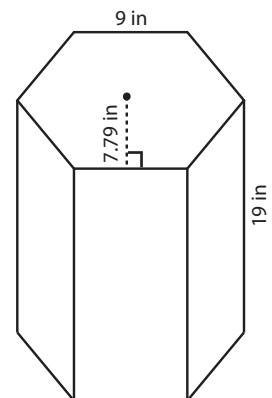
7)



Surface Area = \_\_\_\_\_



Surface Area = \_\_\_\_\_



Surface Area = \_\_\_\_\_

**PREVIEW**

Access the largest collection of  
worksheets for just **\$19.95** per year!

Members, please  
log in to  
download this  
worksheet.

**Log in**

Not a member?  
Please sign up to  
gain complete  
access.

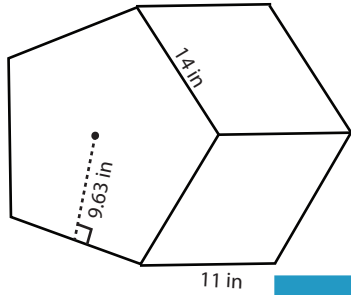
**Sign up**

[www.mathworksheets4kids.com](http://www.mathworksheets4kids.com)

**Surface Area - Polygonal Prism**

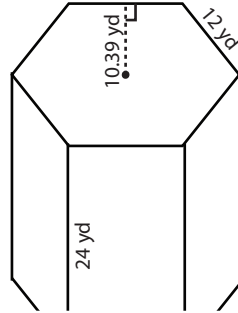
Find the surface area of each regular polygonal prism.

1)

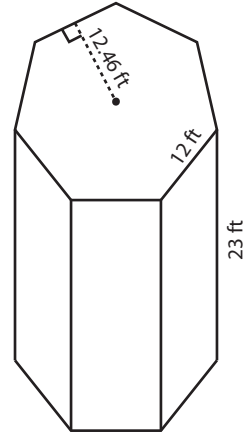


Surface Area = 1444.1 in<sup>2</sup>

2)

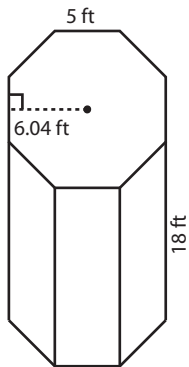


3)

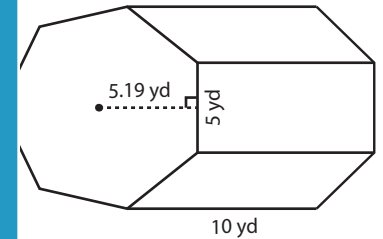


Surface Area = 2978.64 ft<sup>2</sup>

4)

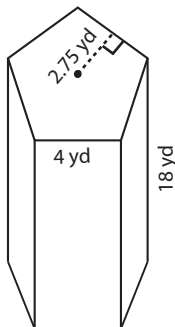


Surface Area = 961.6 ft<sup>2</sup>

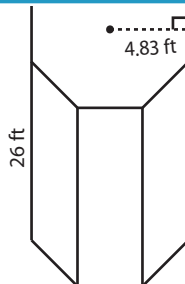


Surface Area = 531.65 yd<sup>2</sup>

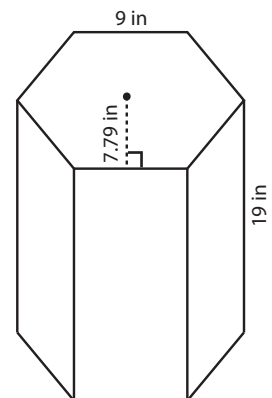
7)



Surface Area = 415 yd<sup>2</sup>



Surface Area = 986.56 ft<sup>2</sup>



Surface Area = 1446.66 in<sup>2</sup>

**PREVIEW**

Access the largest collection of worksheets for just **\$19.95** per year!

Members, please log in to download this worksheet.

**Log in**

Not a member? Please sign up to gain complete access.

**Sign up**

[www.mathworksheets4kids.com](http://www.mathworksheets4kids.com)