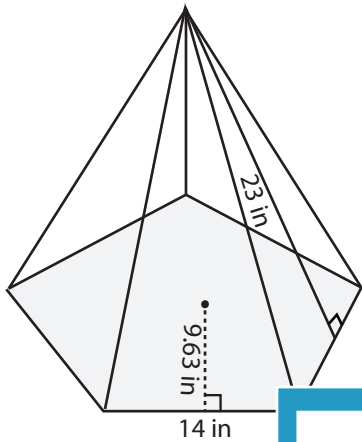


**Surface Area - Pyramid**

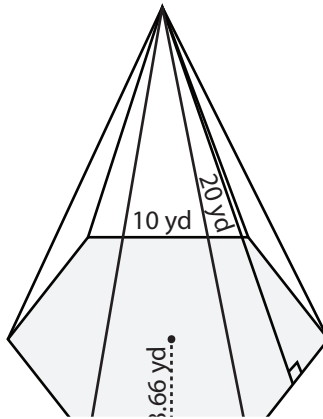
Find the surface area of each regular polygonal pyramid.

1)



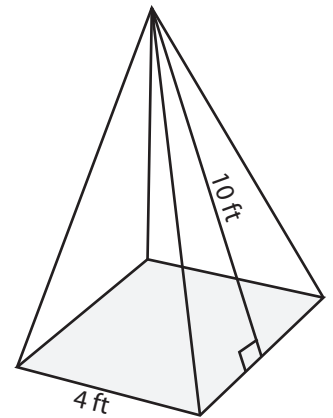
Surface Area = \_\_\_\_\_

2)

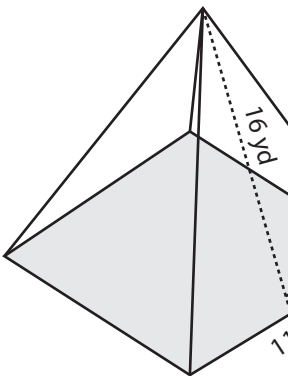


Surface Area = \_\_\_\_\_

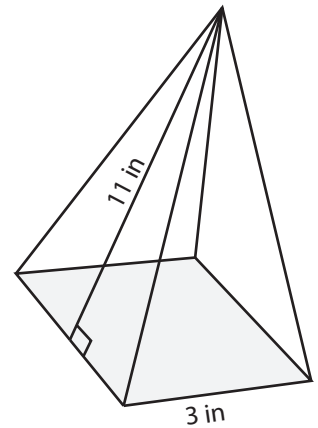
3)



4)

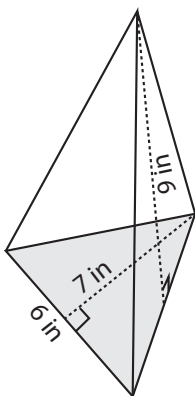


Surface Area = \_\_\_\_\_

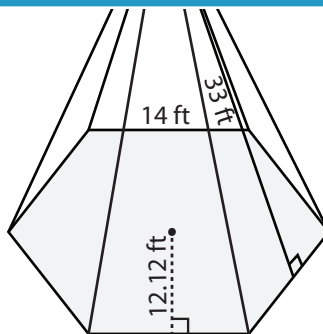


Surface Area = \_\_\_\_\_

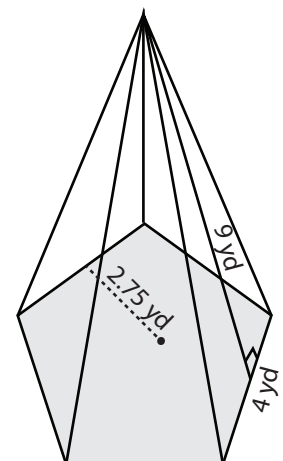
7)



Surface Area = \_\_\_\_\_



Surface Area = \_\_\_\_\_



Surface Area = \_\_\_\_\_

**PREVIEW**

Access the largest collection of worksheets for just **\$19.95** per year!

Members, please log in to download this worksheet.

**Log in**

Not a member? Please sign up to gain complete access.

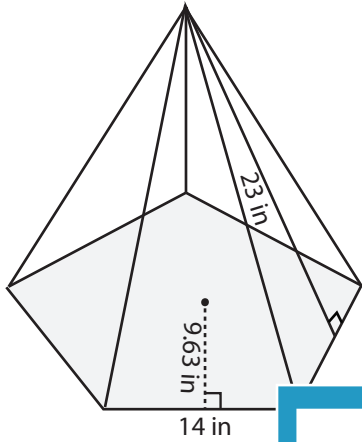
**Sign up**

[www.mathworksheets4kids.com](http://www.mathworksheets4kids.com)

**Surface Area - Pyramid**

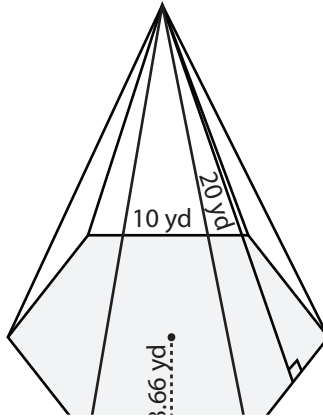
Find the surface area of each regular polygonal pyramid.

1)



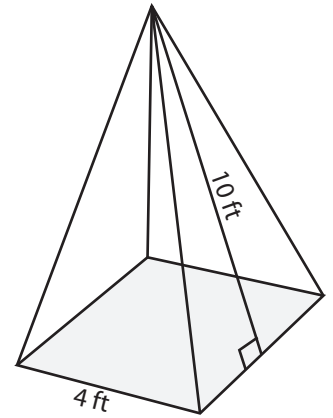
Surface Area = 1142.05 in<sup>2</sup>

2)

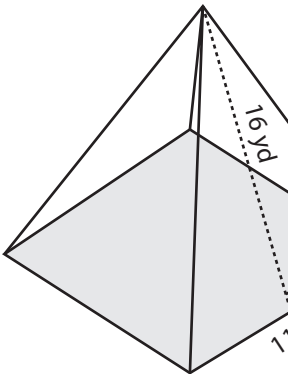


Surface Area = 96 ft<sup>2</sup>

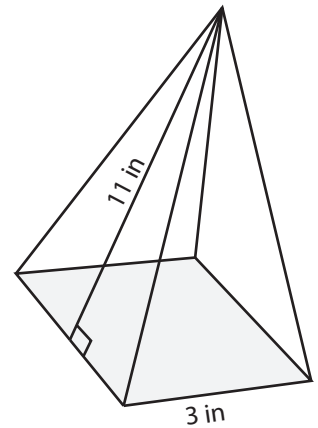
3)



4)

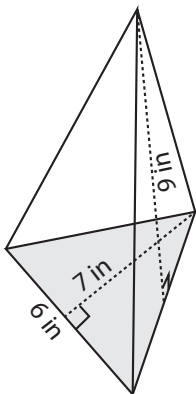


Surface Area = 473 yd<sup>2</sup>

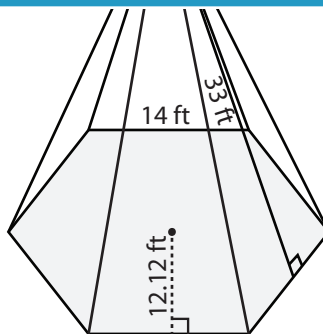


Surface Area = 75 in<sup>2</sup>

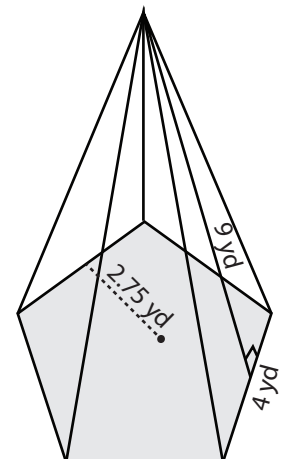
7)



Surface Area = 102 in<sup>2</sup>



Surface Area = 1895.04 ft<sup>2</sup>



Surface Area = 117.5 yd<sup>2</sup>

**PREVIEW**

Access the largest collection of worksheets for just **\$19.95** per year!

Members, please log in to download this worksheet.

**Log in**

Not a member? Please sign up to gain complete access.

**Sign up**

[www.mathworksheets4kids.com](http://www.mathworksheets4kids.com)