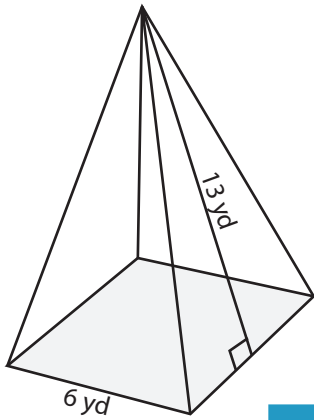


Surface Area - Pyramid

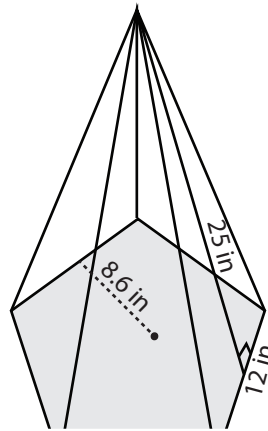
Find the surface area of each regular polygonal pyramid.

1)



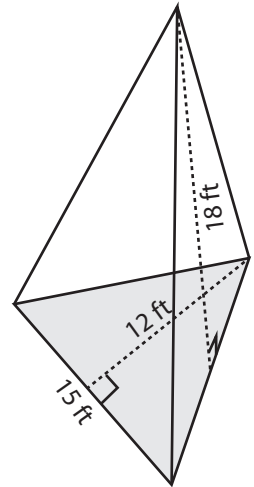
Surface Area = _____

2)

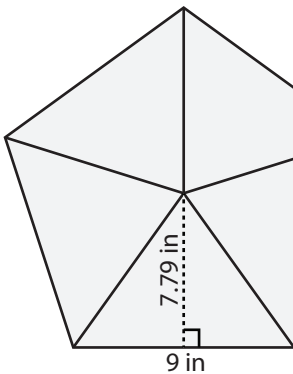


Surface Area = _____

3)



4)



Surface Area = _____

PREVIEW

Access the largest collection of
worksheets for just **\$19.95** per year!

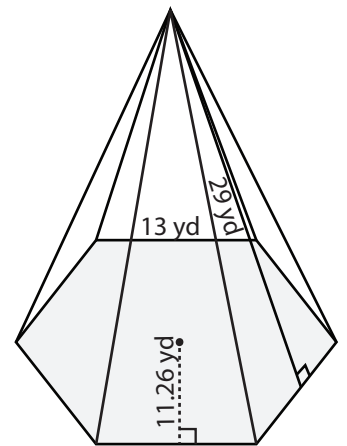
Members, please
log in to
download this
worksheet.

Log in

Not a member?
Please sign up to
gain complete
access.

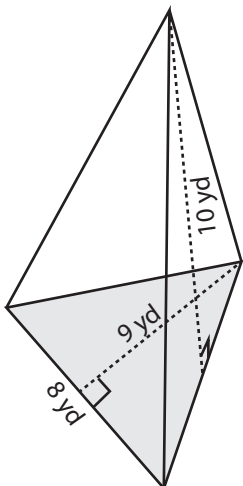
Sign up

www.mathworksheets4kids.com

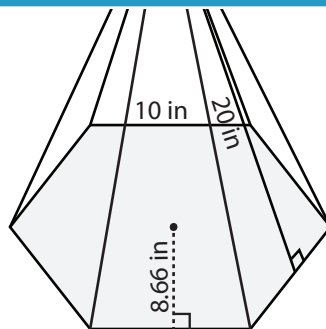


Surface Area = _____

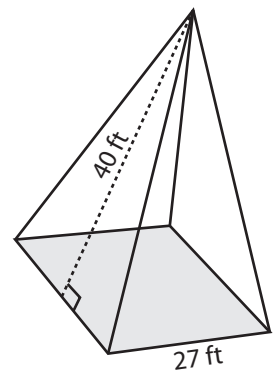
7)



Surface Area = _____



Surface Area = _____

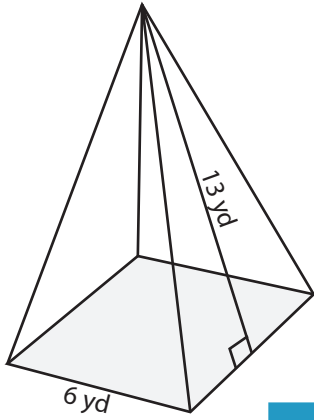


Surface Area = _____

Surface Area - Pyramid

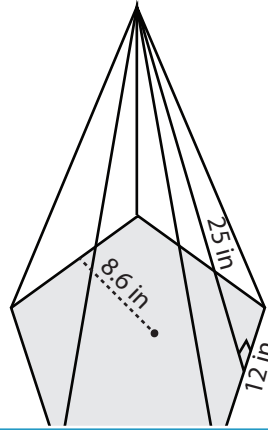
Find the surface area of each regular polygonal pyramid.

1)



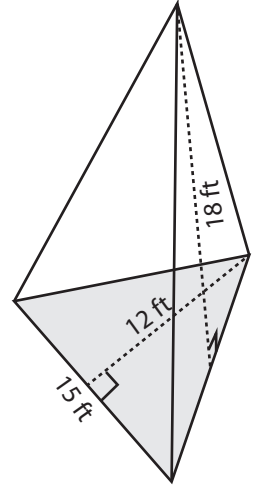
Surface Area = 192 yd²

2)

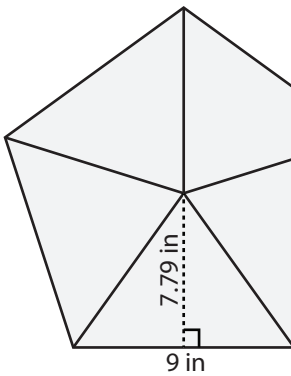


Surface Area = 495 ft²

3)



4)



Surface Area = 350.55 in²

PREVIEW

Access the largest collection of worksheets for just **\$19.95** per year!

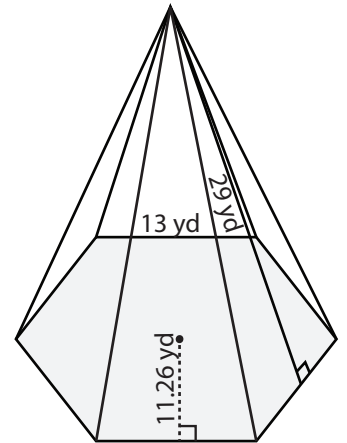
Members, please log in to download this worksheet.

Log in

Not a member? Please sign up to gain complete access.

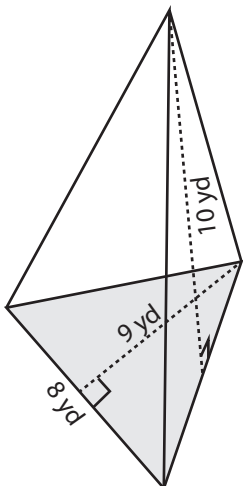
Sign up

www.mathworksheets4kids.com

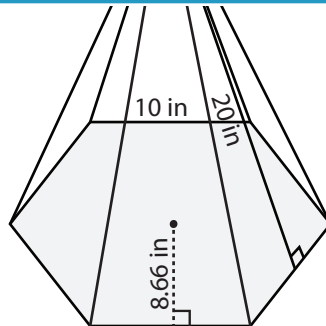


Surface Area = 1570.14 yd²

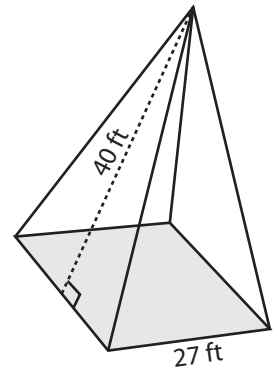
7)



Surface Area = 156 yd²



Surface Area = 859.8 in²



Surface Area = 2889 ft²