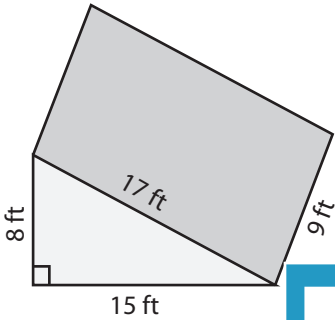


Surface Area: Prisms & Cylinders

L1ES2

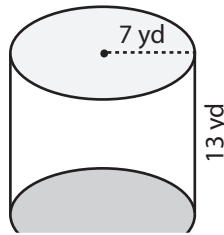
Find the exact surface area of each shape.

1)



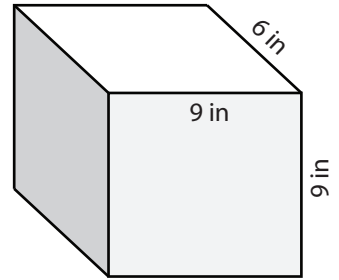
Surface Area = _____

2)

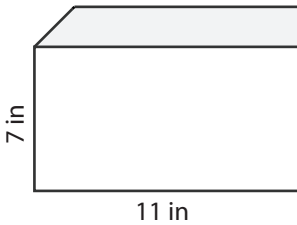


Surface Area = _____

3)



4)



Surface Area = _____

PREVIEW

Access the largest collection of
worksheets for just **\$19.95** per year!

Members, please
log in to
download this
worksheet.

Log in

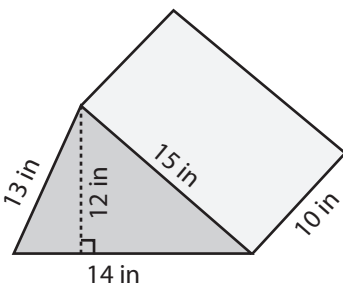
Not a member?
Please sign up to
gain complete
access.

Sign up

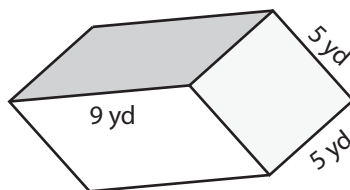
www.mathworksheets4kids.com

Surface Area = _____

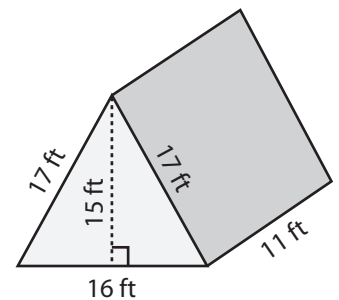
7)



Surface Area = _____



Surface Area = _____

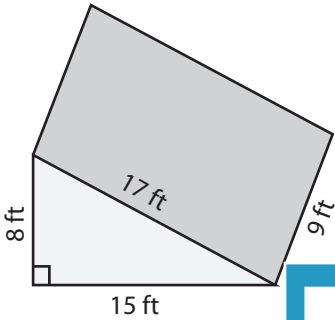


Surface Area = _____

Surface Area: Prisms & Cylinders

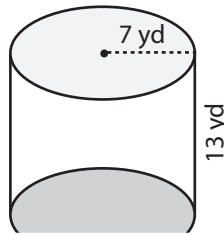
Find the exact surface area of each shape.

1)



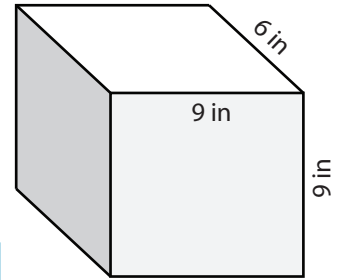
Surface Area = 480 ft²

2)

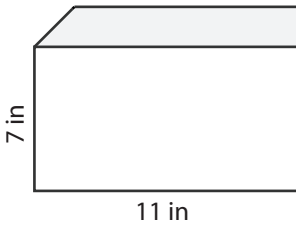


Surface Area = 378 in²

3)



4)



Surface Area = 298 in²

PREVIEW

Access the largest collection of
worksheets for just **\$19.95** per year!

Members, please
log in to
download this
worksheet.

Log in

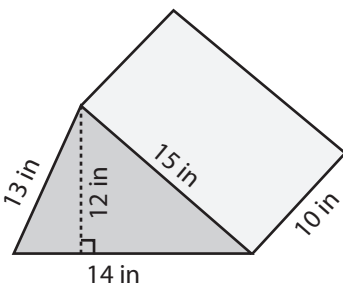
Not a member?
Please sign up to
gain complete
access.

Sign up

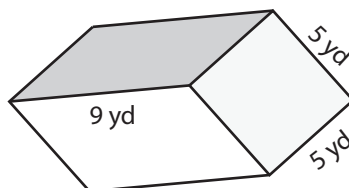
www.mathworksheets4kids.com

Surface Area = 396π yd²

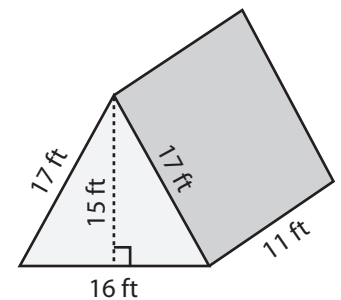
7)



Surface Area = 588 in²



Surface Area = 230 yd²



Surface Area = 790 ft²