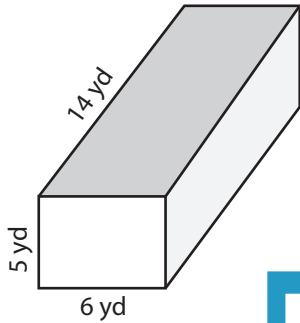


Surface Area: Prisms & Cylinders

L1ES3

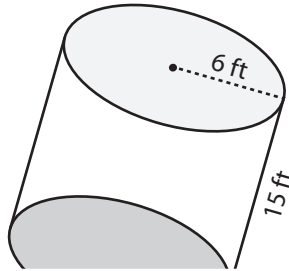
Find the exact surface area of each shape.

1)

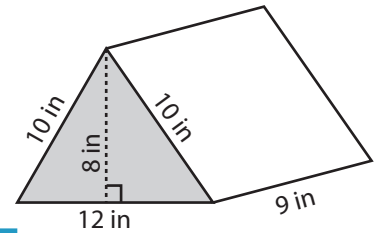


Surface Area = _____

2)

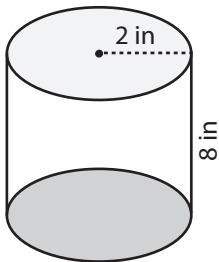


3)

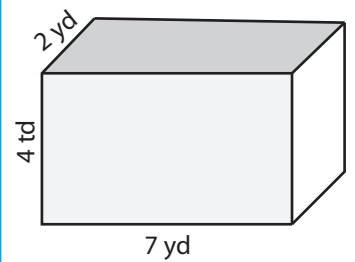


Surface Area = _____

4)

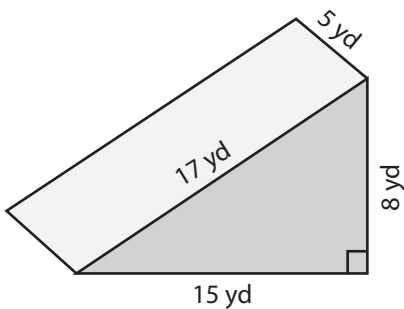


Surface Area = _____

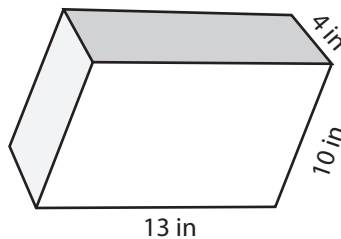


Surface Area = _____

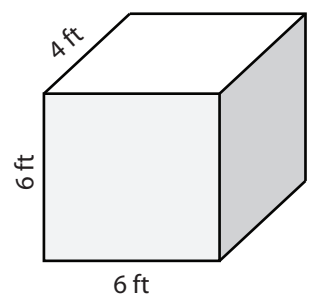
7)



Surface Area = _____



Surface Area = _____



Surface Area = _____

PREVIEW

Access the largest collection of
worksheets for just **\$19.95** per year!

Members, please
log in to
download this
worksheet.

Log in

Not a member?
Please sign up to
gain complete
access.

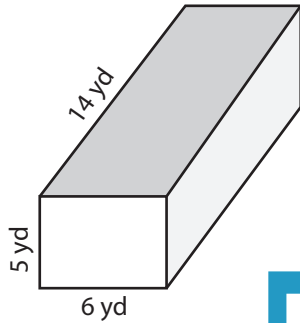
Sign up

www.mathworksheets4kids.com

Surface Area: Prisms & Cylinders

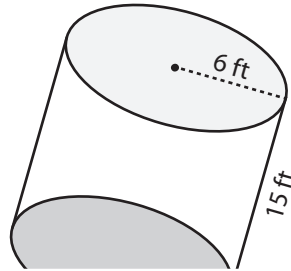
Find the exact surface area of each shape.

1)

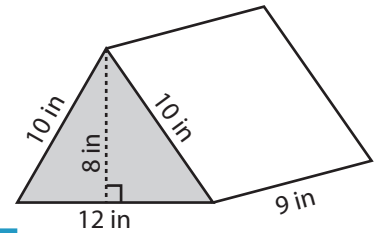


Surface Area = 368 yd²

2)

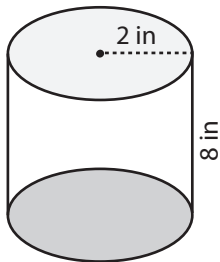


3)

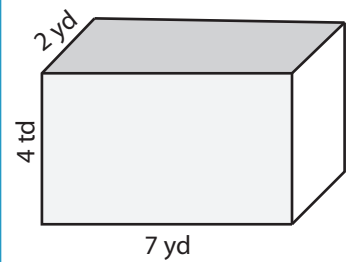


Surface Area = 384 in²

4)

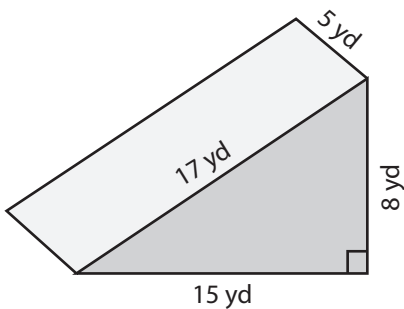


Surface Area = 40π in²

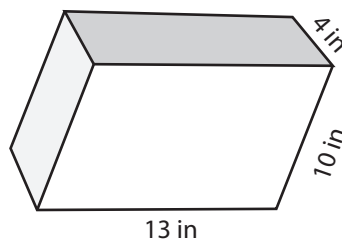


Surface Area = 100 yd²

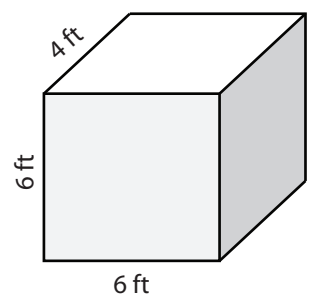
7)



Surface Area = 320 yd²



Surface Area = 444 in²



Surface Area = 168 ft²

PREVIEW

Access the largest collection of worksheets for just **\$19.95** per year!

Members, please log in to download this worksheet.

Log in

Not a member? Please sign up to gain complete access.

Sign up

www.mathworksheets4kids.com