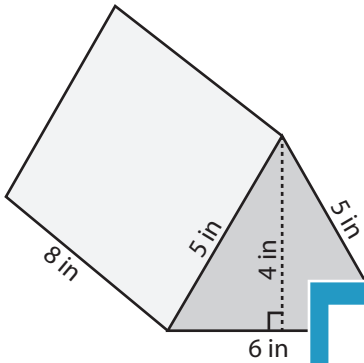


Surface Area: Prisms & Cylinders

L2ES3

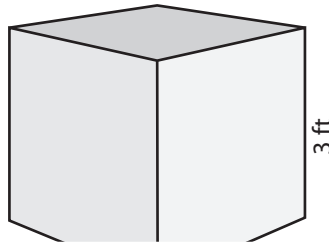
Find the exact surface area of each shape.

1)

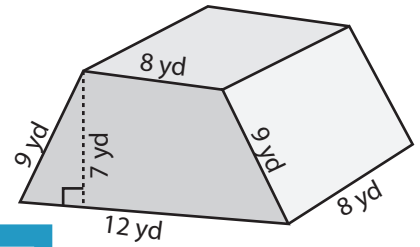


Surface Area = _____

2)

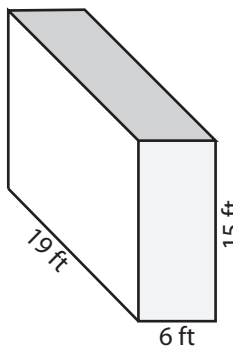


3)



face Area = _____

4)



Surface Area = _____

PREVIEW

Access the largest collection of
worksheets for just **\$19.95** per year!

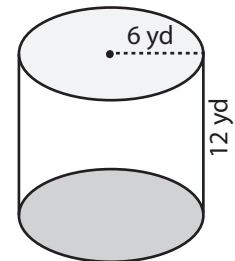
Members, please
log in to
download this
worksheet.

Log in

Not a member?
Please sign up to
gain complete
access.

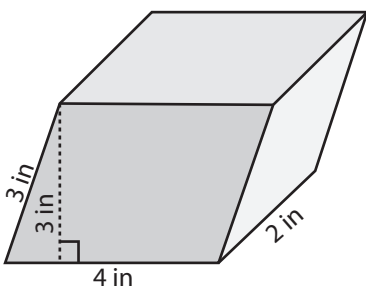
Sign up

www.mathworksheets4kids.com

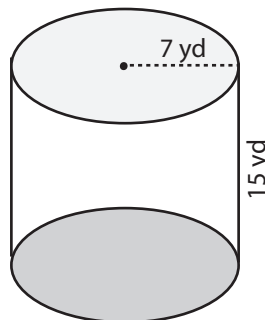


face Area = _____

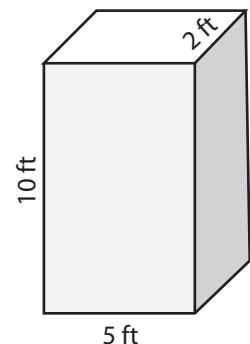
7)



Surface Area = _____



Surface Area = _____

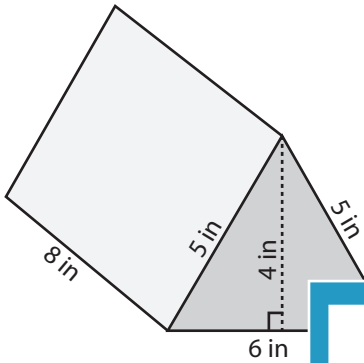


Surface Area = _____

Surface Area: Prisms & Cylinders

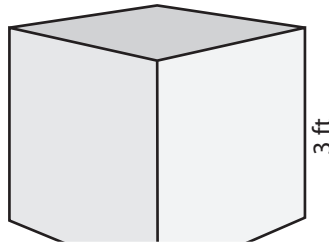
Find the exact surface area of each shape.

1)

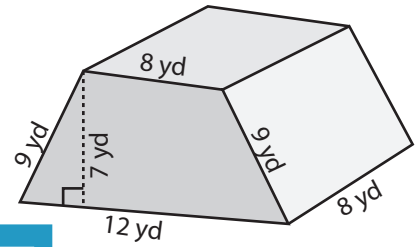


Surface Area = 152 in²

2)

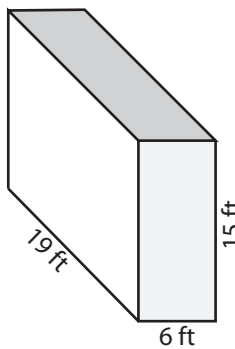


3)



face Area = 444 yd²

4)



Surface Area = 978 ft²

PREVIEW

Access the largest collection of
worksheets for just **\$19.95** per year!

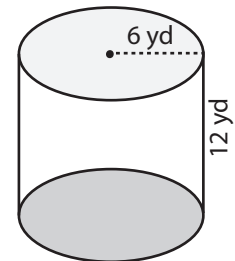
Members, please
log in to
download this
worksheet.

Log in

Not a member?
Please sign up to
gain complete
access.

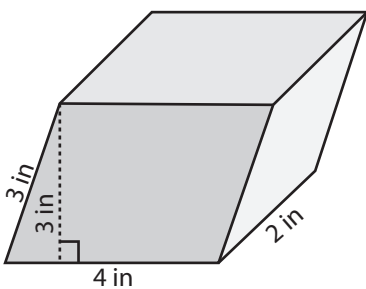
Sign up

www.mathworksheets4kids.com

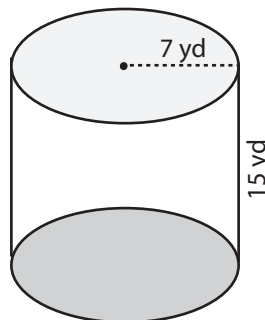


face Area = 216π yd²

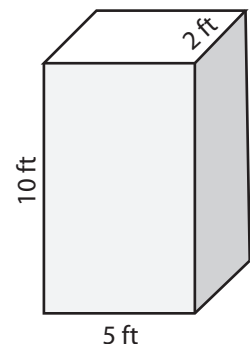
7)



Surface Area = 52 in²



Surface Area = 308π yd²



Surface Area = 160 ft²