

Name : _____

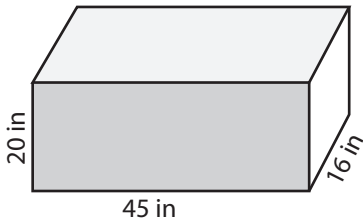
Score : _____

Surface Area - Rectangular Prism

MS2

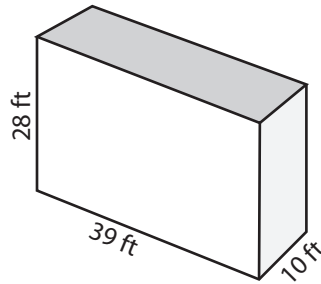
Find the surface area of each rectangular prism.

1)



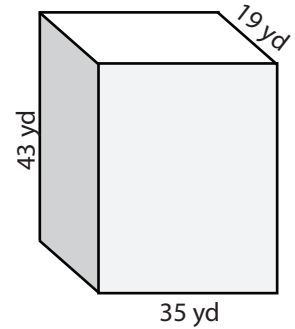
Surface Area = _____

2)



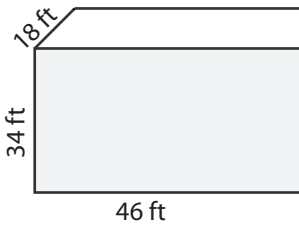
Surface Area = _____

3)

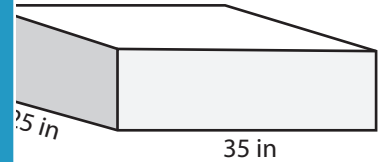


Surface Area = _____

4)

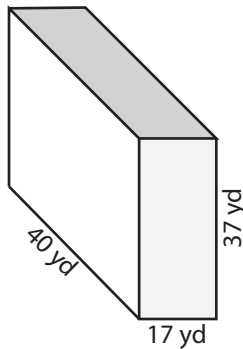


Surface Area = _____



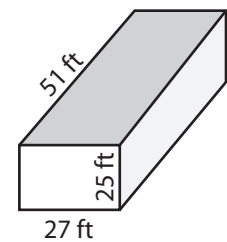
Surface Area = _____

7)



Surface Area = _____

Surface Area = _____



Surface Area = _____

PREVIEW

Access the largest collection of
worksheets for just **\$19.95** per year!

Members, please
log in to
download this
worksheet.
Log in

Not a member?
Please sign up to
gain complete
access.
Sign up

www.mathworksheets4kids.com

10) George made a small wooden box that has a dimension of 18 in x 25 in x 30 in. Find the surface area of the box?

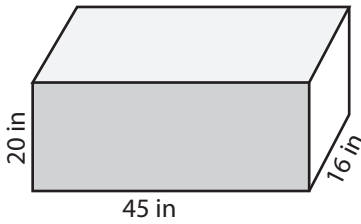
Surface Area = _____

Surface Area - Rectangular Prism

MS2

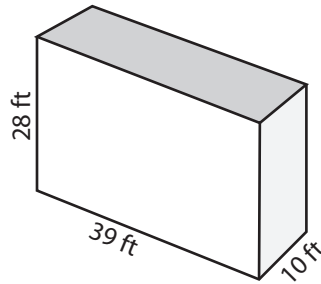
Find the surface area of each rectangular prism.

1)



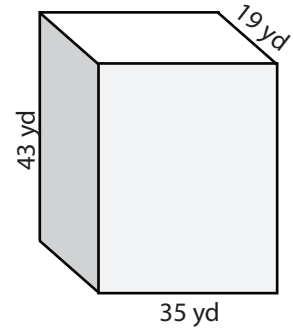
Surface Area = 3880 in²

2)



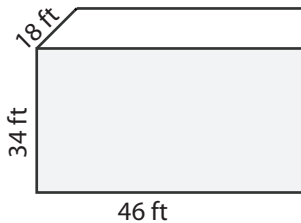
Surface Area = 3524 ft²

3)

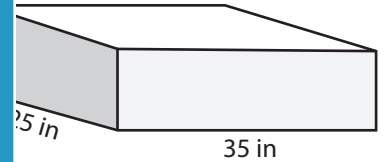


Surface Area = 5974 yd²

4)

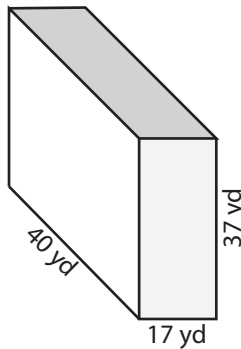


Surface Area = 6008 ft²



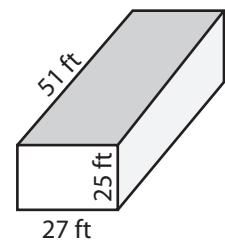
Surface Area = 4270 in²

7)



Surface Area = 5578 yd²

Surface Area = 5560 in²



Surface Area = 6654 ft²

PREVIEW

Access the largest collection of
worksheets for just **\$19.95** per year!

Members, please
log in to
download this
worksheet.

Log in

Not a member?
Please sign up to
gain complete
access.

Sign up

www.mathworksheets4kids.com

10) George made a small wooden box that has a dimension of 18 in x 25 in x 30 in. Find the surface area of the box?

Surface Area = 3480 in²