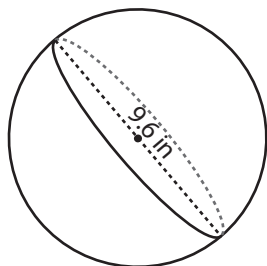


Surface Area - Sphere & Hemisphere

DS2

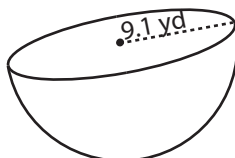
Find the surface area of each shape. Round the answer to two decimal places. (use $\pi = 3.14$)

1)



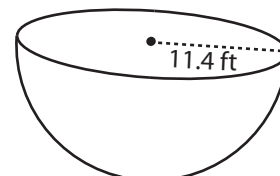
Surface Area = _____

2)

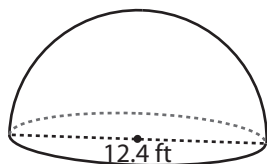


face Area = _____

3)



4)



Surface Area = _____

PREVIEW

Access the largest collection of
worksheets for just **\$19.95** per year!

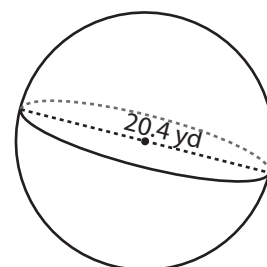
Members, please
log in to
download this
worksheet.

Log in

Not a member?
Please sign up to
gain complete
access.

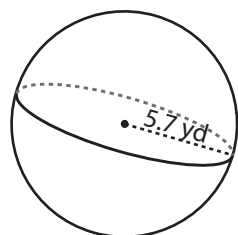
Sign up

www.mathworksheets4kids.com

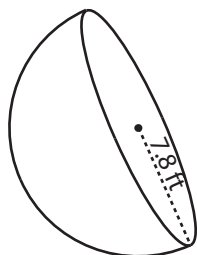


face Area = _____

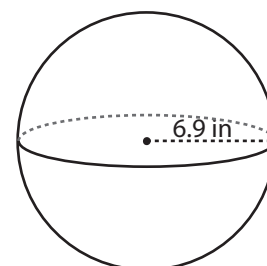
7)



Surface Area = _____



Surface Area = _____



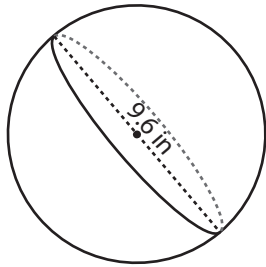
Surface Area = _____

Answer key**Surface Area - Sphere & Hemisphere**

DS2

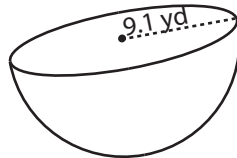
Find the surface area of each shape. Round the answer to two decimal places. (use $\pi = 3.14$)

1)



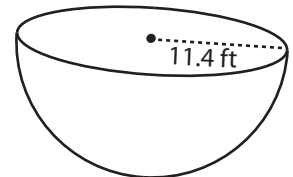
Surface Area = 289.38 in²

2)

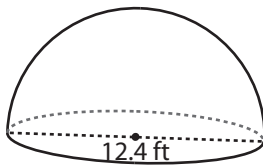


Surface Area = 1224.22 ft²

3)



4)



Surface Area = 362.1 ft²

PREVIEW

Access the largest collection of
worksheets for just **\$19.95** per year!

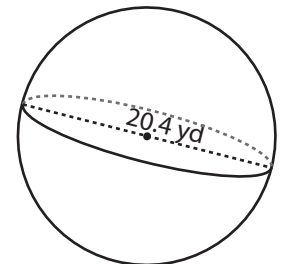
Members, please
log in to
download this
worksheet.

Log in

Not a member?
Please sign up to
gain complete
access.

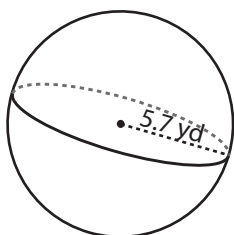
Sign up

www.mathworksheets4kids.com

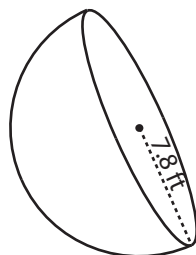


Surface Area = 1306.74 yd²

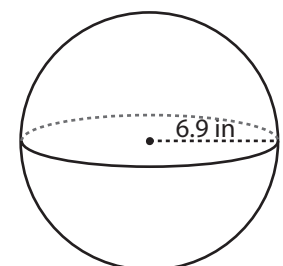
7)



Surface Area = 408.07 yd²



Surface Area = 573.11 ft²



Surface Area = 597.98 in²