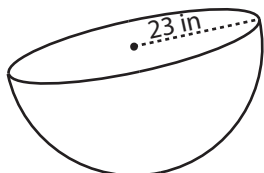


Surface Area - Sphere & Hemisphere

MS1

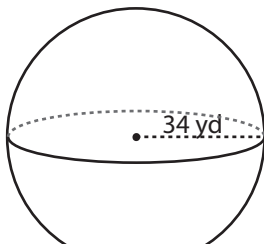
Find the surface area of each shape. (use $\pi = 3.14$)

1)



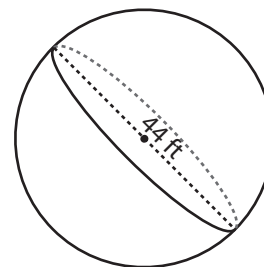
Surface Area = _____

2)

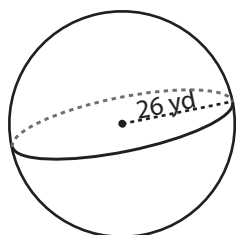


face Area = _____

3)



4)



Surface Area = _____

PREVIEW

Access the largest collection of
worksheets for just **\$19.95** per year!

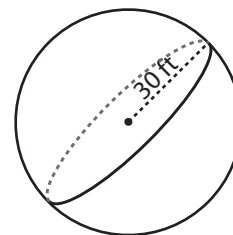
Members, please
log in to
download this
worksheet.

Log in

Not a member?
Please sign up to
gain complete
access.

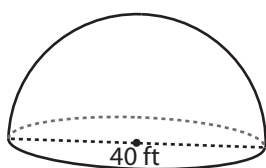
Sign up

www.mathworksheets4kids.com

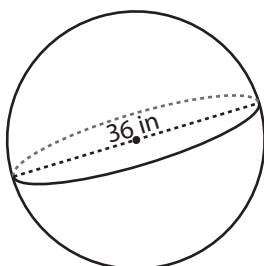


face Area = _____

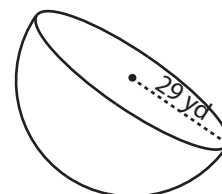
7)



Surface Area = _____



Surface Area = _____



Surface Area = _____

Name : _____

Score : _____

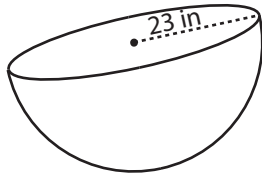
Answer key

Surface Area - Sphere & Hemisphere

MS1

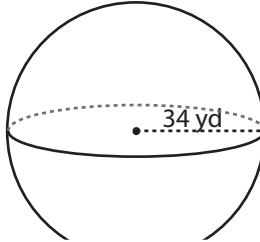
Find the surface area of each shape. (use $\pi = 3.14$)

1)



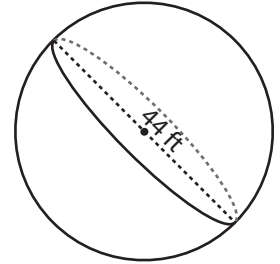
Surface Area = 4983.18

2)

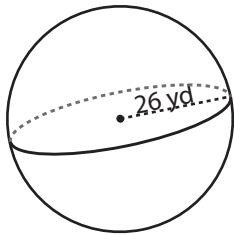


Surface Area = 6079.04 ft²

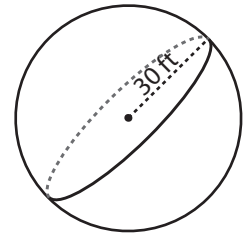
3)



4)

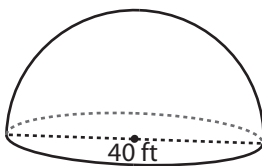


Surface Area = 8490.56

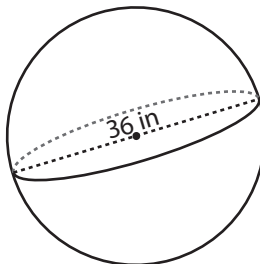


Surface Area = 11304 ft²

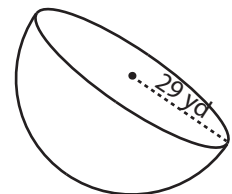
7)



Surface Area = 3768 ft²



Surface Area = 4069.44 in²



Surface Area = 7922.22 yd²

PREVIEW

Access the largest collection of worksheets for just **\$19.95** per year!

Members, please log in to download this worksheet. **Log in**

Not a member? Please sign up to gain complete access. **Sign up**

www.mathworksheets4kids.com