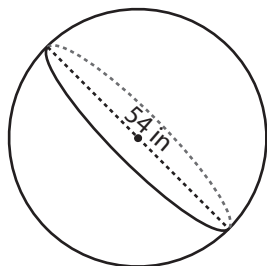


## Surface Area - Sphere & Hemisphere

MS2

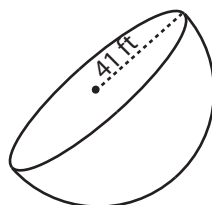
Find the surface area of each shape. ( use  $\pi = 3.14$  )

1)



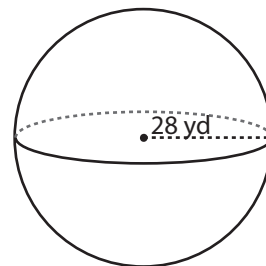
Surface Area = \_\_\_\_\_

2)

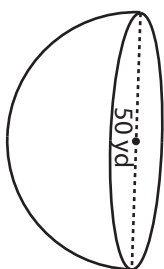


face Area = \_\_\_\_\_

3)



4)



Surface Area = \_\_\_\_\_

**PREVIEW**

Access the largest collection of  
worksheets for just **\$19.95** per year!

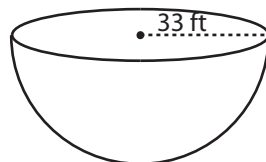
Members, please  
log in to  
download this  
worksheet.

Log in

Not a member?  
Please sign up to  
gain complete  
access.

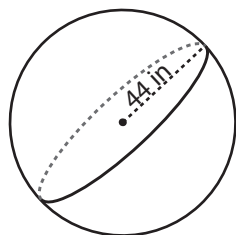
Sign up

[www.mathworksheets4kids.com](http://www.mathworksheets4kids.com)

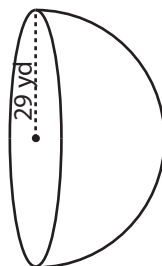


face Area = \_\_\_\_\_

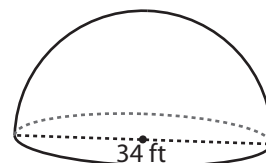
7)



Surface Area = \_\_\_\_\_



Surface Area = \_\_\_\_\_



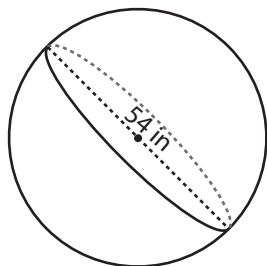
Surface Area = \_\_\_\_\_

**Answer key****Surface Area - Sphere & Hemisphere**

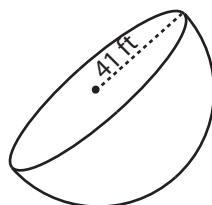
MS2

Find the surface area of each shape. ( use  $\pi = 3.14$  )

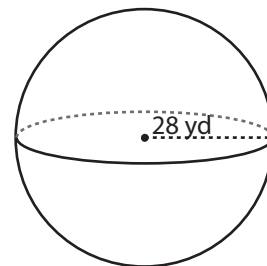
1)

Surface Area = 9156.24 in<sup>2</sup>

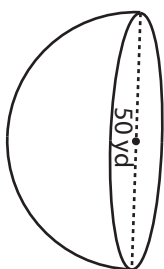
2)

Surface Area = 9847.04 yd<sup>2</sup>

3)



4)

Surface Area = 5887.5 yd<sup>2</sup>

**PREVIEW**

Access the largest collection of  
worksheets for just **\$19.95** per year!

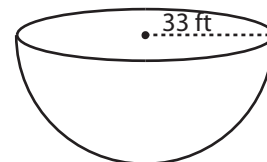
Members, please  
log in to  
download this  
worksheet.

**Log in**

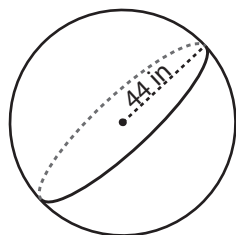
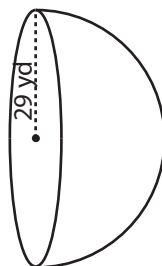
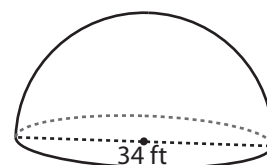
Not a member?  
Please sign up to  
gain complete  
access.

**Sign up**

[www.mathworksheets4kids.com](http://www.mathworksheets4kids.com)

Surface Area = 10258.38 ft<sup>2</sup>

7)

Surface Area = 24316.16 in<sup>2</sup>Surface Area = 7922.22 yd<sup>2</sup>Surface Area = 2722.38 ft<sup>2</sup>