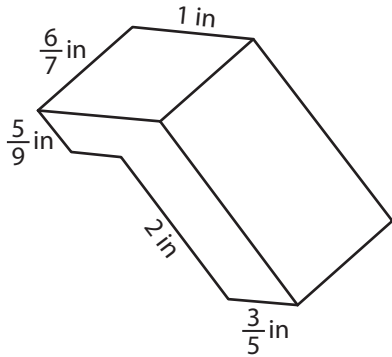


Name : _____

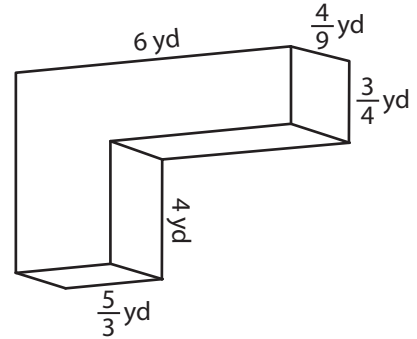
Surface Area - Solid Figures

Find the surface area of each solid figure.

1)

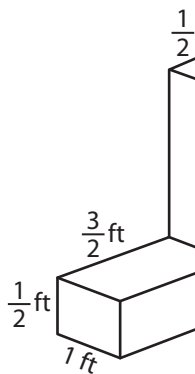


2)



Surface Area = _____

3)



Surface Area = _____

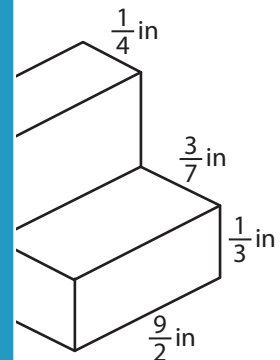
PREVIEW

Gain complete access to the largest collection of worksheets in all subjects!

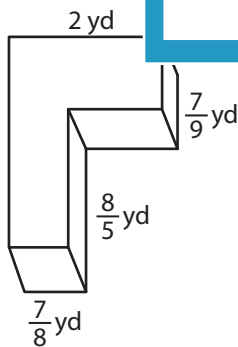
Members, please log in to download this worksheet.

Not a member? Please sign up to gain complete access.

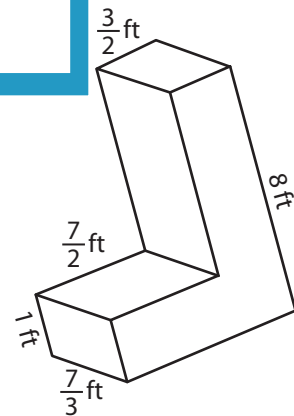
www.mathworksheets4kids.com



5)



Surface Area = _____



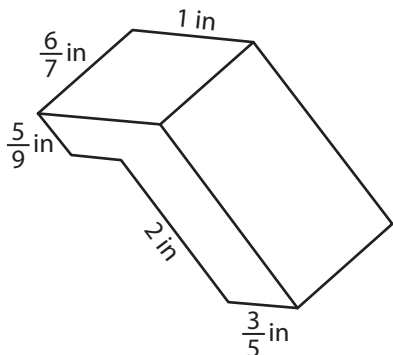
Surface Area = _____

Name : _____

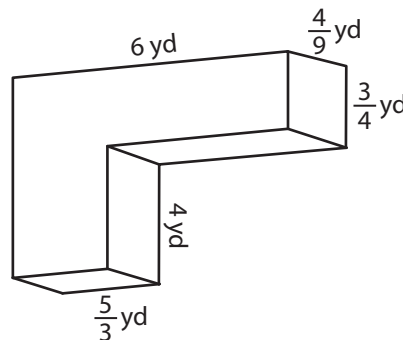
Surface Area - Solid Figures

Find the surface area of each solid figure.

1)



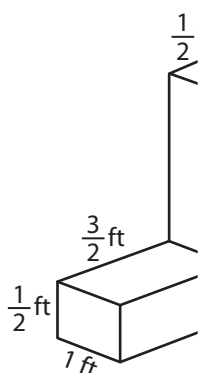
2)



Surface Area = _____

$\frac{287}{9}$ or $31\frac{8}{9}$ yd²

3)

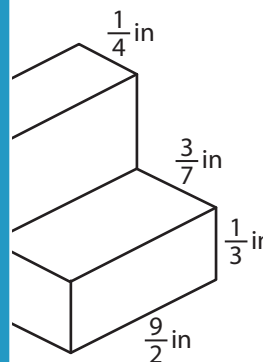


PREVIEW
Gain complete access to the largest collection of worksheets in all subjects!

Members, please log in to download this worksheet.

Not a member? Please sign up to gain complete access.

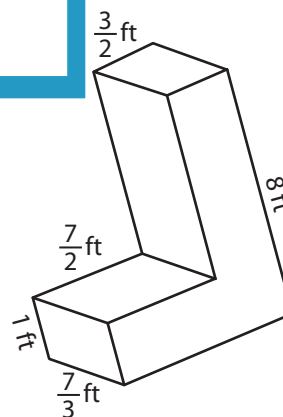
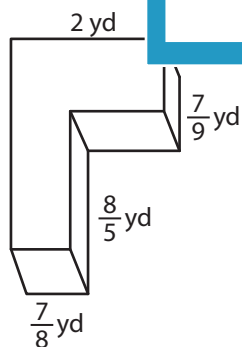
www.mathworksheets4kids.com



Surface Area = _____

$\frac{27}{2}$ or $13\frac{1}{2}$ in²

5)



Surface Area = _____

$\frac{43}{6}$ or $7\frac{1}{6}$ yd²

Surface Area = _____

$\frac{275}{3}$ or $91\frac{2}{3}$ ft²