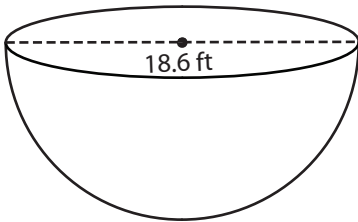


Name : _____

Surface Area of Mixed Shapes

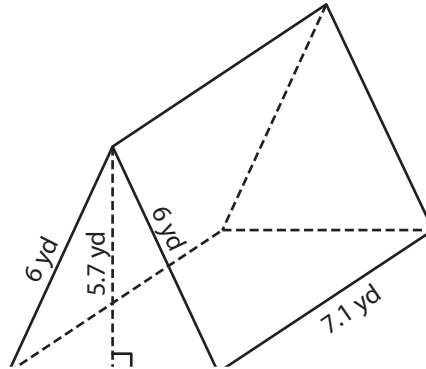
Find the surface area of each shape. Round your answer to two decimal places.
(use $\pi = 3.14$)

1)

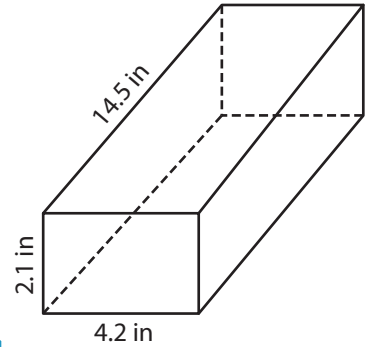


Surface Area = _____

2)

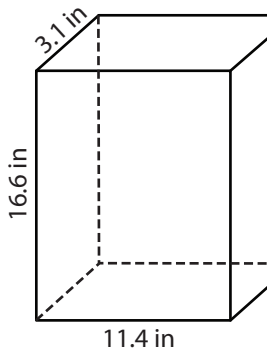


3)



Surface Area = _____

4)



Surface Area = _____

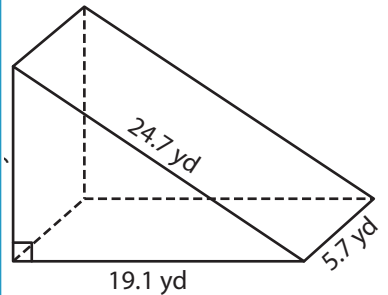
PREVIEW

Gain complete access to the largest collection of worksheets in all subjects!

Members, please log in to download this worksheet.

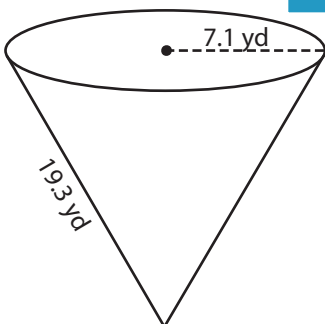
Not a member? Please sign up to gain complete access.

www.mathworksheets4kids.com

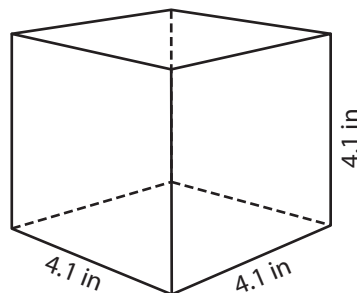


Surface Area = _____

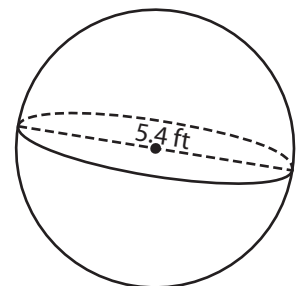
7)



Surface Area = _____



Surface Area = _____



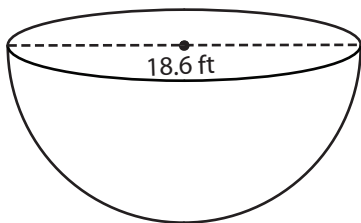
Surface Area = _____

Name : _____

Surface Area of Mixed Shapes

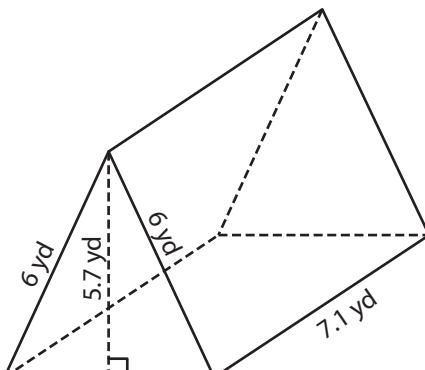
Find the surface area of each shape. Round your answer to two decimal places. (use $\pi = 3.14$)

1)

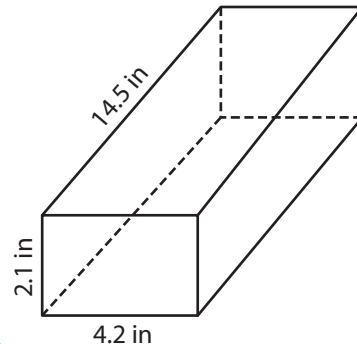


Surface Area = 814.74

2)

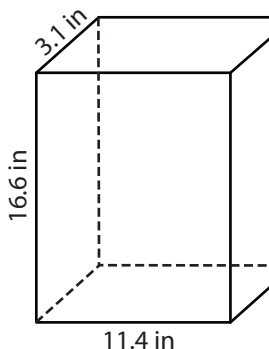


3)



Surface Area = 200.34 in²

4)



Surface Area = 552.08

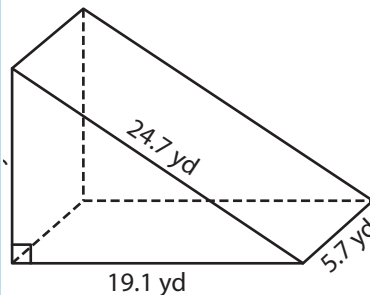
PREVIEW

Gain complete access to the largest collection of worksheets in all subjects!

Members, please log in to download this worksheet.

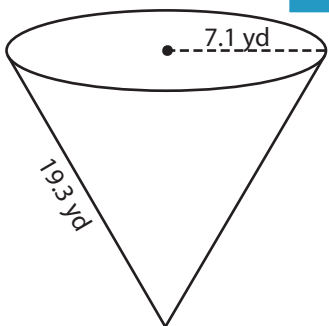
Not a member? Please sign up to gain complete access.

www.mathworksheets4kids.com

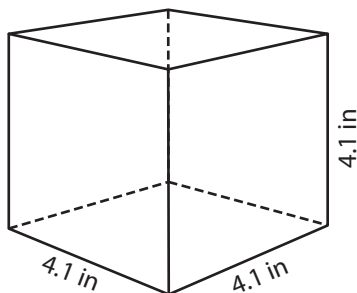


Surface Area = 641.5 yd²

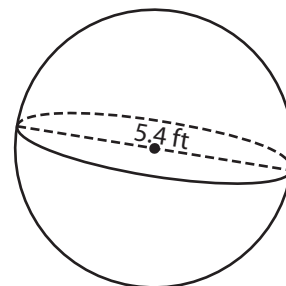
7)



Surface Area = 588.56 yd²



Surface Area = 100.86 in²



Surface Area = 91.56 ft²