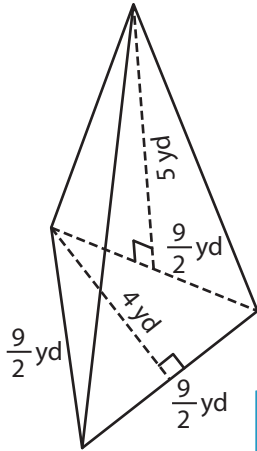


Name : _____

Surface Area of Mixed Shapes

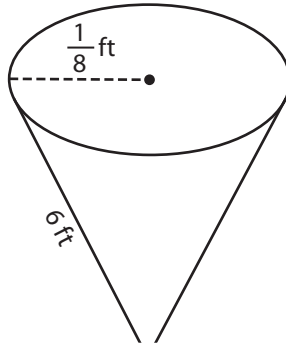
Find the surface area of each shape. Round your answer to two decimal places.
(use $\pi = 3.14$)

1)



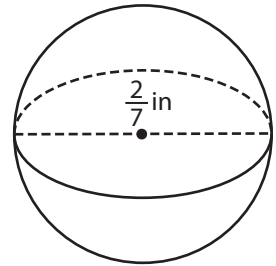
Surface Area = _____

2)

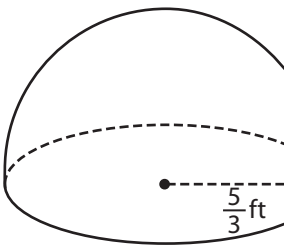


Surface Area = _____

3)



4)



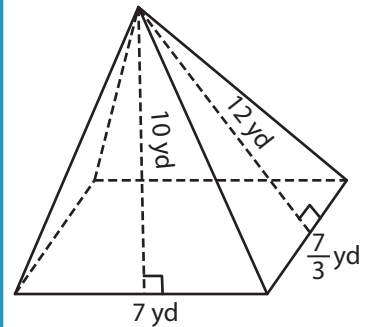
Surface Area = _____

Gain complete access to the largest collection of worksheets in all subjects!

Members, please log in to download this worksheet.

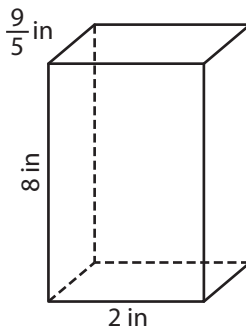
Not a member? Please sign up to gain complete access.

www.mathworksheets4kids.com

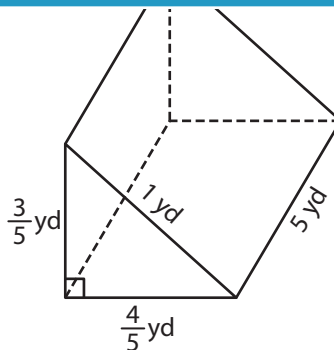


Surface Area = _____

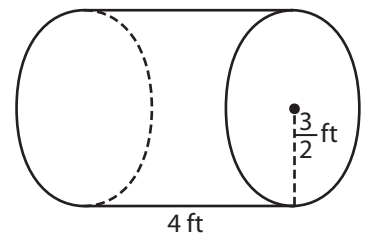
7)



Surface Area = _____



Surface Area = _____



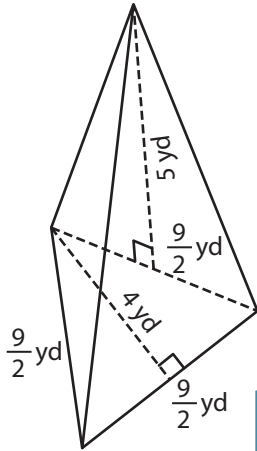
Surface Area = _____

Name : _____

Surface Area of Mixed Shapes

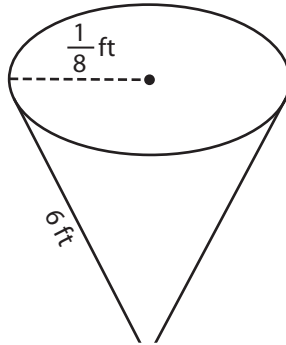
Find the surface area of each shape. Round your answer to two decimal places. (use $\pi = 3.14$)

1)



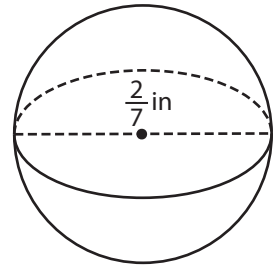
Surface Area = 42.75

2)

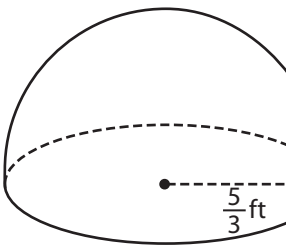


Surface Area = 0.26 in²

3)



4)



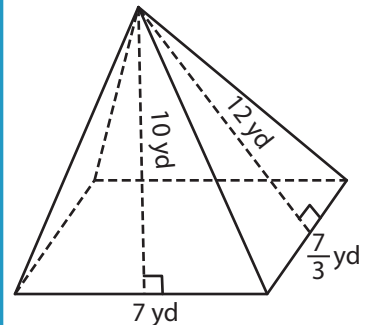
Surface Area = 26.17

Gain complete access to the largest collection of worksheets in all subjects!

Members, please log in to download this worksheet.

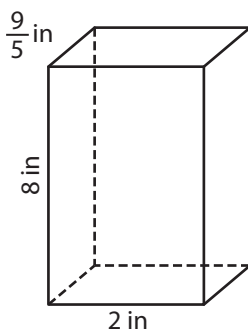
Not a member? Please sign up to gain complete access.

www.mathworksheets4kids.com

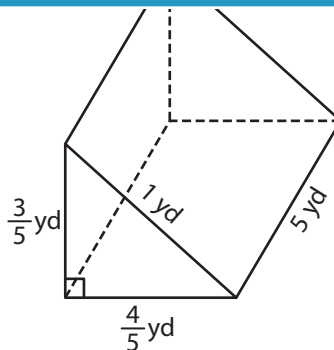


Surface Area = 114.33 yd²

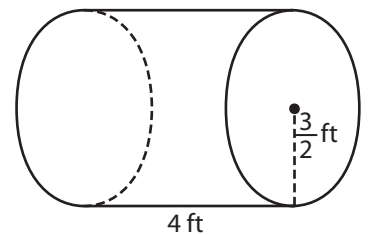
7)



Surface Area = 68 in²



Surface Area = 12.48 yd²



Surface Area = 51.81 ft²