

Name : _____

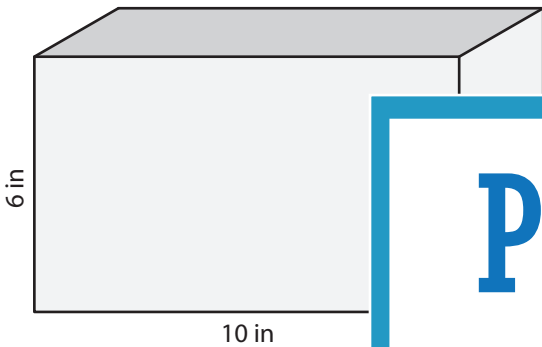
Surface Area of Solids using Nets

Sheet 1

Draw the net to represent each solid figure, and find the surface area.

Shapes

Nets



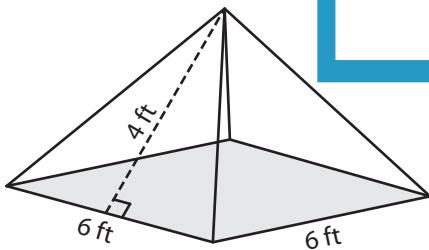
PREVIEW

Gain complete access to the largest collection of worksheets in all subjects!

Members, please log in to download this worksheet.

Not a member? Please sign up to gain complete access.

www.mathworksheets4kids.com

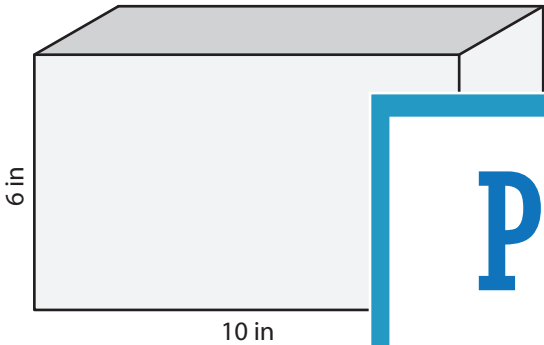
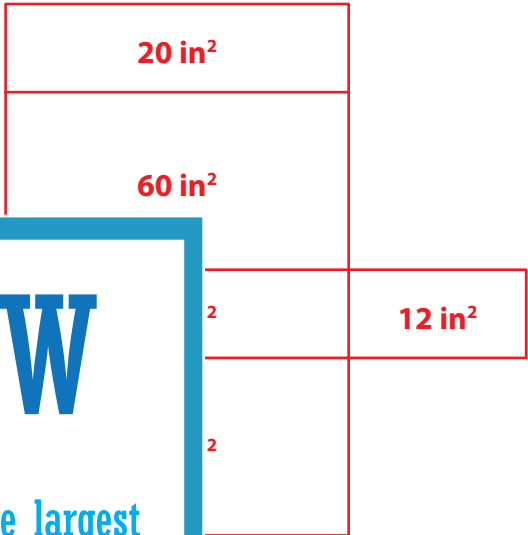
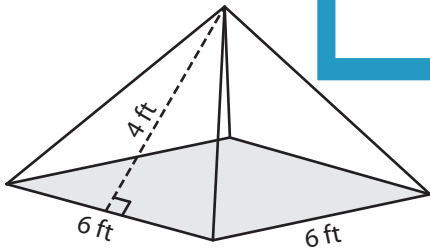
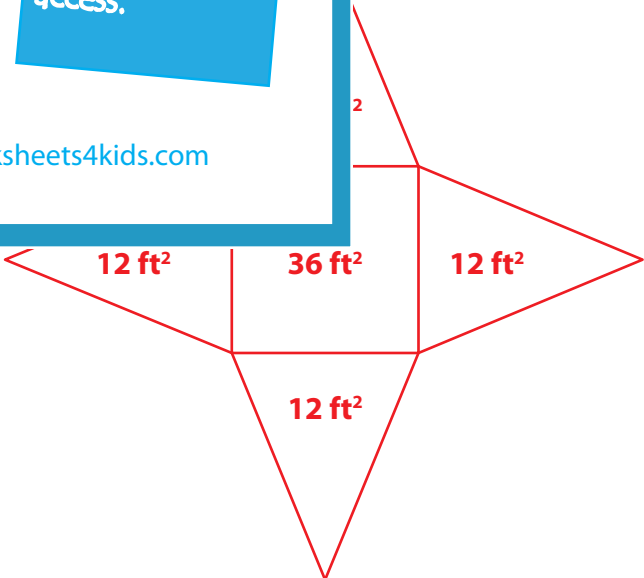


Surface Area = _____

Name : _____

Surface Area of Solids using Nets

Draw the net to represent each solid figure, and find the surface area.

Shapes	Nets
	 <p style="text-align: right;">Surface Area = <u>184 in²</u></p>
	 <p style="text-align: right;">Surface Area = <u>84 ft²</u></p>

PREVIEW

Gain complete access to the largest collection of worksheets in all subjects!

Members, please log in to download this worksheet.

Not a member? Please sign up to gain complete access.

www.mathworksheets4kids.com