

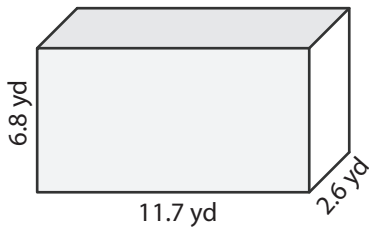
Name : _____

Decimals: L1S3

Surface Area of Prisms & Cylinders

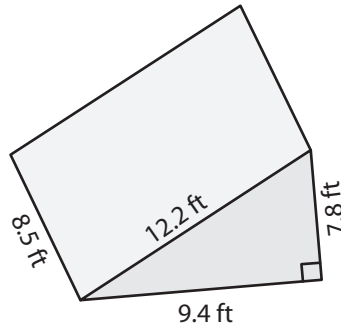
Find the surface area of each shape. Round your answer to two decimal places.
(use $\pi = 3.14$)

1)

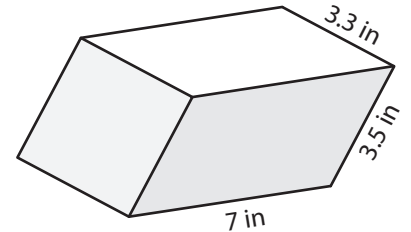


Surface Area = _____

2)

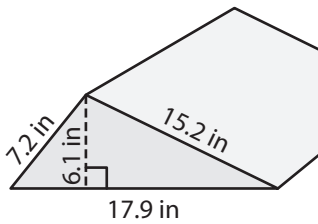


3)



Surface Area = _____

4)



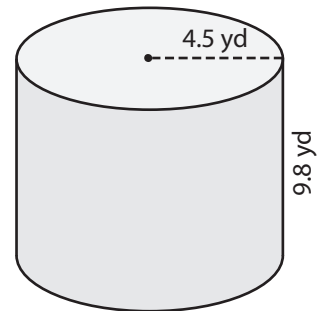
Surface Area = _____

Gain complete access to the largest collection of worksheets in all subjects!

Members, please log in to download this worksheet.

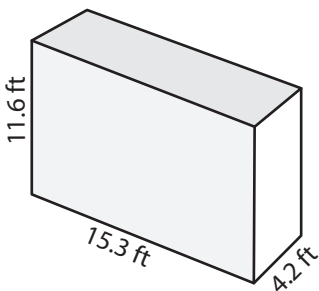
Not a member? Please sign up to gain complete access.

www.mathworksheets4kids.com

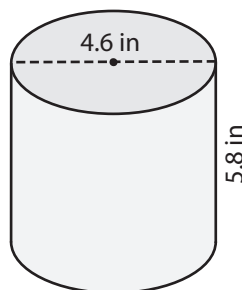


Surface Area = _____

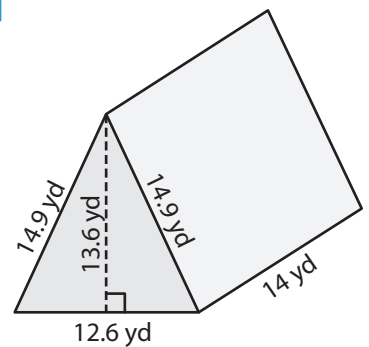
7)



Surface Area = _____



Surface Area = _____



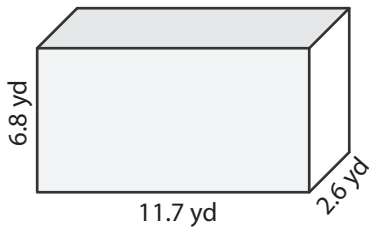
Surface Area = _____

Name : _____

Surface Area of Prisms & Cylinders

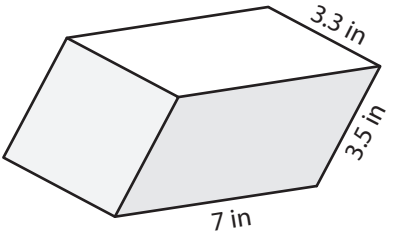
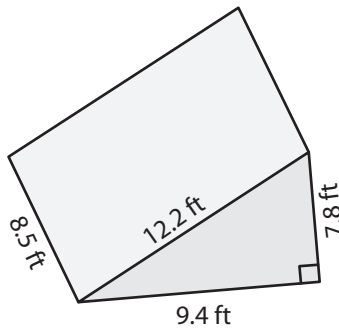
Find the surface area of each shape. Round your answer to two decimal places.
(use $\pi = 3.14$)

1)



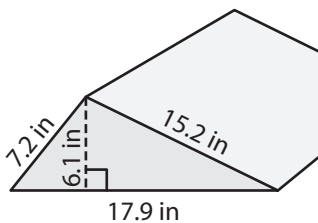
Surface Area = 255.32

2)



Surface Area = 118.3 in²

4)



Surface Area = 568.61

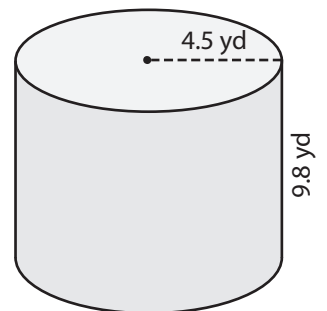
PREVIEW

Gain complete access to the largest collection of worksheets in all subjects!

Members, please log in to download this worksheet.

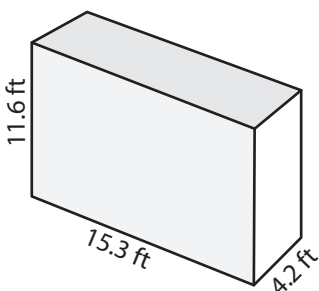
Not a member? Please sign up to gain complete access.

www.mathworksheets4kids.com

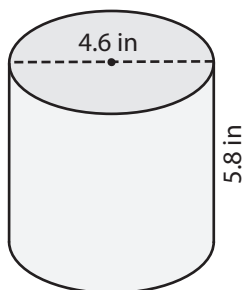


Surface Area = 404.12 yd²

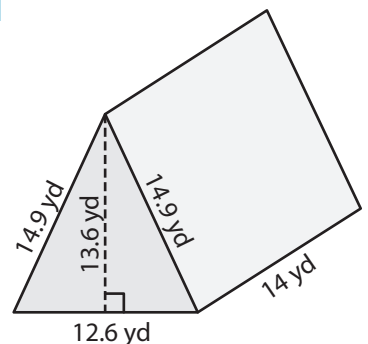
7)



Surface Area = 580.92 ft²



Surface Area = 117 in²



Surface Area = 764.96 yd²