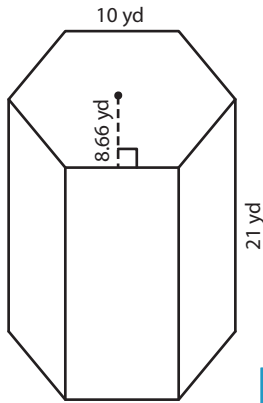


# Surface Area of Polygonal Prisms

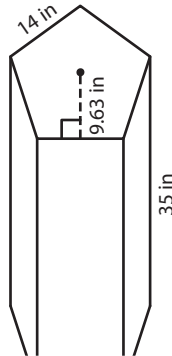
Find the surface area of each regular polygonal prism.

1)



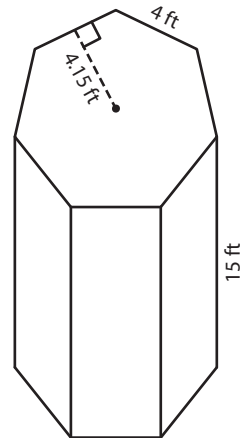
Surface Area = \_\_\_\_\_

2)

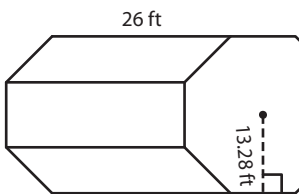


Surface Area = \_\_\_\_\_

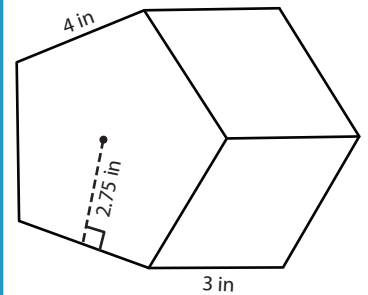
3)



4)

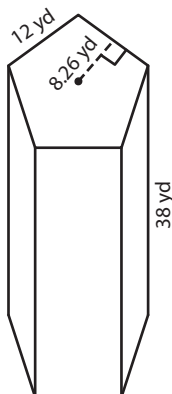


Surface Area = \_\_\_\_\_

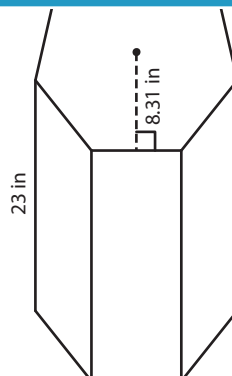


Surface Area = \_\_\_\_\_

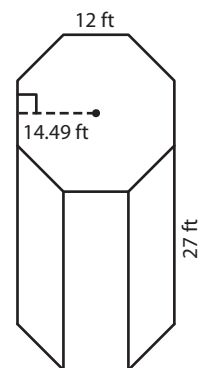
7)



Surface Area = \_\_\_\_\_



Surface Area = \_\_\_\_\_



Surface Area = \_\_\_\_\_

# PREVIEW

Gain complete access to the largest collection of worksheets in all subjects!

Members, please log in to download this worksheet.

Not a member? Please sign up to gain complete access.

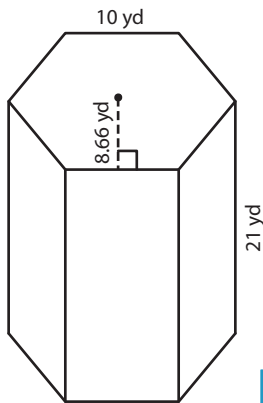
[www.mathworksheets4kids.com](http://www.mathworksheets4kids.com)

Name : \_\_\_\_\_

# Surface Area of Polygonal Prisms

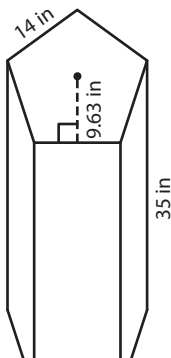
Find the surface area of each regular polygonal prism.

1)



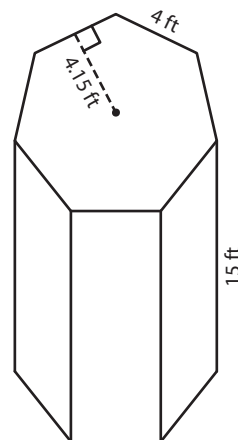
Surface Area = 1,779.6

2)

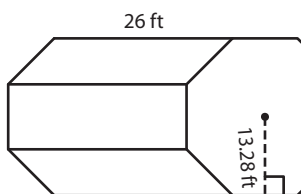


Surface Area = 536.2 ft<sup>2</sup>

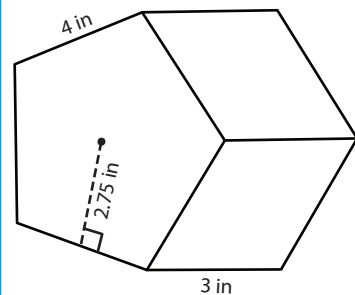
3)



4)

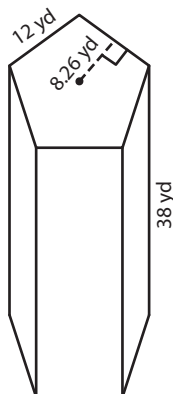


Surface Area = 3,456.6

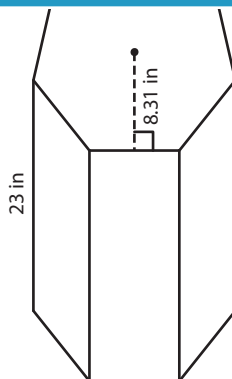


Surface Area = 115 in<sup>2</sup>

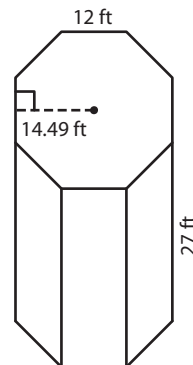
7)



Surface Area = 2,775.6 yd<sup>2</sup>



Surface Area = 1,753.36 in<sup>2</sup>



Surface Area = 3,983.04 ft<sup>2</sup>

# PREVIEW

Gain complete access to the largest collection of worksheets in all subjects!

Members, please log in to download this worksheet.

Not a member? Please sign up to gain complete access.

[www.mathworksheets4kids.com](http://www.mathworksheets4kids.com)