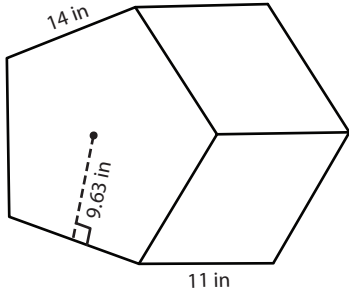


Surface Area of Polygonal Prisms

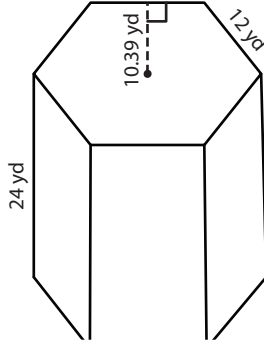
Find the surface area of each regular polygonal prism.

1)



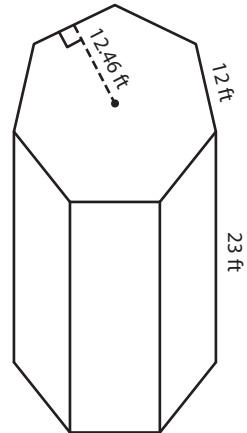
Surface Area = _____

2)

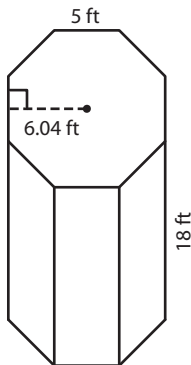


Surface Area = _____

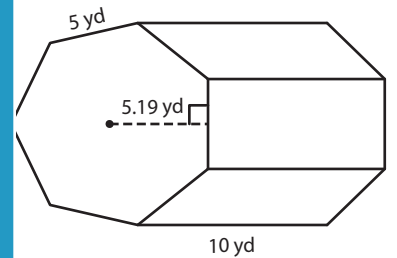
3)



4)

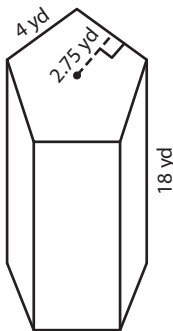


Surface Area = _____

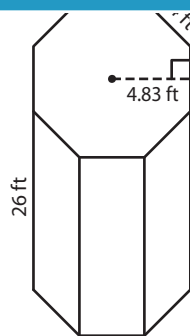


Surface Area = _____

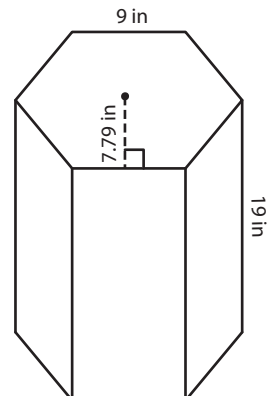
7)



Surface Area = _____



Surface Area = _____



Surface Area = _____

PREVIEW

Gain complete access to the largest collection of worksheets in all subjects!

Members, please log in to download this worksheet.

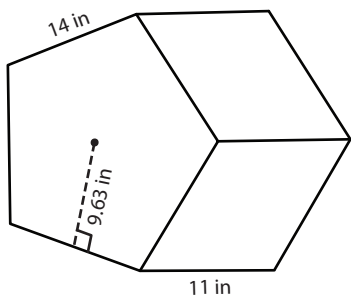
Not a member? Please sign up to gain complete access.

www.mathworksheets4kids.com

Surface Area of Polygonal Prisms

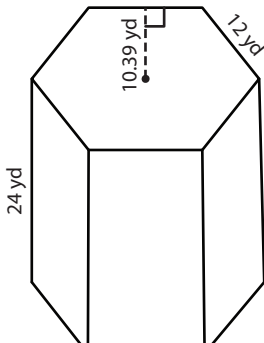
Find the surface area of each regular polygonal prism.

1)



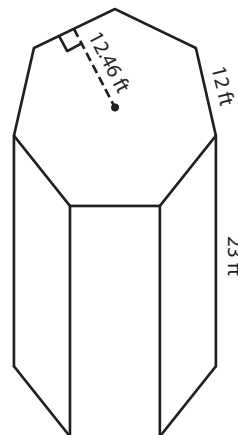
Surface Area = 1,444.1

2)

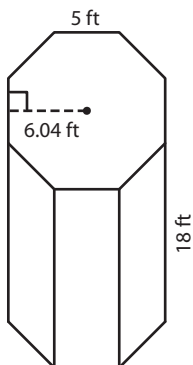


Surface Area = 2,978.64 ft²

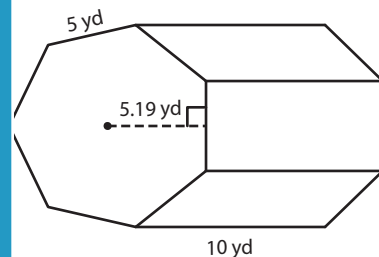
3)



4)

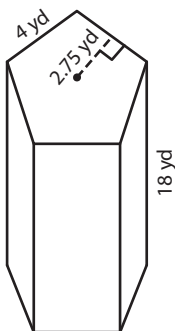


Surface Area = 961.6

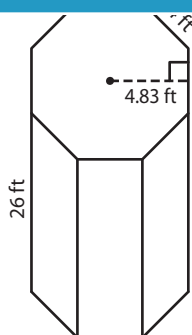


Surface Area = 531.65 yd²

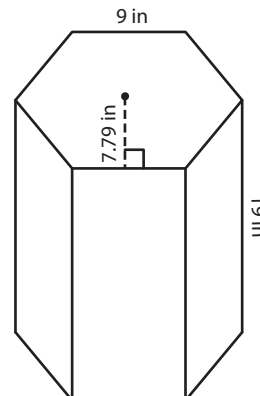
7)



Surface Area = 415 yd²



Surface Area = 986.56 ft²



Surface Area = 1,446.66 in²

PREVIEW

Gain complete access to the largest collection of worksheets in all subjects!

Members, please log in to download this worksheet.

Not a member? Please sign up to gain complete access.

www.mathworksheets4kids.com