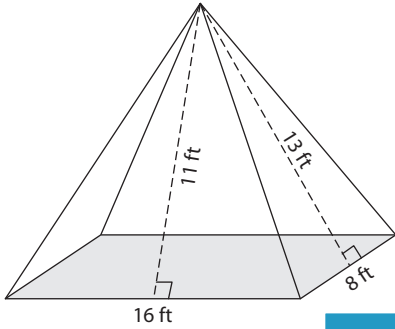


Surface Area of Rectangular Pyramids

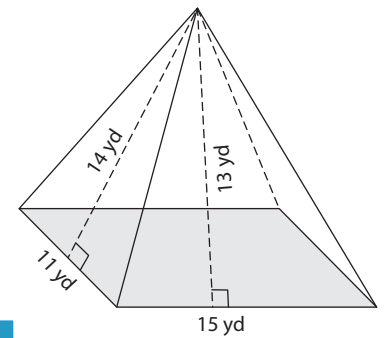
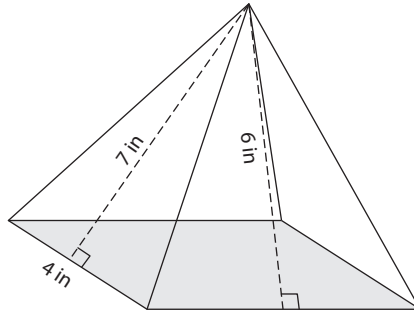
Find the surface area of each rectangular pyramid.

1)



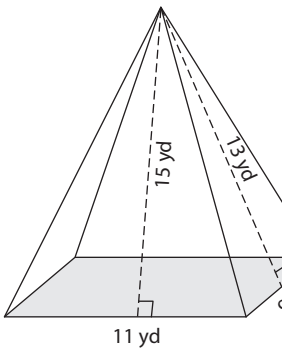
Surface Area = _____

2)

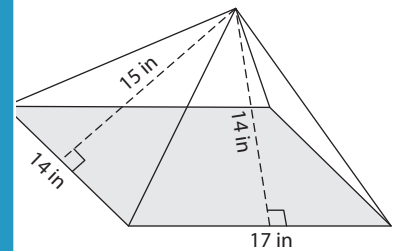


Surface Area = _____

4)

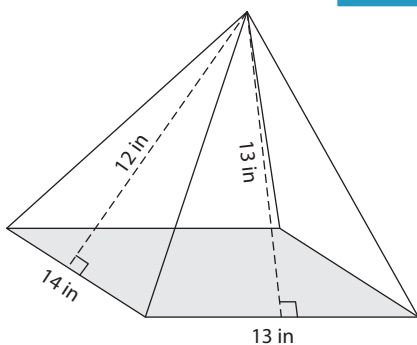


Surface Area = _____

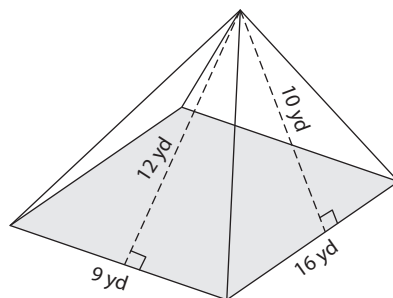


Surface Area = _____

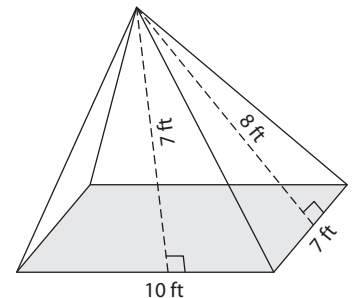
7)



Surface Area = _____



Surface Area = _____



Surface Area = _____

PREVIEW

Gain complete access to the largest collection of worksheets in all subjects!

Members, please log in to download this worksheet.

Not a member? Please sign up to gain complete access.

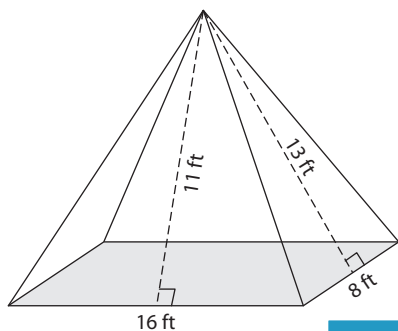
www.mathworksheets4kids.com

Name : _____

Surface Area of Rectangular Pyramids

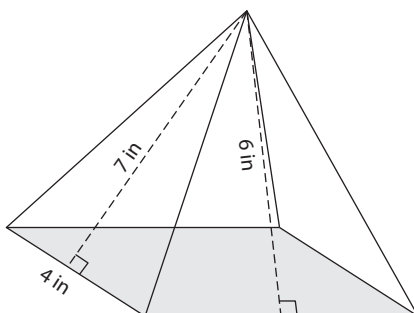
Find the surface area of each rectangular pyramid.

1)

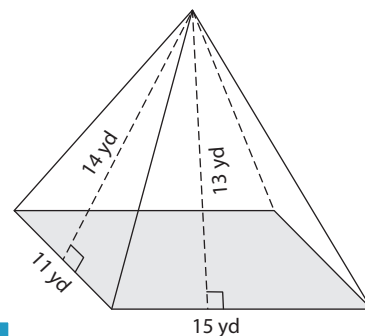


Surface Area = 408 ft²

2)

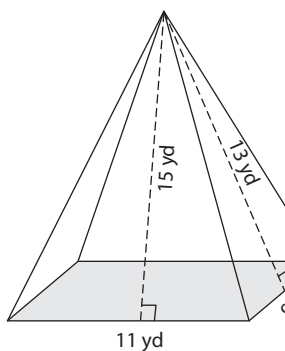


3)



Surface Area = 514 yd²

4)



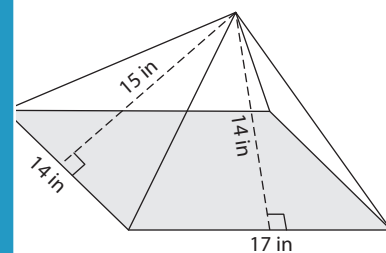
Surface Area = 381 yd²

PREVIEW
Gain complete access to the largest collection of worksheets in all subjects!

Members, please log in to download this worksheet.

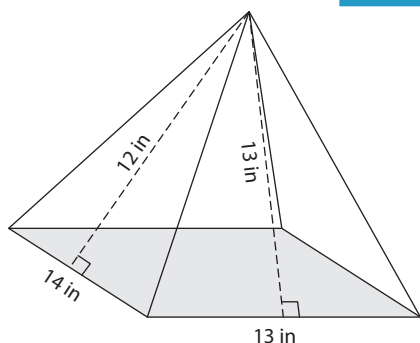
Not a member? Please sign up to gain complete access.

www.mathworksheets4kids.com

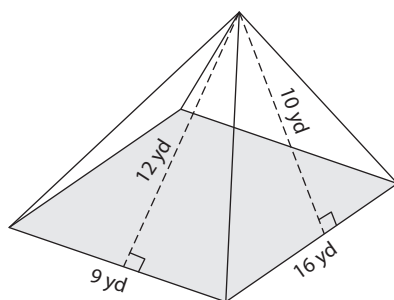


Surface Area = 686 in²

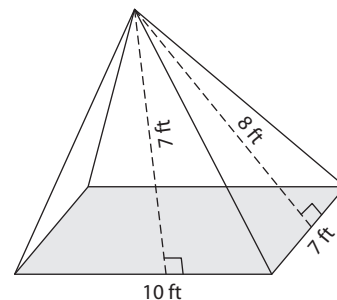
7)



Surface Area = 519 in²



Surface Area = 412 yd²



Surface Area = 196 ft²