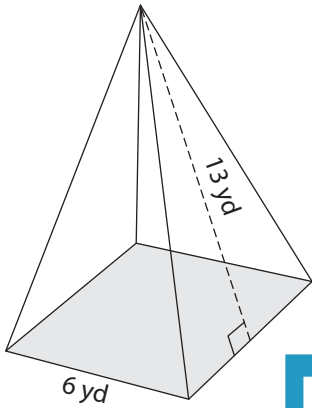


Surface Area of Pyramids

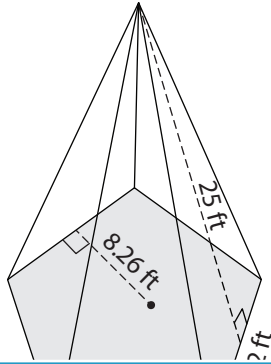
Find the surface area of each regular polygonal pyramid.

1)



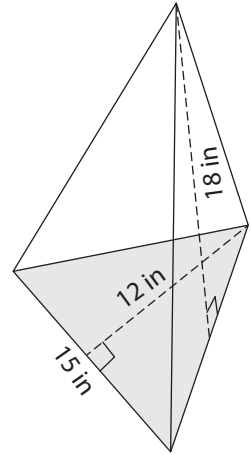
Surface Area = _____

2)

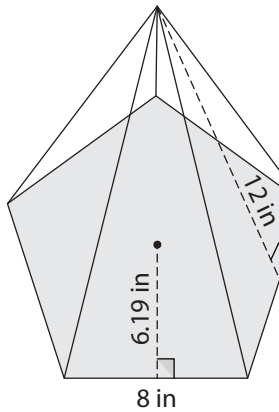


Surface Area = _____

3)



4)



Surface Area = _____

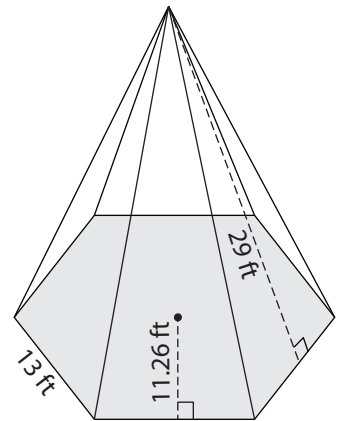
PREVIEW

Gain complete access to the largest collection of worksheets in all subjects!

Members, please log in to download this worksheet.

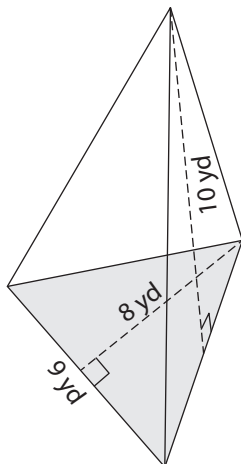
Not a member? Please sign up to gain complete access.

www.mathworksheets4kids.com

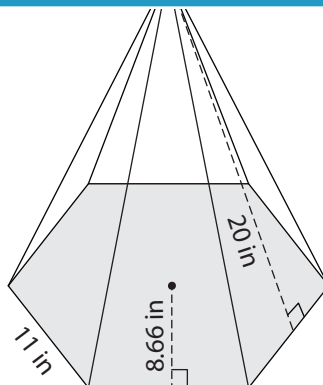


Surface Area = _____

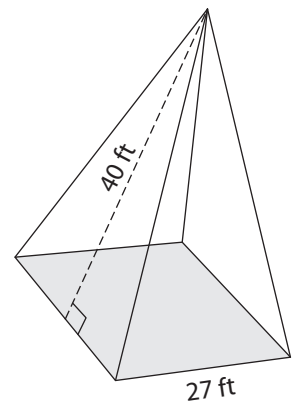
7)



Surface Area = _____



Surface Area = _____

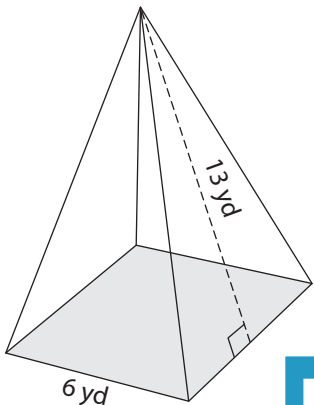


Surface Area = _____

Surface Area of Pyramids

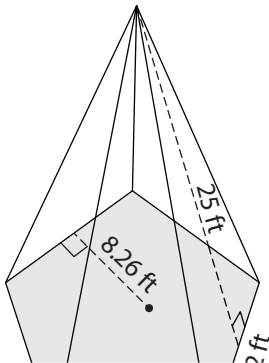
Find the surface area of each regular polygonal pyramid.

1)

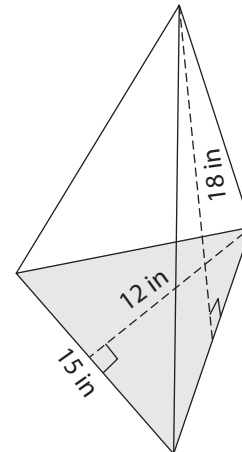


Surface Area = 192 y

2)

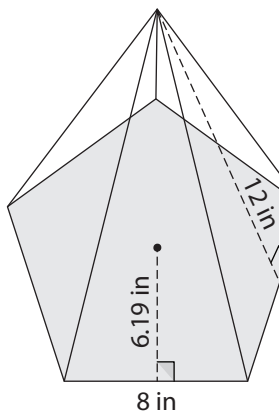


3)



Surface Area = 495 in²

4)



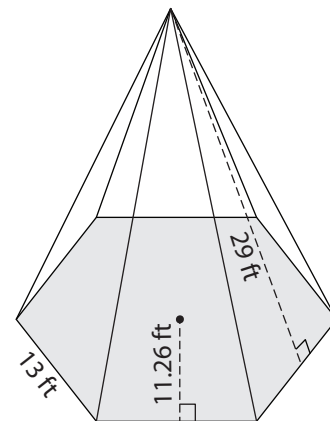
Surface Area = 363.8

PREVIEW
Gain complete access to the largest collection of worksheets in all subjects!

Members, please log in to download this worksheet.

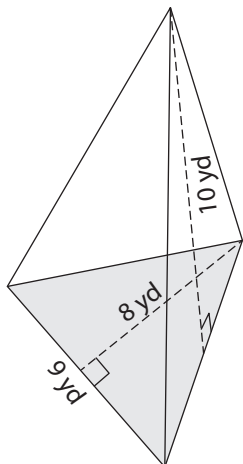
Not a member? Please sign up to gain complete access.

www.mathworksheets4kids.com

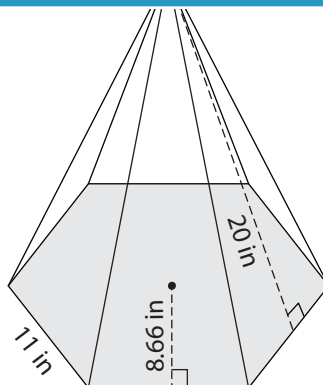


Surface Area = 1,570.14 ft²

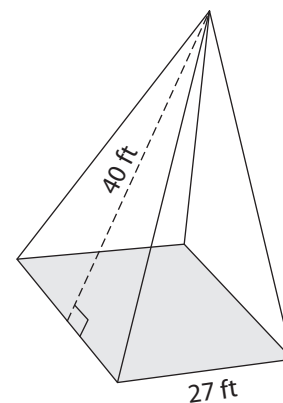
7)



Surface Area = 171 yd²



Surface Area = 945.78 in²



Surface Area = 2,889 ft²