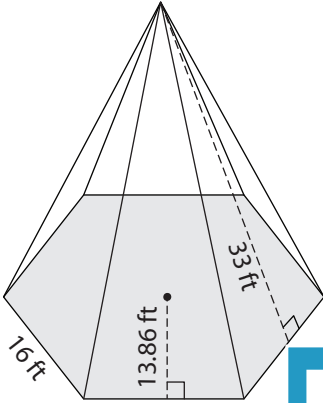


Surface Area of Pyramids

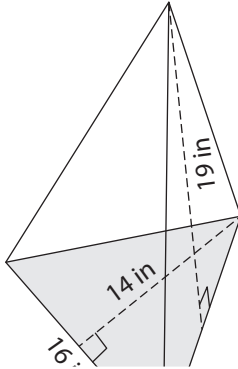
Find the surface area of each regular polygonal pyramid.

1)



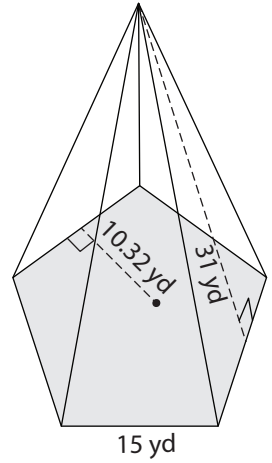
Surface Area = _____

2)



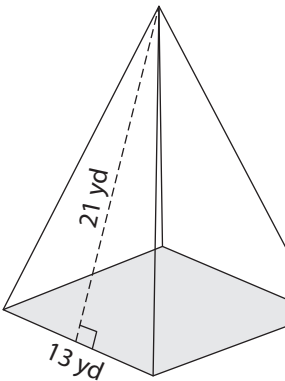
Surface Area = _____

3)

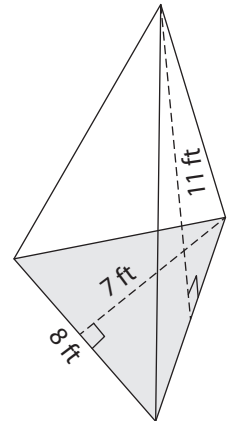


Surface Area = _____

4)

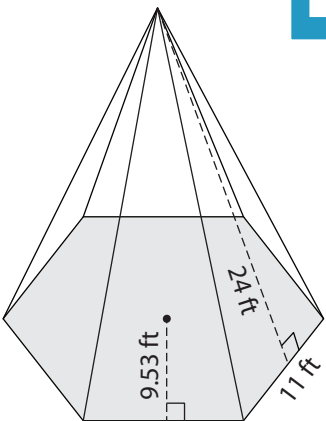


Surface Area = _____

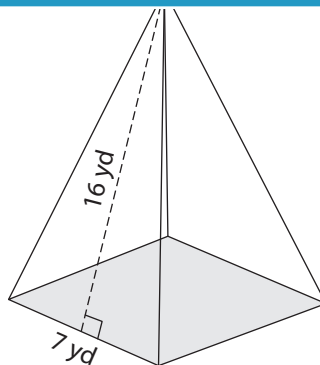


Surface Area = _____

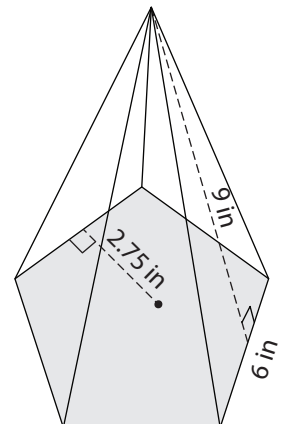
7)



Surface Area = _____



Surface Area = _____



Surface Area = _____

PREVIEW

Gain complete access to the largest collection of worksheets in all subjects!

Members, please log in to download this worksheet.

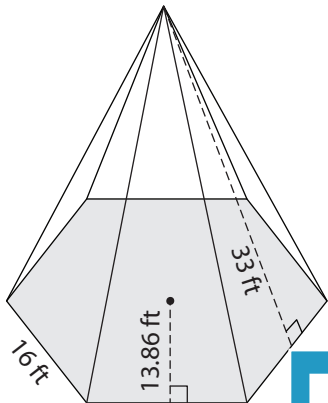
Not a member? Please sign up to gain complete access.

www.mathworksheets4kids.com

Surface Area of Pyramids

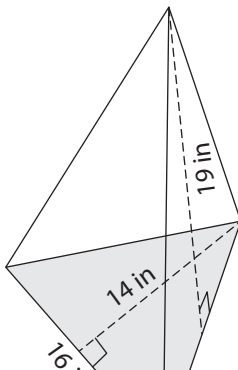
Find the surface area of each regular polygonal pyramid.

1)

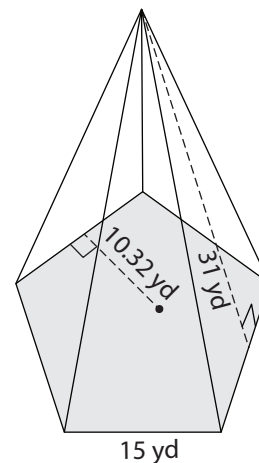


Surface Area = 2,249.2

2)

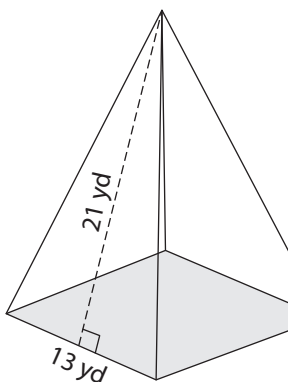


3)



Surface Area = 1,549.5 yd²

4)



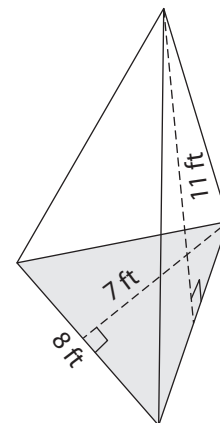
Surface Area = 715 y

Gain complete access to the largest collection of worksheets in all subjects!

Members, please log in to download this worksheet.

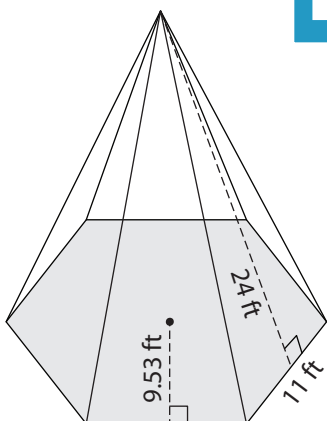
Not a member? Please sign up to gain complete access.

www.mathworksheets4kids.com

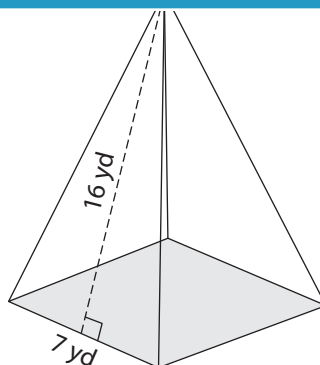


Surface Area = 160 ft²

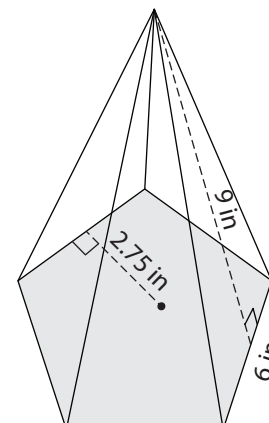
7)



Surface Area = 1,106.49 ft²



Surface Area = 273 yd²



Surface Area = 176.25 in²