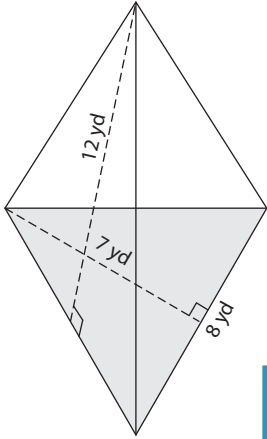


Surface Area of Triangular Pyramids

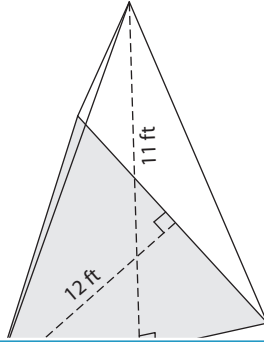
Find the surface area of each regular triangular pyramid.

1)



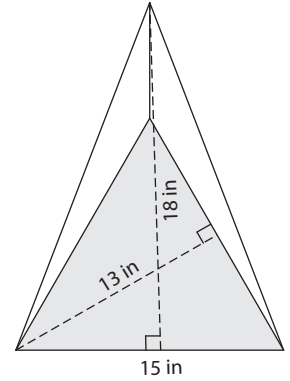
Surface Area = _____

2)

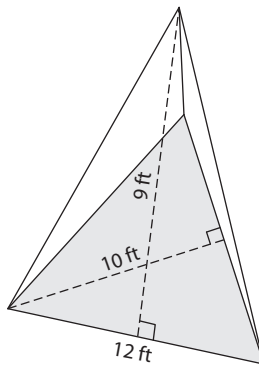


Surface Area = _____

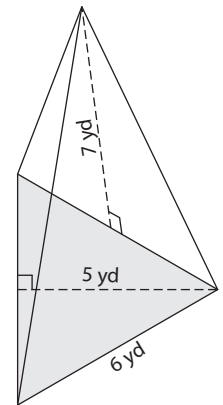
3)



4)

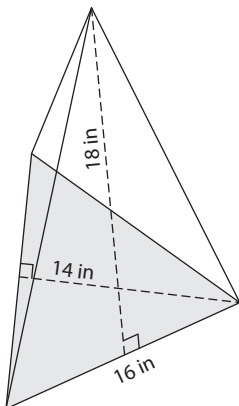


Surface Area = _____

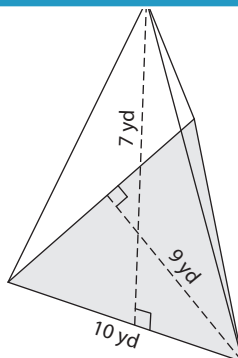


Surface Area = _____

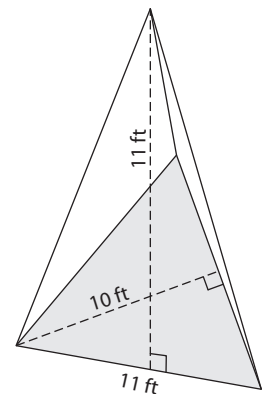
7)



Surface Area = _____



Surface Area = _____



Surface Area = _____

PREVIEW

Gain complete access to the largest collection of worksheets in all subjects!

Members, please log in to download this worksheet.

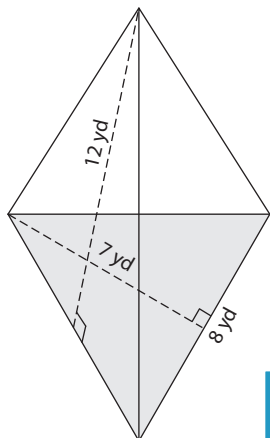
Not a member? Please sign up to gain complete access.

www.mathworksheets4kids.com

Surface Area of Triangular Pyramids

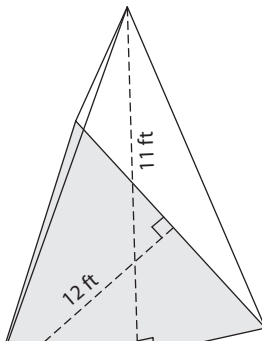
Find the surface area of each regular triangular pyramid.

1)

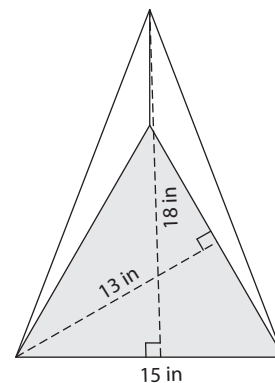


Surface Area = 172 yd²

2)

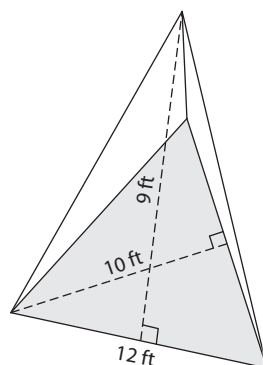


3)



Surface Area = 502.5 in²

4)



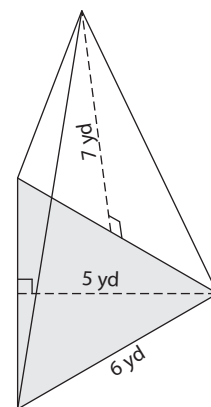
Surface Area = 222 ft²

Gain complete access to the largest collection of worksheets in all subjects!

Members, please log in to download this worksheet.

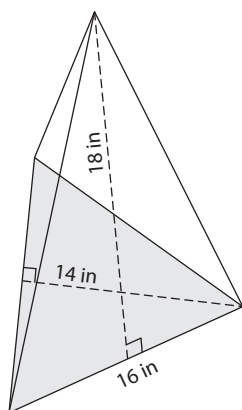
Not a member? Please sign up to gain complete access.

www.mathworksheets4kids.com

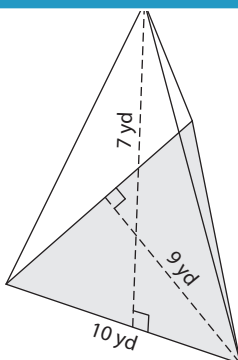


Surface Area = 78 yd²

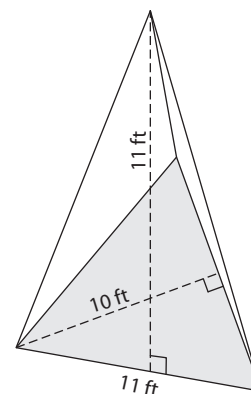
7)



Surface Area = 544 in²



Surface Area = 150 yd²



Surface Area = 236.5 ft²