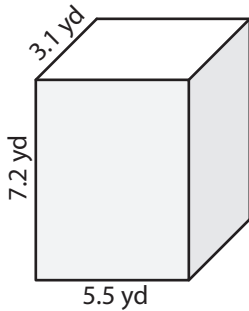


Name : _____

Surface Area - Rectangular Prism

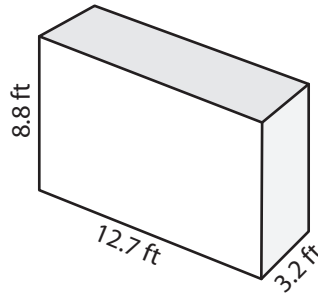
Find the surface area of each rectangular prism.

1)



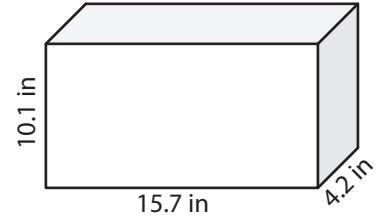
Surface Area = _____

2)



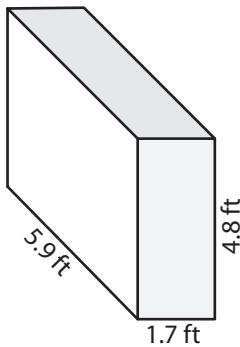
Surface Area = _____

3)



Surface Area = _____

4)



Surface Area = _____

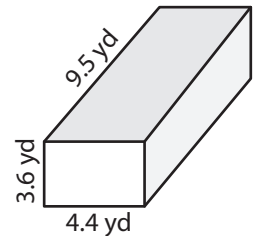
PREVIEW

Gain complete access to the largest collection of worksheets in all subjects!

Members, please log in to download this worksheet.

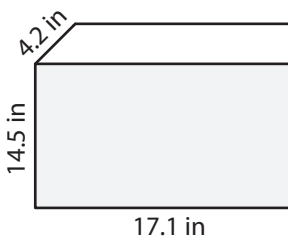
Not a member? Please sign up to gain complete access.

www.mathworksheets4kids.com

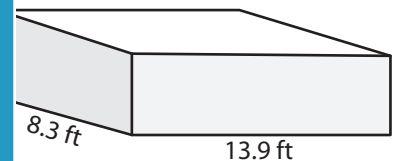


Surface Area = _____

7)



Surface Area = _____



Surface Area = _____

Surface Area = _____

10) A company manufactures rectangular metal boxes with the following dimensions: 2.5 yards, 1.3 yards, and 1.1 yards. What is the surface area of the metal box?

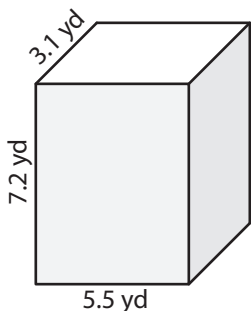
Surface Area = _____

Name : _____

Surface Area - Rectangular Prism

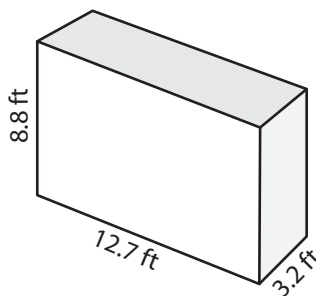
Find the surface area of each rectangular prism.

1)



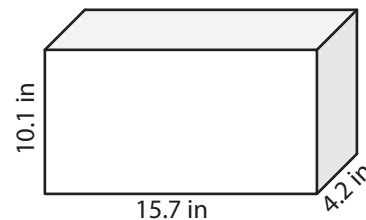
Surface Area = 157.94 yd²

2)



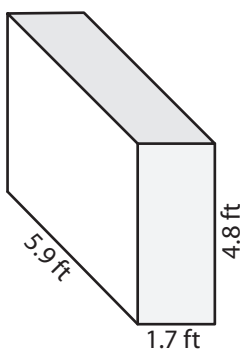
Surface Area = 361.12 ft²

3)

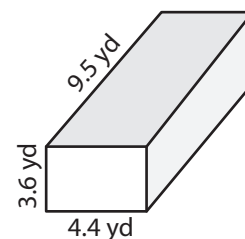


Surface Area = 533.86 in²

4)

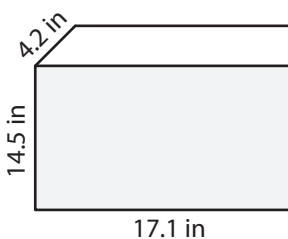


Surface Area = 93.02 ft²

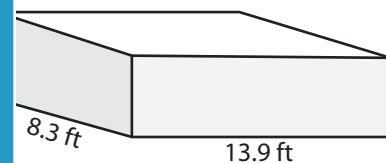


Surface Area = 183.68 yd²

7)



Surface Area = 761.34 in²



Surface Area = 616.48 yd²

Surface Area = 381.7 ft²

PREVIEW

Gain complete access to the largest collection of worksheets in all subjects!

Members, please log in to download this worksheet.

Not a member? Please sign up to gain complete access.

www.mathworksheets4kids.com

10) A company manufactures rectangular metal boxes with the following dimensions: 2.5 yards, 1.3 yards, and 1.1 yards. What is the surface area of the metal box?

Surface Area = 14.86 square yards