

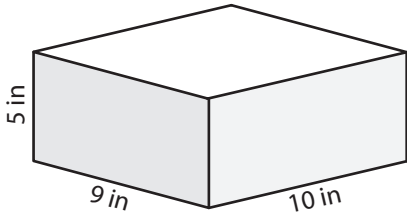
Name : _____

Integers: ES2

Surface Area - Rectangular Prism

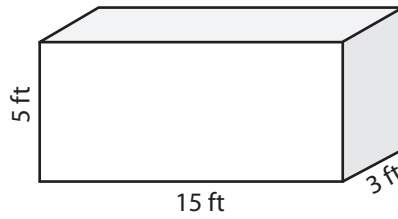
Find the surface area of each rectangular prism.

1)



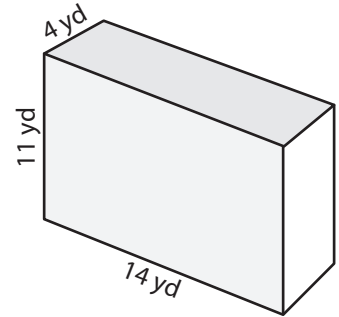
Surface Area = _____

2)



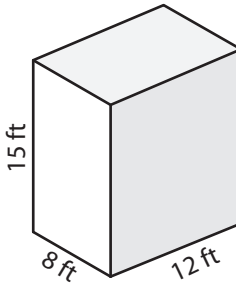
Surface Area = _____

3)

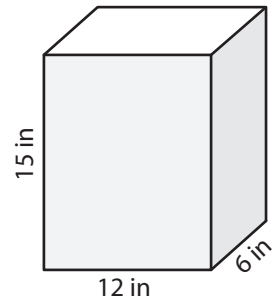


Surface Area = _____

4)

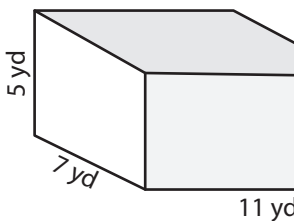


Surface Area = _____

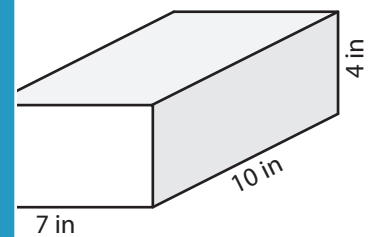


Surface Area = _____

7)



Surface Area = _____



Surface Area = _____

PREVIEW

Gain complete access to the largest collection of worksheets in all subjects!

Members, please log in to download this worksheet.

Not a member? Please sign up to gain complete access.

www.mathworksheets4kids.com

10) A rectangular cabinet is 5 feet long, 2 feet wide, and 3 feet tall. What is the surface area of the cabinet?

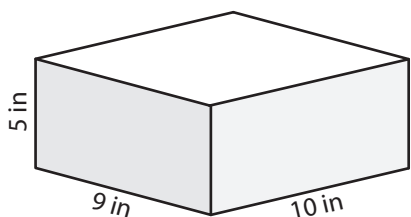
Surface Area = _____

Name : _____

Surface Area - Rectangular Prism

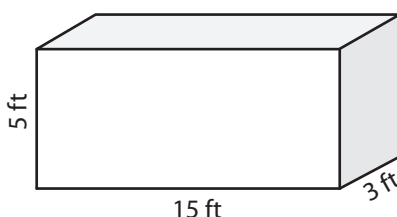
Find the surface area of each rectangular prism.

1)



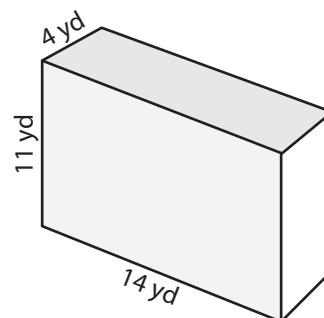
Surface Area = 370 in²

2)



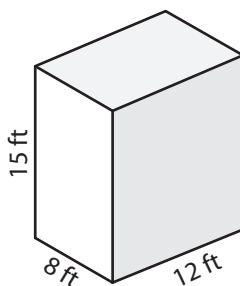
Surface Area = 270 ft²

3)

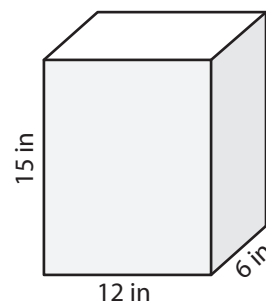


Surface Area = 508 yd²

4)

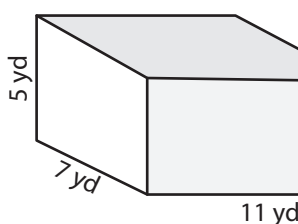


Surface Area = 792 ft²

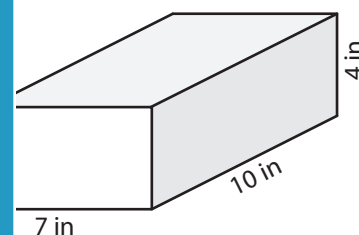


Surface Area = 684 in²

7)



Surface Area = 334 yd²



Surface Area = 190 ft²

Surface Area = 276 in²

PREVIEW

Gain complete access to the largest collection of worksheets in all subjects!

Members, please log in to download this worksheet.

Not a member? Please sign up to gain complete access.

www.mathworksheets4kids.com

10) A rectangular cabinet is 5 feet long, 2 feet wide, and 3 feet tall. What is the surface area of the cabinet?

Surface Area = 62 square feet