

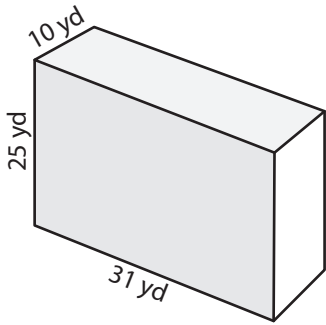
Name : _____

Surface Area - Rectangular Prism

Integers: MS1

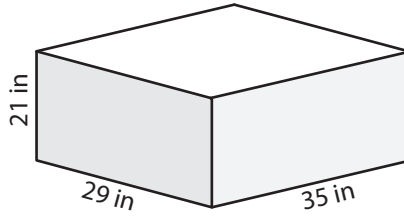
Find the surface area of each rectangular prism.

1)



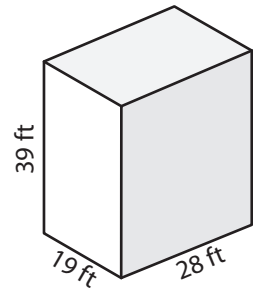
Surface Area = _____

2)



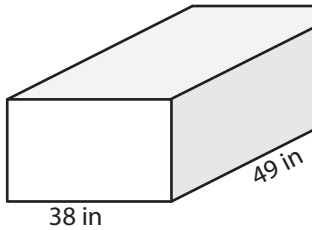
Surface Area = _____

3)

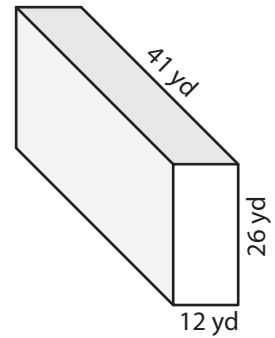


Surface Area = _____

4)

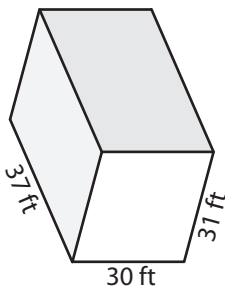


Surface Area = _____



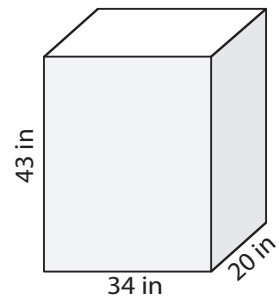
Surface Area = _____

7)



Surface Area = _____

Surface Area = _____



Surface Area = _____

PREVIEW

Gain complete access to the largest collection of worksheets in all subjects!

Members, please log in to download this worksheet.

Not a member? Please sign up to gain complete access.

www.mathworksheets4kids.com

- 10) Carrie uses an empty cereal box to make a craft and covers the box with green construction paper. If the dimensions of the box are 12 inches, 8 inches, and 2 inches, how much paper is required?

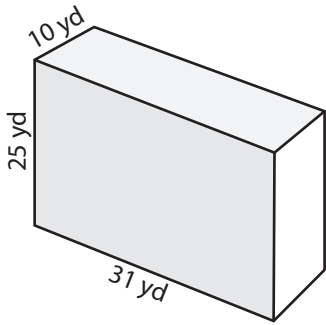
Construction paper needed: _____

Name : _____

Surface Area - Rectangular Prism

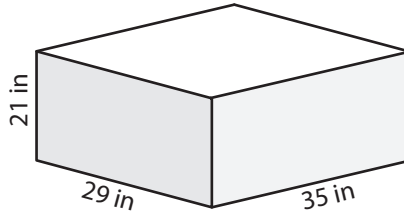
Find the surface area of each rectangular prism.

1)



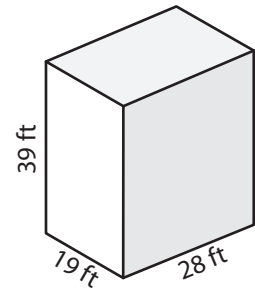
Surface Area = 2,670 yd²

2)



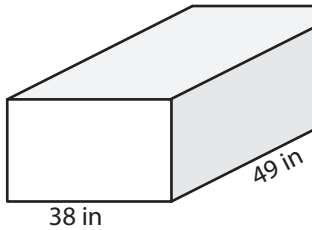
Surface Area = 4,718 in²

3)

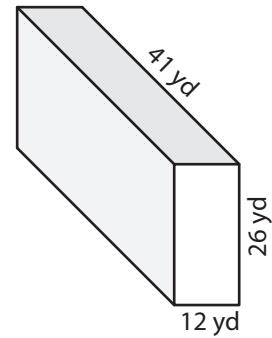


Surface Area = 4,730 ft²

4)

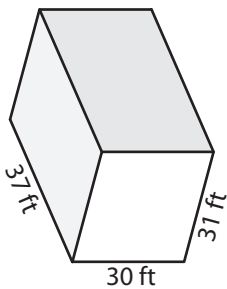


Surface Area = 7,900 in²



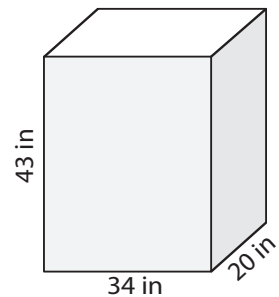
Surface Area = 3,740 yd²

7)



Surface Area = 6,374 ft²

Surface Area = 3,818 yd²



Surface Area = 6,004 in²

PREVIEW

Gain complete access to the largest collection of worksheets in all subjects!

Members, please log in to download this worksheet.

Not a member? Please sign up to gain complete access.

www.mathworksheets4kids.com

- 10) Carrie uses an empty cereal box to make a craft and covers the box with green construction paper. If the dimensions of the box are 12 inches, 8 inches, and 2 inches, how much paper is required?

Construction paper needed: 272 square inches