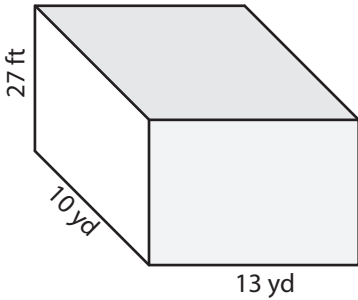


Name : \_\_\_\_\_

# Surface Area - Rectangular Prism

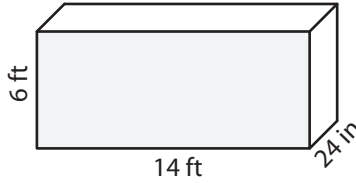
Find the surface area of each rectangular prism.

1)



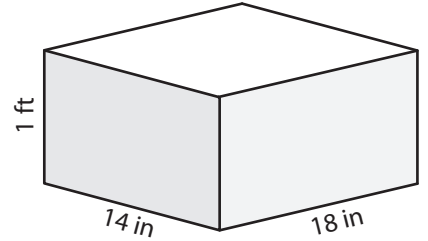
Surface Area = \_\_\_\_\_ yd<sup>2</sup>

2)



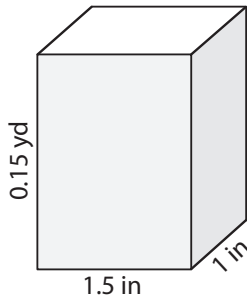
Surface Area = \_\_\_\_\_ ft<sup>2</sup>

3)

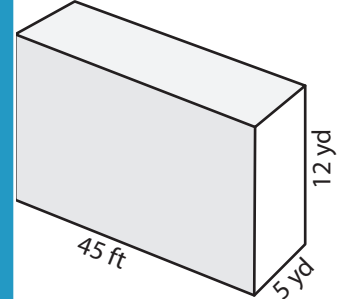


Surface Area = \_\_\_\_\_ in<sup>2</sup>

4)

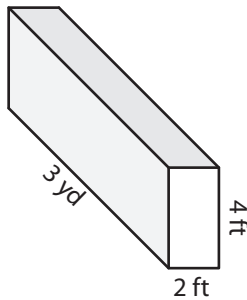


Surface Area = \_\_\_\_\_



Surface Area = \_\_\_\_\_ yd<sup>2</sup>

7)



Surface Area = \_\_\_\_\_ ft<sup>2</sup>

Surface Area = \_\_\_\_\_ in<sup>2</sup>

Surface Area = \_\_\_\_\_ yd<sup>2</sup>

## PREVIEW

Gain complete access to the largest collection of worksheets in all subjects!

Members, please log in to download this worksheet.

Not a member? Please sign up to gain complete access.

[www.mathworksheets4kids.com](http://www.mathworksheets4kids.com)

10) Juliet makes a rectangular jewellery box out of cardboard. If the box is 9.5 inches long, a foot wide, and 4 inches high, what is the surface area of the jewellery box?

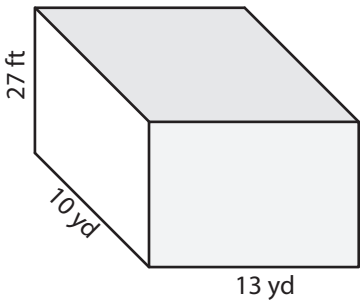
Surface Area = \_\_\_\_\_ square inches

Name : \_\_\_\_\_

# Surface Area - Rectangular Prism

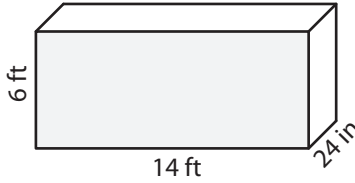
Find the surface area of each rectangular prism.

1)



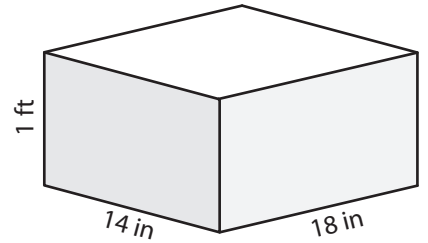
Surface Area = 674 yd<sup>2</sup>

2)



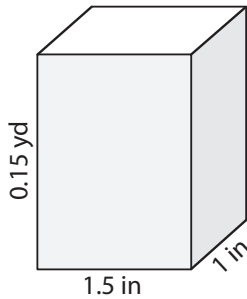
Surface Area = 248 ft<sup>2</sup>

3)

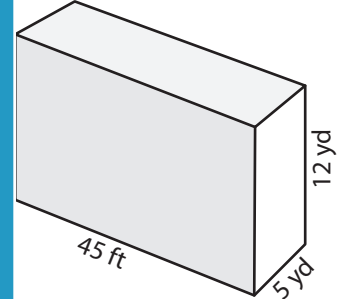


Surface Area = 1,272 in<sup>2</sup>

4)

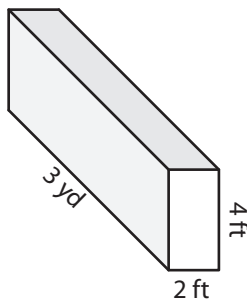


Surface Area = 30



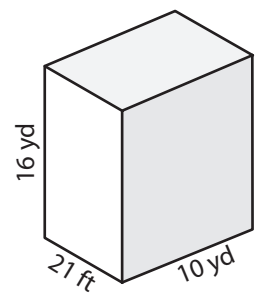
Surface Area = 630 yd<sup>2</sup>

7)



Surface Area = 124 ft<sup>2</sup>

Surface Area = 438 in<sup>2</sup>



Surface Area = 684 yd<sup>2</sup>

## PREVIEW

Gain complete access to the largest collection of worksheets in all subjects!

Members, please log in to download this worksheet.

Not a member? Please sign up to gain complete access.

[www.mathworksheets4kids.com](http://www.mathworksheets4kids.com)

10) Juliet makes a rectangular jewellery box out of cardboard. If the box is 9.5 inches long, a foot wide, and 4 inches high, what is the surface area of the jewellery box?

Surface Area = 400 square inches