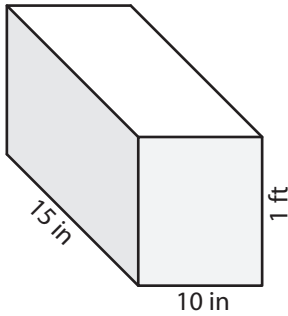


Name : _____

Surface Area - Rectangular Prism

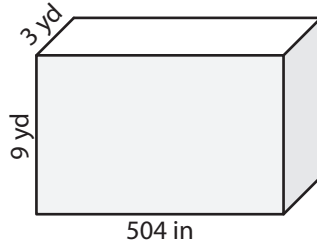
Find the surface area of each rectangular prism.

1)



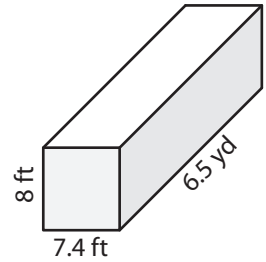
Surface Area = _____ in²

2)



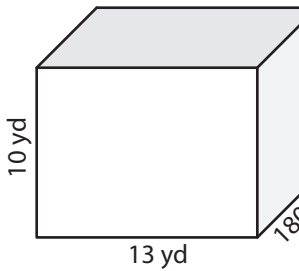
Surface Area = _____ yd²

3)

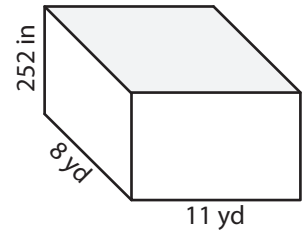


Surface Area = _____ ft²

4)

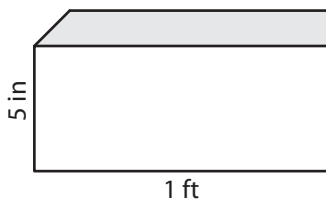


Surface Area = _____



Surface Area = _____ yd²

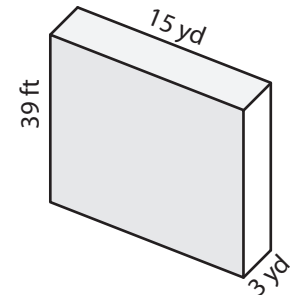
7)



Surface Area = _____ in²

Surface Area = _____ ft²

Surface Area = _____ yd²



10) Janet bought a large moving box to store her things in a storage unit. If its dimensions are 0.66 yards, 36 inches, and 1.2 yards, find the surface area of the box.

Surface Area = _____ square yards

PREVIEW

Gain complete access to the largest collection of worksheets in all subjects!

Members, please log in to download this worksheet.

Not a member? Please sign up to gain complete access.

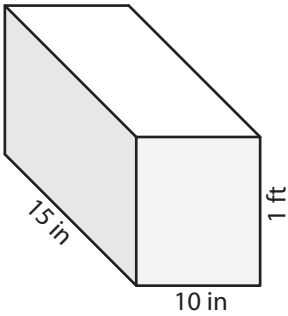
www.mathworksheets4kids.com

Name : _____

Surface Area - Rectangluar Prism

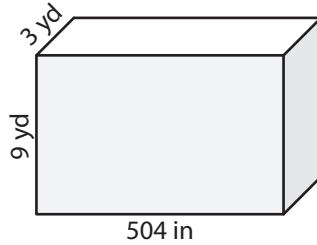
Find the surface area of each rectangular prism.

1)



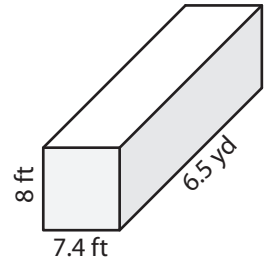
Surface Area = 900 in²

2)



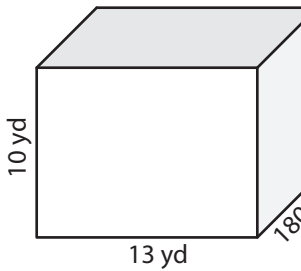
Surface Area = 390 yd²

3)



Surface Area = 719 ft²

4)



Surface Area = 490

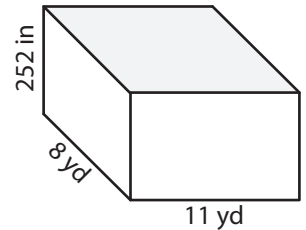
PREVIEW

Gain complete access to the largest collection of worksheets in all subjects!

Members, please log in to download this worksheet.

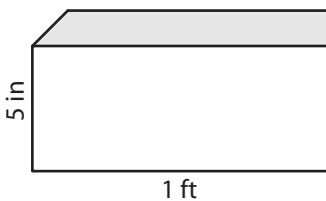
Not a member? Please sign up to gain complete access.

www.mathworksheets4kids.com



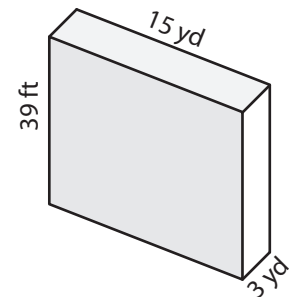
Surface Area = 442 yd²

7)



Surface Area = 188 in²

Surface Area = 202 ft²



Surface Area = 558 yd²

10) Janet bought a large moving box to store her things in a storage unit. If its dimensions are 0.66 yards, 36 inches, and 1.2 yards, find the surface area of the box.

Surface Area = 5.3 square yards