


Name : _____

Surface Area - Sphere & Hemisphere

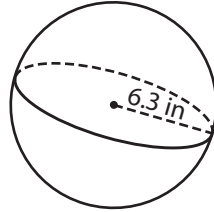
Find the surface area of each sphere and hemisphere. Round your answer to two decimal places. (use $\pi = 3.14$)

1)



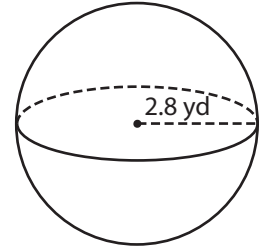
Surface Area = _____

2)

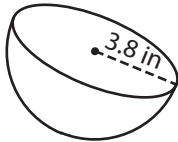


Surface Area = _____

3)



4)



Surface Area = _____

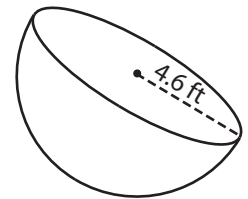
PREVIEW

Gain complete access to the largest collection of worksheets in all subjects!

Members, please log in to download this worksheet.

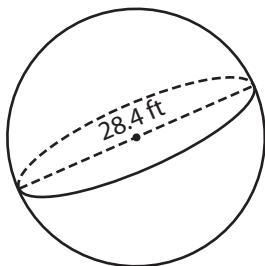
Not a member? Please sign up to gain complete access.

www.mathworksheets4kids.com

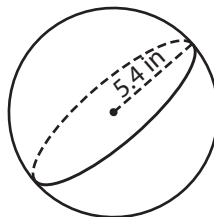


Surface Area = _____

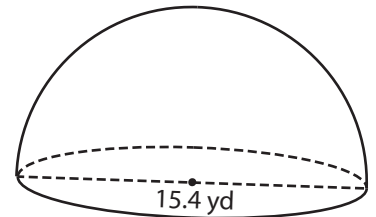
7)



Surface Area = _____



Surface Area = _____



Surface Area = _____

Name : _____

Surface Area - Sphere & Hemisphere

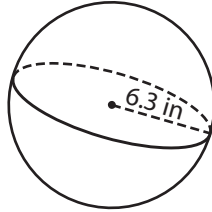
Find the surface area of each sphere and hemisphere. Round your answer to two decimal places. (use $\pi = 3.14$)

1)



Surface Area = 79.22 ft²

2)



PREVIEW

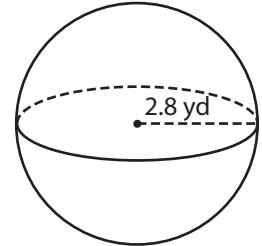
Gain complete access to the largest collection of worksheets in all subjects!

Members, please log in to download this worksheet.

Not a member? Please sign up to gain complete access.

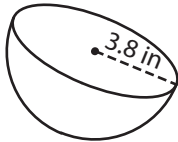
www.mathworksheets4kids.com

3)

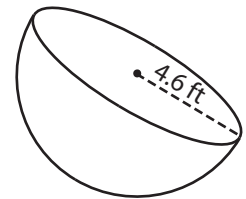


Surface Area = 98.47 yd²

4)

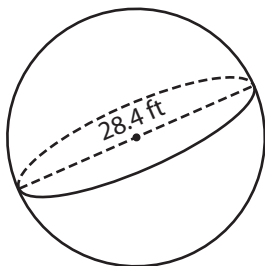


Surface Area = 136.01 in²

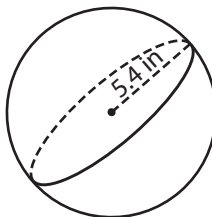


Surface Area = 199.33 ft²

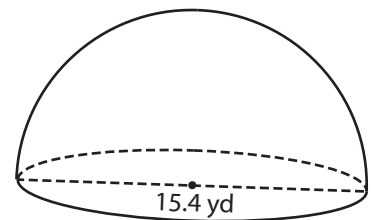
7)



Surface Area = 2,532.6 ft²



Surface Area = 366.25 in²



Surface Area = 558.51 yd²