

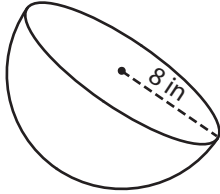
Name : \_\_\_\_\_

Integers: ES2

## Surface Area - Sphere & Hemisphere

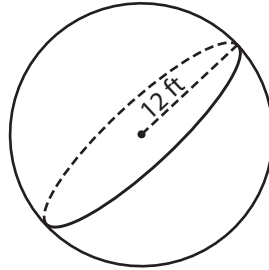
Find the surface area of each sphere and hemisphere. (use  $\pi = 3.14$ )

1)



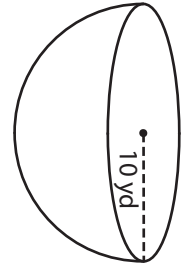
Surface Area = \_\_\_\_\_

2)

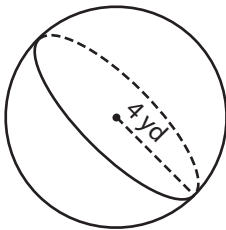


Surface Area = \_\_\_\_\_

3)



4)



Surface Area = \_\_\_\_\_

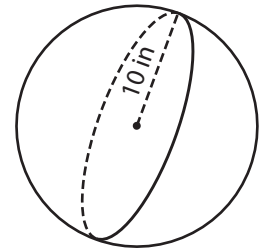
**PREVIEW**

Gain complete access to the largest collection of worksheets in all subjects!

Members, please log in to download this worksheet.

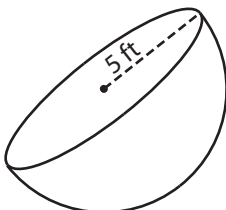
Not a member? Please sign up to gain complete access.

[www.mathworksheets4kids.com](http://www.mathworksheets4kids.com)

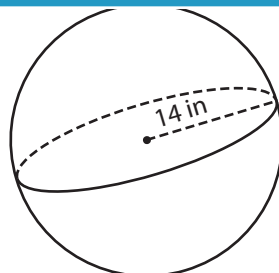


Surface Area = \_\_\_\_\_

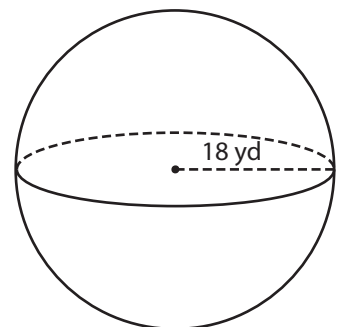
7)



Surface Area = \_\_\_\_\_



Surface Area = \_\_\_\_\_



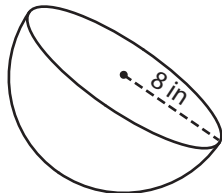
Surface Area = \_\_\_\_\_

Name : \_\_\_\_\_

## Surface Area - Sphere & Hemisphere

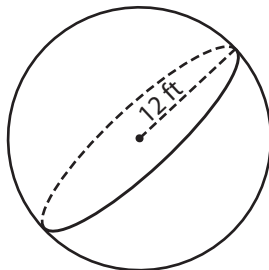
Find the surface area of each sphere and hemisphere. (use  $\pi = 3.14$ )

1)




Surface Area = 602.88

2)

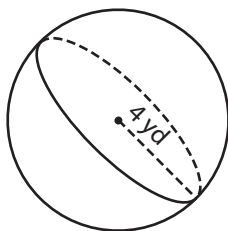


Surface Area = 942 yd<sup>2</sup>

3)



4)



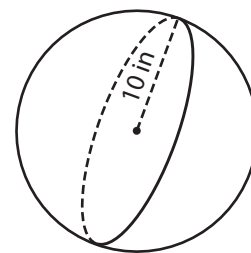
Surface Area = 200.96

**PREVIEW**  
Gain complete access to the largest collection of worksheets in all subjects!

Members, please log in to download this worksheet.

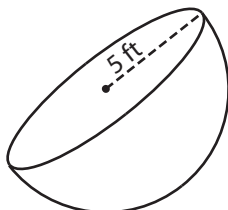
Not a member? Please sign up to gain complete access.

[www.mathworksheets4kids.com](http://www.mathworksheets4kids.com)

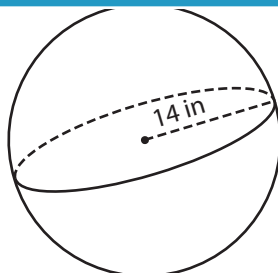


Surface Area = 1,256 in<sup>2</sup>

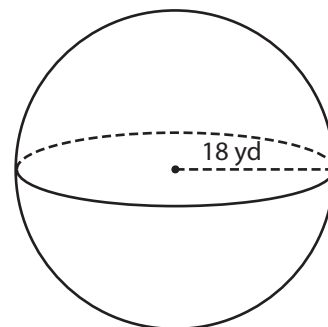
7)



Surface Area = 235.5 ft<sup>2</sup>



Surface Area = 2,461.76 in<sup>2</sup>



Surface Area = 4,069.44 yd<sup>2</sup>