

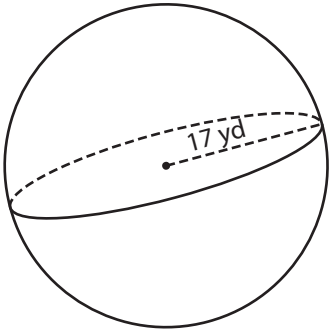
Name : _____

Integers: ES3

Surface Area - Sphere & Hemisphere

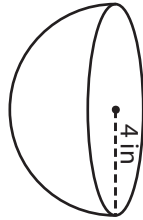
Find the surface area of each sphere and hemisphere. (use $\pi = 3.14$)

1)

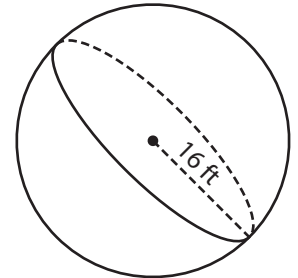


Surface Area = _____

2)

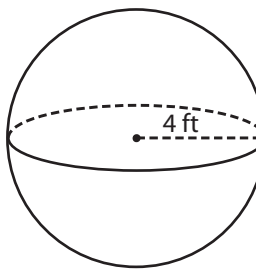


3)



Surface Area = _____

4)



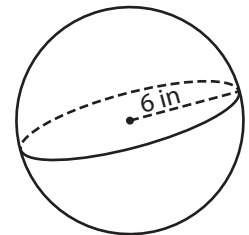
Surface Area = _____

PREVIEW
Gain complete access to the largest collection of worksheets in all subjects!

Members, please log in to download this worksheet.

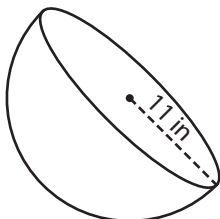
Not a member? Please sign up to gain complete access.

www.mathworksheets4kids.com

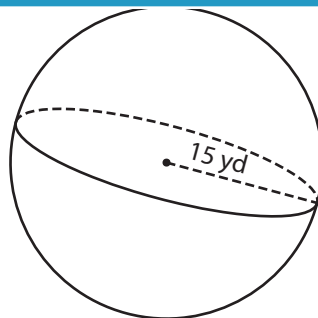


Surface Area = _____

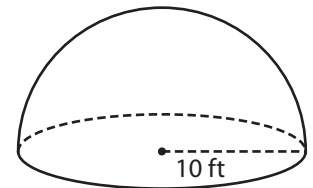
7)



Surface Area = _____



Surface Area = _____



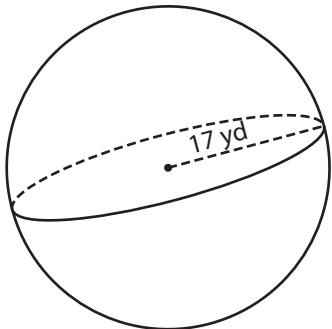
Surface Area = _____

Name : _____

Surface Area - Sphere & Hemisphere

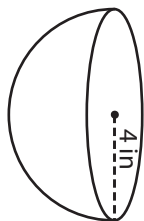
Find the surface area of each sphere and hemisphere. (use $\pi = 3.14$)

1)



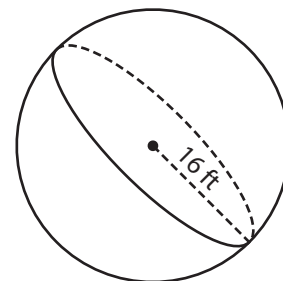
Surface Area = 3,629.84

2)

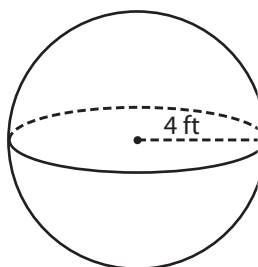


Surface Area = 3,215.36 ft²

3)



4)



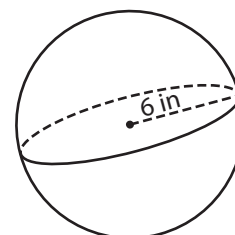
Surface Area = 200.96

Gain complete access to the largest collection of worksheets in all subjects!

Members, please log in to download this worksheet.

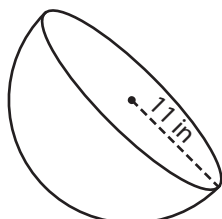
Not a member? Please sign up to gain complete access.

www.mathworksheets4kids.com

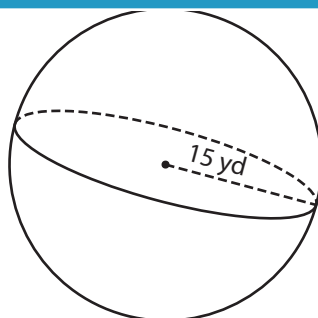


Surface Area = 452.16 in²

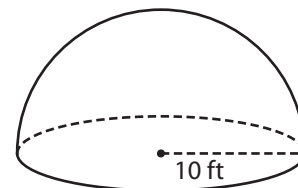
7)



Surface Area = 1,139.82 in²



Surface Area = 2,826 yd²



Surface Area = 942 ft²