

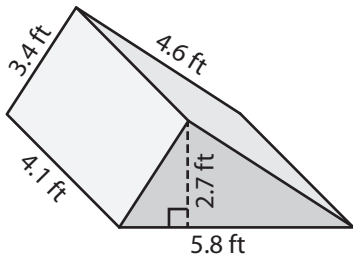
Name : _____

Decimals: S1

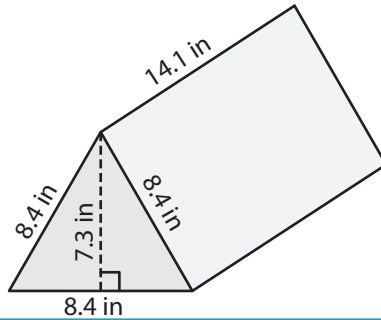
Surface Area - Triangular Prisms

Find the surface area of each triangular prism.

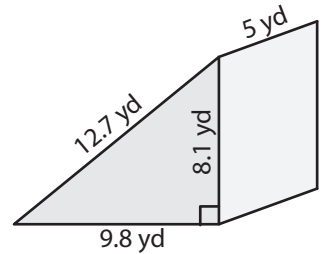
1)



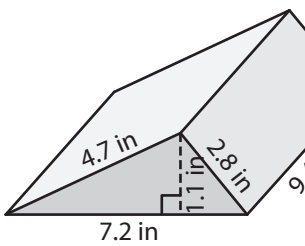
2)



3)



4)

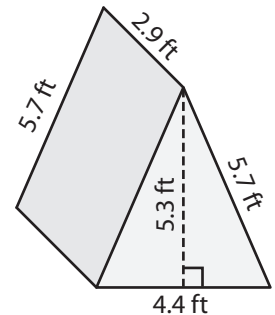


Gain complete access to the largest collection of worksheets in all subjects!

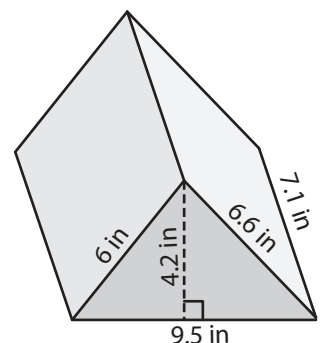
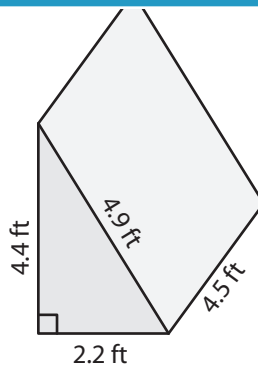
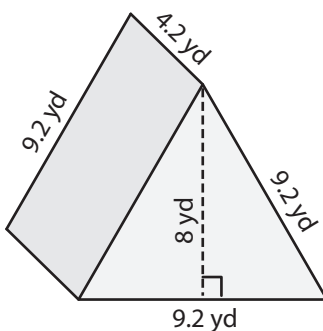
Members, please log in to download this worksheet.

Not a member? Please sign up to gain complete access.

www.mathworksheets4kids.com



7)

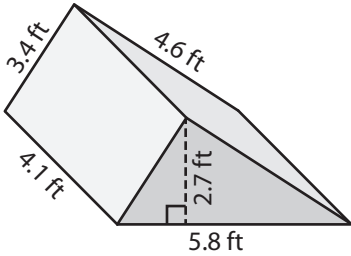


Name : _____

Surface Area - Triangular Prisms

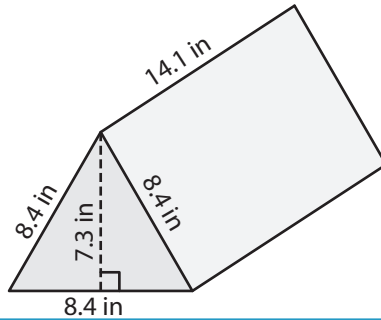
Find the surface area of each triangular prism.

1)



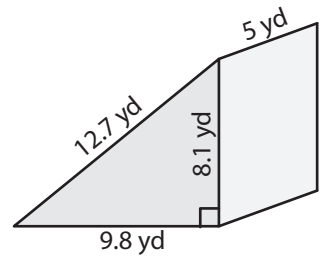
Surface Area = 72.24

2)

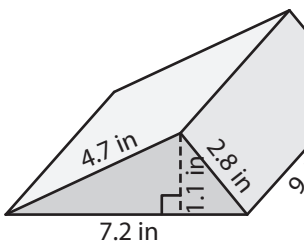


Surface Area = 232.38 yd²

3)



4)



Surface Area = 146.1

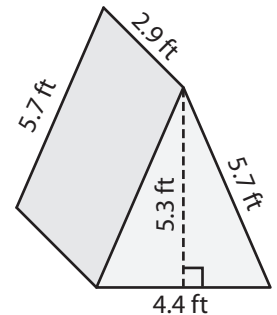
PREVIEW

Gain complete access to the largest collection of worksheets in all subjects!

Members, please log in to download this worksheet.

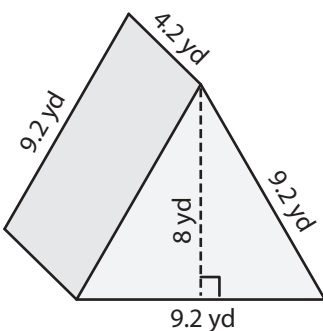
Not a member? Please sign up to gain complete access.

www.mathworksheets4kids.com

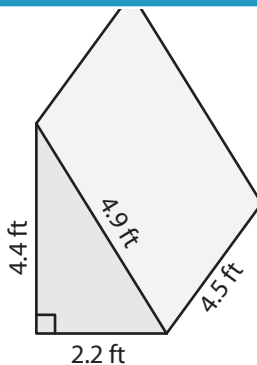


Surface Area = 69.14 ft²

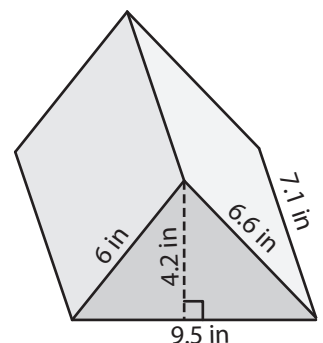
7)



Surface Area = 189.52 yd²



Surface Area = 61.43 ft²



Surface Area = 196.81 in²