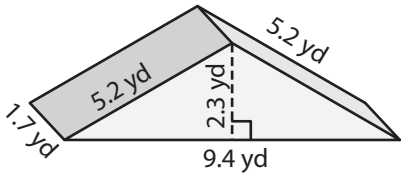


Name : \_\_\_\_\_

# Surface Area - Triangular Prisms

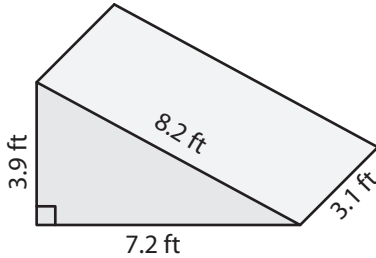
Find the surface area of each triangular prism.

1)

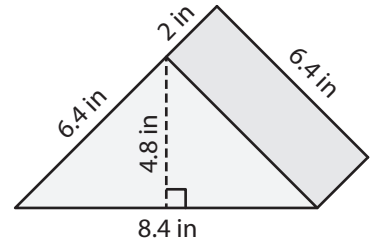


Surface Area = \_\_\_\_\_

2)

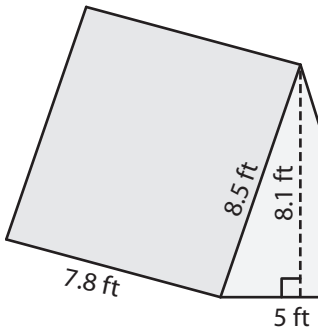


3)



Surface Area = \_\_\_\_\_

4)



Surface Area = \_\_\_\_\_

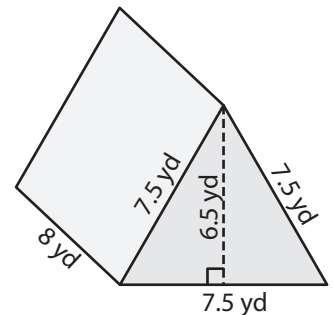
**PREVIEW**

Gain complete access to the largest collection of worksheets in all subjects!

Members, please log in to download this worksheet.

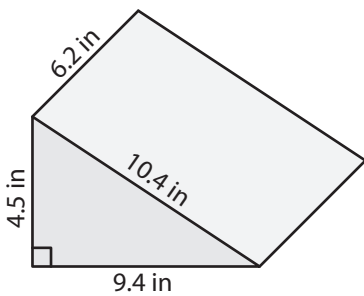
Not a member? Please sign up to gain complete access.

[www.mathworksheets4kids.com](http://www.mathworksheets4kids.com)

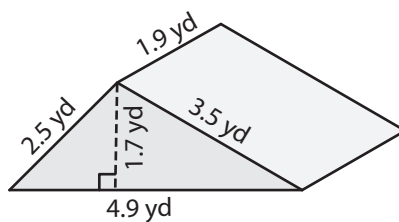


Surface Area = \_\_\_\_\_

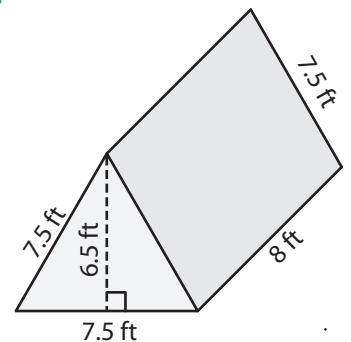
7)



Surface Area = \_\_\_\_\_



Surface Area = \_\_\_\_\_



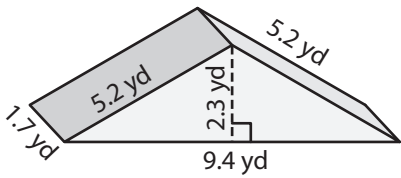
Surface Area = \_\_\_\_\_

Name : \_\_\_\_\_

# Surface Area - Triangular Prisms

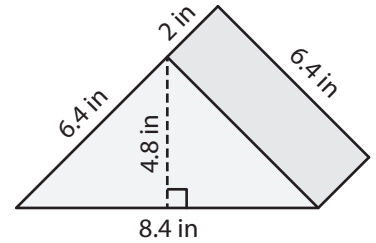
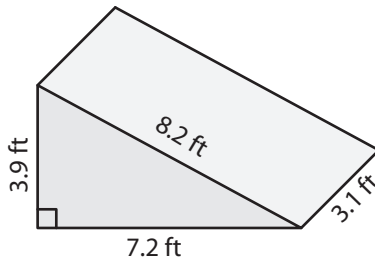
Find the surface area of each triangular prism.

1)



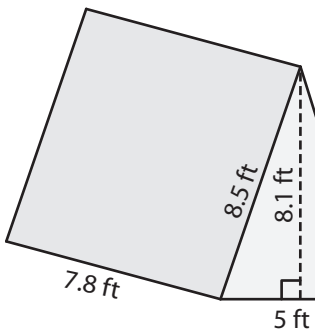
Surface Area = 55.28

2)

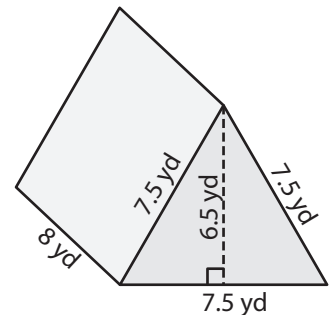


Surface Area = 82.72 in<sup>2</sup>

4)

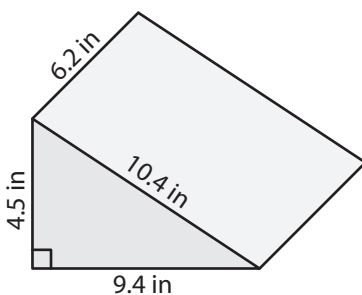


Surface Area = 212.1 f

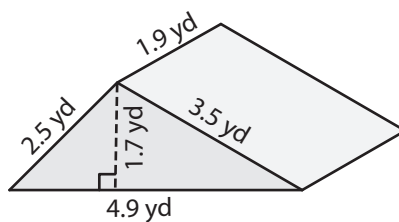


Surface Area = 228.75 yd<sup>2</sup>

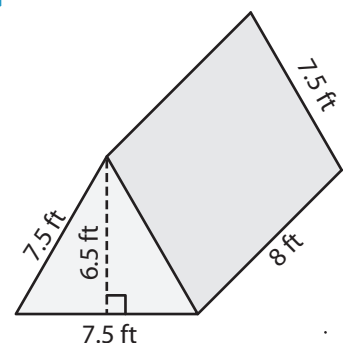
7)



Surface Area = 192.96 in<sup>2</sup>



Surface Area = 29.04 yd<sup>2</sup>



Surface Area = 228.75 ft<sup>2</sup>

## PREVIEW

Gain complete access to the largest collection of worksheets in all subjects!

Members, please log in to download this worksheet.

Not a member? Please sign up to gain complete access.

[www.mathworksheets4kids.com](http://www.mathworksheets4kids.com)