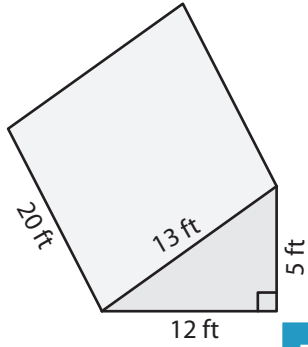


Surface Area of Triangular Prisms

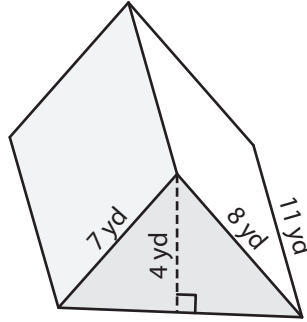
Find the surface area of each triangular prism.

1)



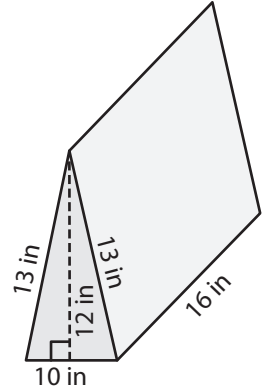
Surface Area = _____

2)

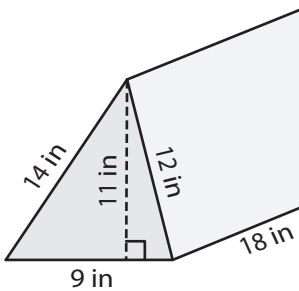


Surface Area = _____

3)



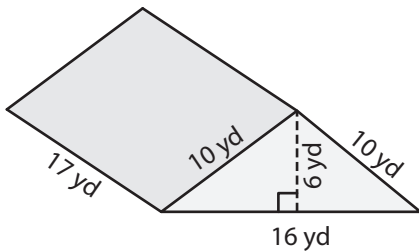
4)



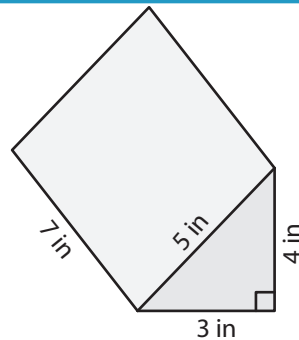
Surface Area = _____

Surface Area = _____

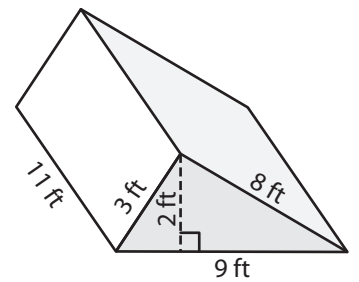
7)



Surface Area = _____



Surface Area = _____



Surface Area = _____

PREVIEW

Gain complete access to the largest collection of worksheets in all subjects!

Members, please log in to download this worksheet.

Not a member? Please sign up to gain complete access.

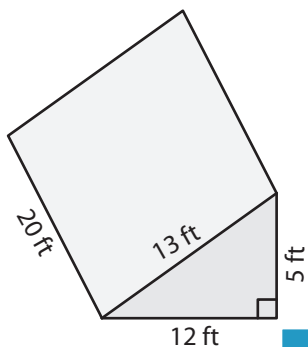
www.mathworksheets4kids.com

Name : _____

Surface Area of Triangular Prisms

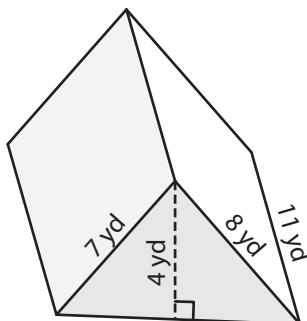
Find the surface area of each triangular prism.

1)



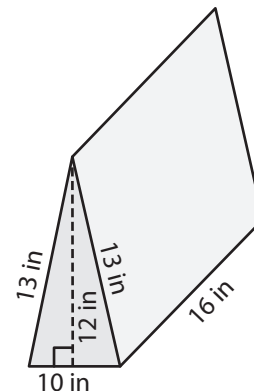
Surface Area = 660 ft²

2)

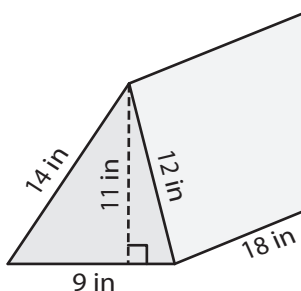


Surface Area = 696 in²

3)



4)



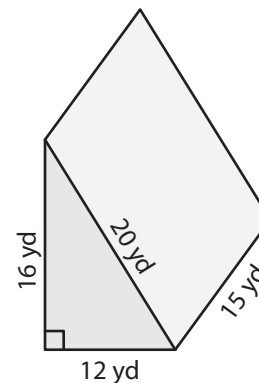
Surface Area = 729 in²

Gain complete access to the largest collection of worksheets in all subjects!

Members, please log in to download this worksheet.

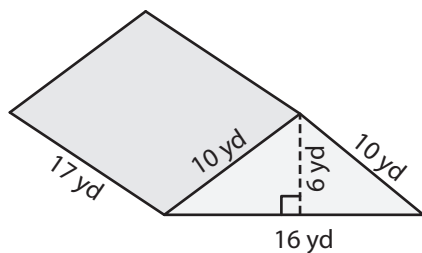
Not a member? Please sign up to gain complete access.

www.mathworksheets4kids.com

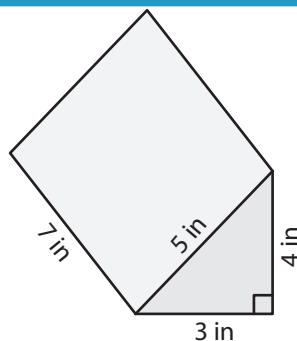


Surface Area = 912 yd²

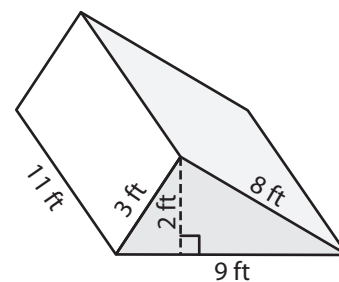
7)



Surface Area = 708 yd²



Surface Area = 96 in²



Surface Area = 238 ft²