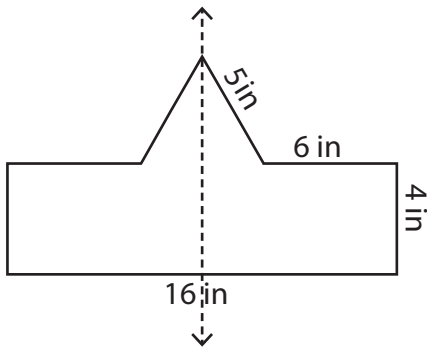


**Perimeter of Symmetric Shapes**

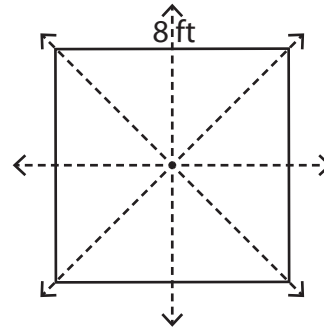
Find the perimeter of each symmetrical shape by using the given information.

1)



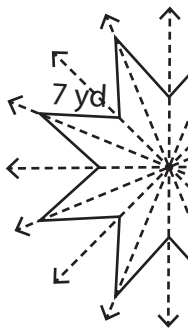
Perimeter: \_\_\_\_\_

2)



Perimeter: \_\_\_\_\_

3)



Perimeter: \_\_\_\_\_

# PREVIEW

Gain complete access to the largest collection of worksheets in all subjects!

Members, please log in to download this worksheet.

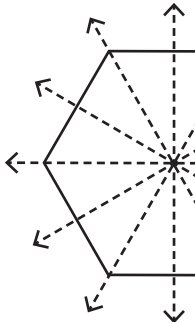
Not a member? Please sign up to gain complete access.

[www.mathworksheets4kids.com](http://www.mathworksheets4kids.com)



Perimeter: \_\_\_\_\_

5)

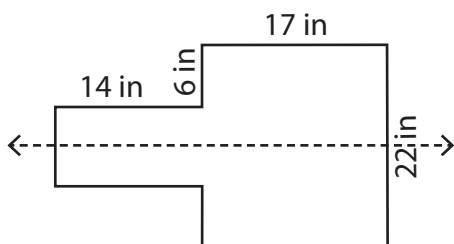


Perimeter: \_\_\_\_\_



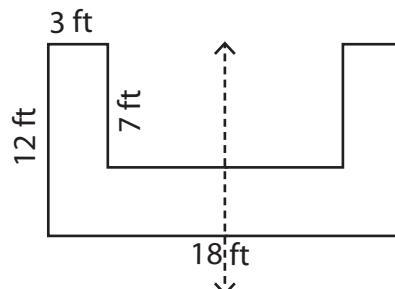
Perimeter: \_\_\_\_\_

7)



Perimeter: \_\_\_\_\_

8)

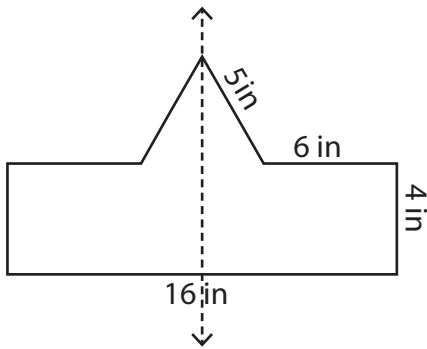


Perimeter: \_\_\_\_\_

**Perimeter of Symmetric Shapes**

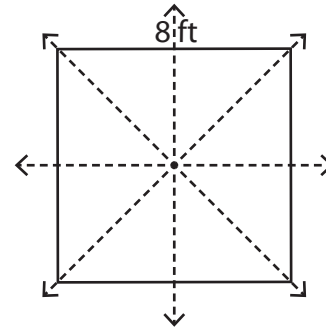
Find the perimeter of each symmetrical shape by using the given information.

1)



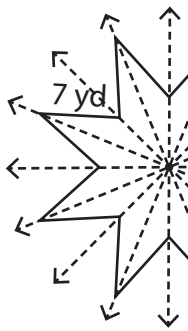
Perimeter: **46 in**

2)



Perimeter: **32 ft**

3)



Perimeter: \_\_\_\_\_

# PREVIEW

Gain complete access to the largest collection of worksheets in all subjects!

Members, please log in to download this worksheet.

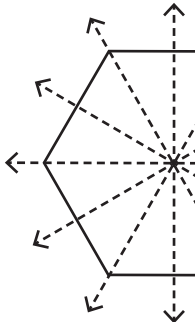
Not a member? Please sign up to gain complete access.

[www.mathworksheets4kids.com](http://www.mathworksheets4kids.com)



**70 in**

5)

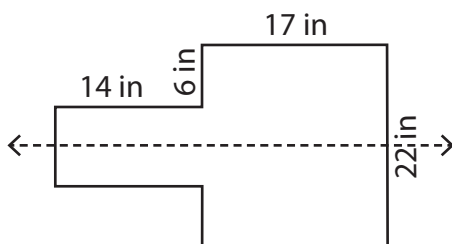


Perimeter: \_\_\_\_\_



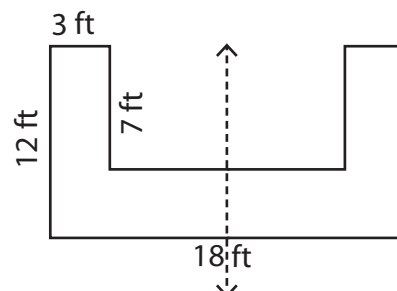
**96 yd**

7)



Perimeter: **106 in**

8)



Perimeter: **74 ft**