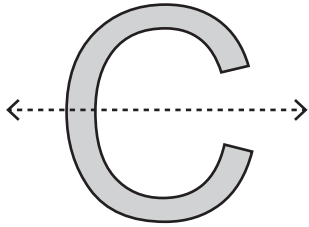


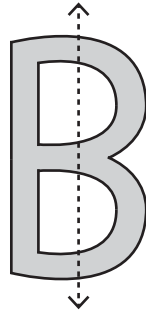
Symmetry on Letters

Is the dotted line on each letter a line of symmetry? Write yes or no.

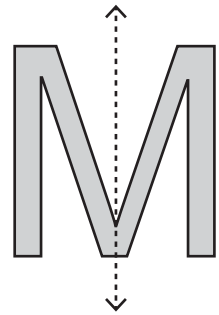
1)



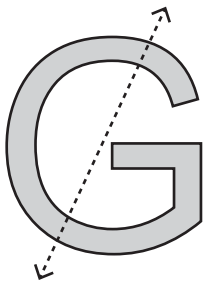
2)



3)



4)




PREVIEW

Gain complete access to the largest collection of worksheets in all subjects!

Members, please log in to download this worksheet.

Not a member? Please sign up to gain complete access.



www.mathworksheets4kids.com



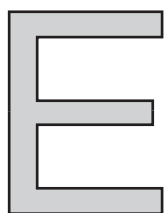
Draw a line of symm

ne line of symmetry)

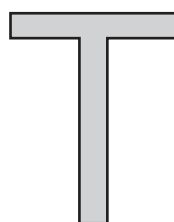
1)



4)



5)



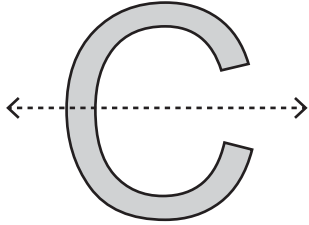
6)



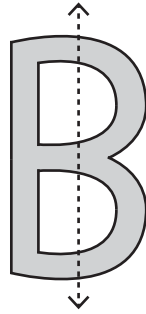
Symmetry on Letters

Is the dotted line on each letter a line of symmetry? Write yes or no.

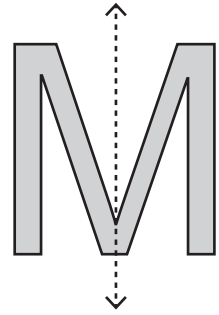
1)

**Yes**

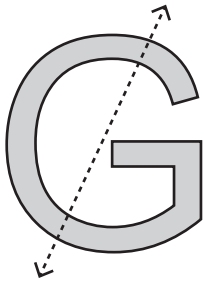
2)

**No**

3)

**Yes**

4)


**No****PREVIEW**

Gain complete access to the largest
collection of worksheets in all subjects!

Members, please
log in to
download this
worksheet.

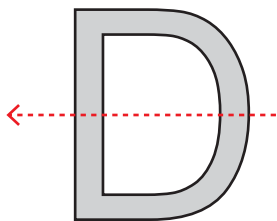
Not a member?
Please sign up to
gain complete
access.

www.mathworksheets4kids.com

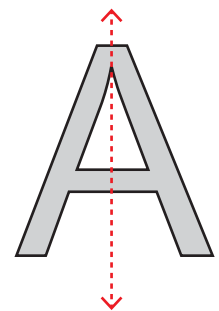
**No**

Draw a line of symm

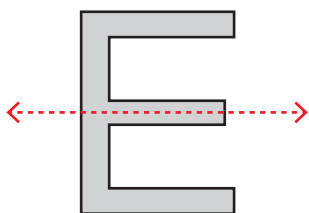
1)



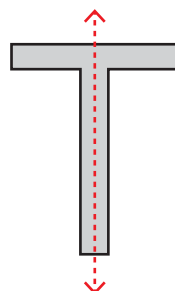
ne line of symmetry)



4)



5)



6)

