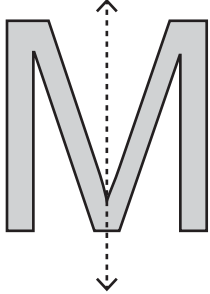


# Symmetry on Letters

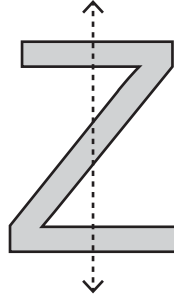
Is the dotted line on each letter a line of symmetry? Write yes or no.

1)



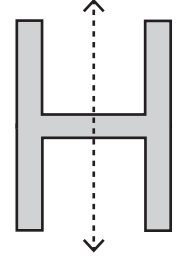
\_\_\_\_\_

2)



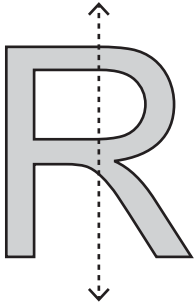
2)

3)



\_\_\_\_\_

4)



\_\_\_\_\_

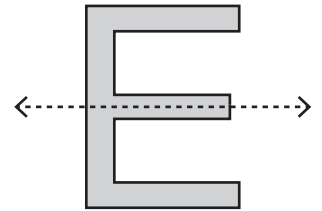
## PREVIEW

Gain complete access to the largest  
collection of worksheets in all subjects!

Members, please  
log in to  
download this  
worksheet.

Not a member?  
Please sign up to  
gain complete  
access.

[www.mathworksheets4kids.com](http://www.mathworksheets4kids.com)


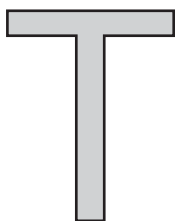


\_\_\_\_\_

Draw a line of symm

ne line of symmetry)

1)



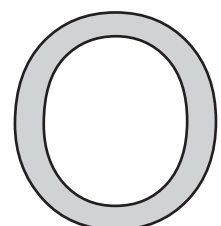
4)



5)



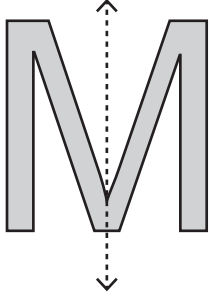
6)



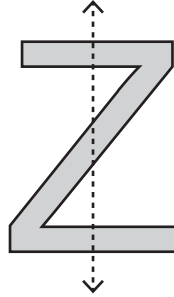
**Symmetry on Letters**

Is the dotted line on each letter a line of symmetry? Write yes or no.

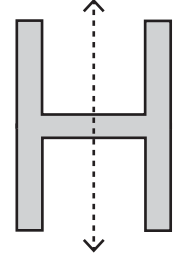
1)

**Yes**

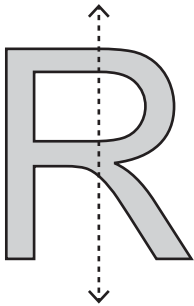
2)

**No**

3)

**Yes**

4)

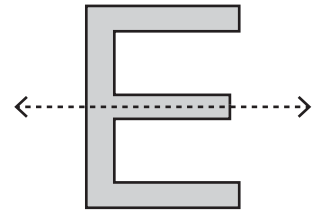
**No****PREVIEW**

Gain complete access to the largest  
collection of worksheets in all subjects!

Members, please  
log in to  
download this  
worksheet.

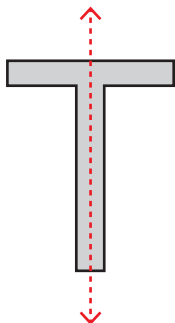
Not a member?  
Please sign up to  
gain complete  
access.

[www.mathworksheets4kids.com](http://www.mathworksheets4kids.com)

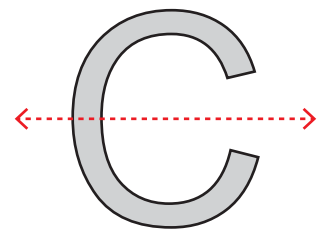
**Yes**

Draw a line of symm

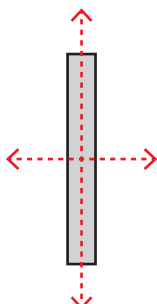
1)



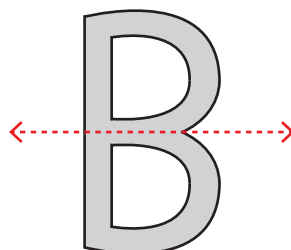
ne line of symmetry)



4)



5)



6)

