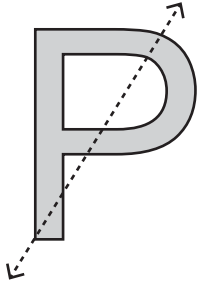


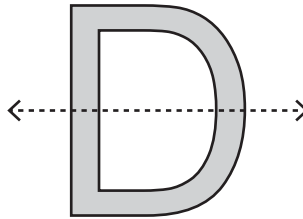
Symmetry on Letters

Is the dotted line on each letter a line of symmetry? Write yes or no.

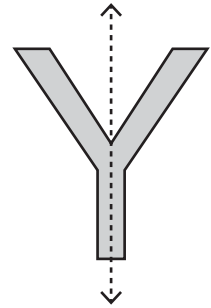
1)



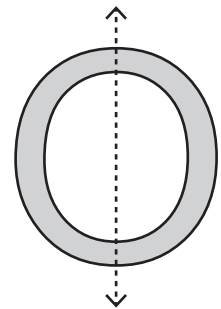
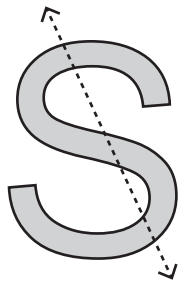
2)



3)



4)



PREVIEW

Gain complete access to the largest collection of worksheets in all subjects!

Members, please log in to download this worksheet.



Not a member? Please sign up to gain complete access.

www.mathworksheets4kids.com

Draw a line of symm

ne line of symmetry)

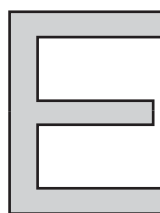
1)



4)



5)

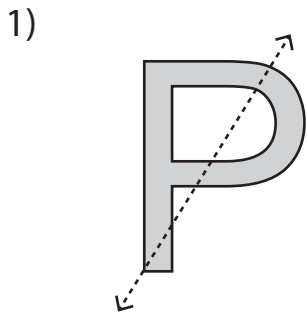


6)

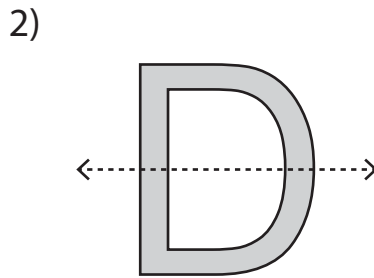


Symmetry on Letters

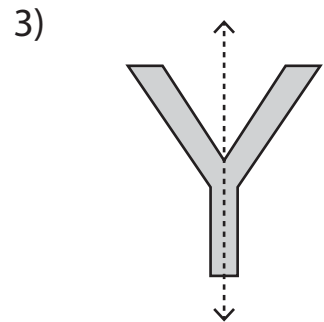
Is the dotted line on each letter a line of symmetry? Write yes or no.



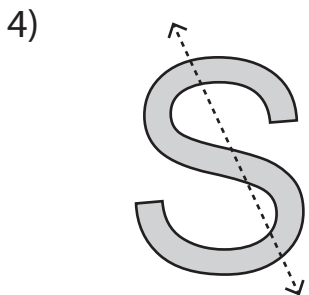
No



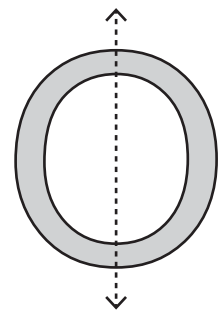
Yes



Yes



No



Yes

PREVIEW

Gain complete access to the largest collection of worksheets in all subjects!

Members, please log in to download this worksheet.

Not a member? Please sign up to gain complete access.

www.mathworksheets4kids.com

Draw a line of symm

(one line of symmetry)

