


Lines of Symmetry


Sheet 3

Draw lines of symmetry on each shape. Count and write the lines of symmetry you see.

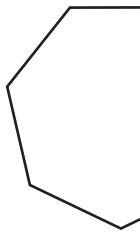
1)



2)



3)

**PREVIEW**

Gain complete access to the largest
collection of worksheets in all subjects!

Members, please
log in to
download this
worksheet.

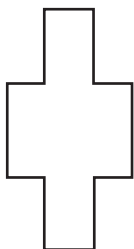
Not a member?
Please sign up to
gain complete
access.

www.mathworksheets4kids.com

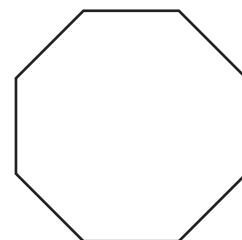
5)



7)



8)

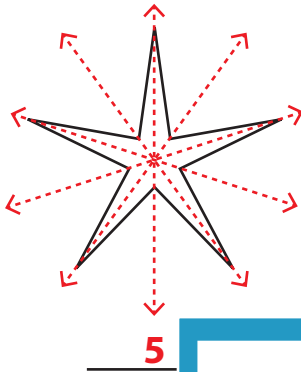


Answer key

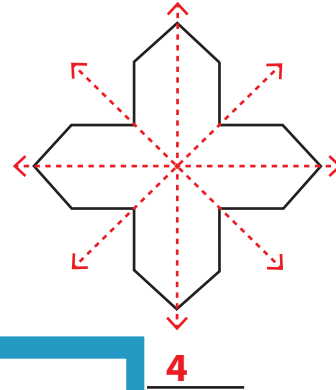
Lines of Symmetry

Draw lines of symmetry on each shape. Count and write the lines of symmetry you see.

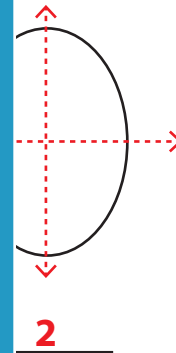
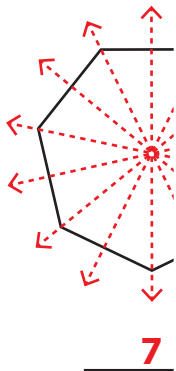
1)



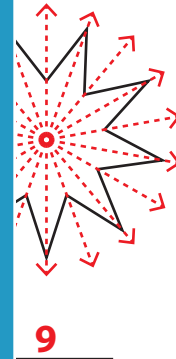
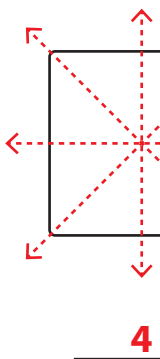
2)



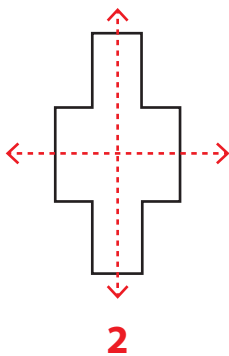
3)



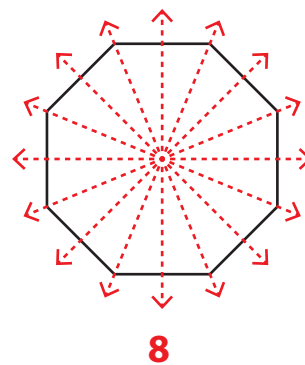
5)



7)



8)



PREVIEW

Gain complete access to the largest collection of worksheets in all subjects!

Members, please log in to download this worksheet.

Not a member? Please sign up to gain complete access.

www.mathworksheets4kids.com