


**Symmetry in Real-life**

Sheet 1

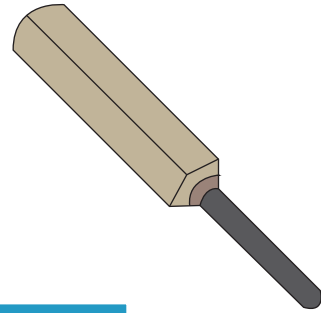
Draw a line of symmetry on each one.

(Some pictures may have more than one line of symmetry)

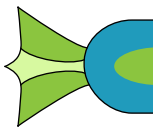
1)



2)



3)




**PREVIEW**

Gain complete access to the largest collection of worksheets in all subjects!




5)



Members, please  
log in to  
download this  
worksheet.

Not a member?  
Please sign up to  
gain complete  
access.

[www.mathworksheets4kids.com](http://www.mathworksheets4kids.com)



7)



8)



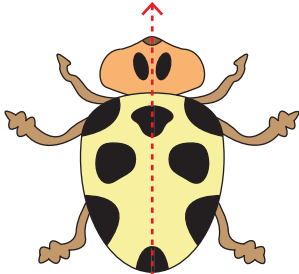
**Answer key****Symmetry in Real-life**

Sheet 1

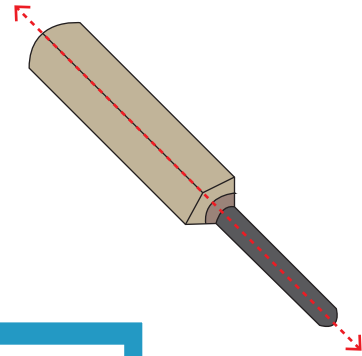
Draw a line of symmetry on each one.

(Some pictures may have more than one line of symmetry)

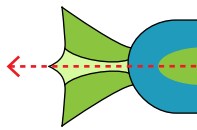
1)



2)



3)




**PREVIEW**

Gain complete access to the largest collection of worksheets in all subjects!



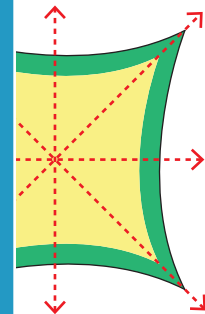
5)



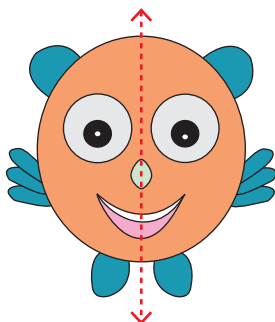
Members, please log in to download this worksheet.

Not a member? Please sign up to gain complete access.

[www.mathworksheets4kids.com](http://www.mathworksheets4kids.com)



7)



8)

