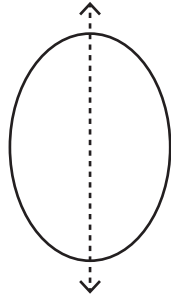


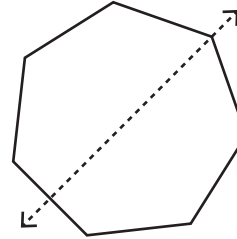
**Recognize the line of symmetry**

Is the dotted line on each shape a line of symmetry? Write yes or no.

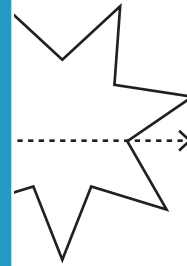
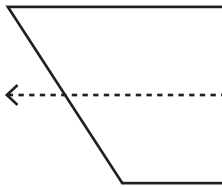
1)



2)



3)



**PREVIEW**

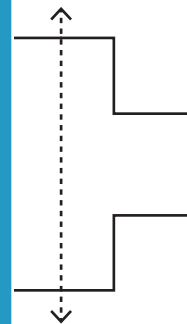
Gain complete access to the largest collection of worksheets in all subjects!

Members, please log in to download this worksheet.

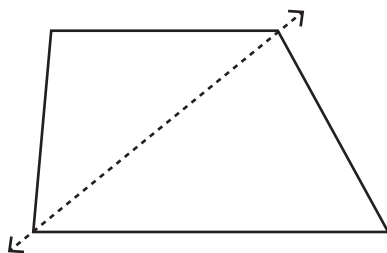
Not a member? Please sign up to gain complete access.

[www.mathworksheets4kids.com](http://www.mathworksheets4kids.com)

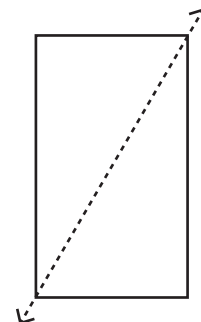
5)



7)



8)



\_\_\_\_\_

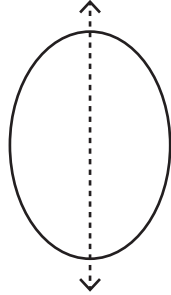
\_\_\_\_\_

**Answer key****Recognize the line of symmetry**

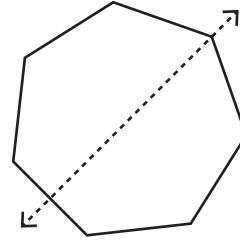
Sheet 3

Is the dotted line on each shape a line of symmetry? Write yes or no.

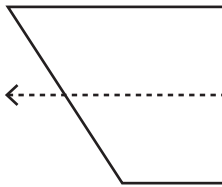
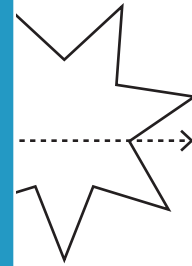
1)

**Yes**


2)

**Yes**

3)

**No****No**

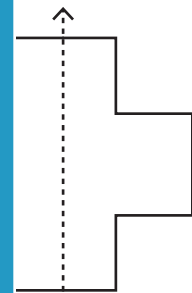
5)

**Yes****PREVIEW**

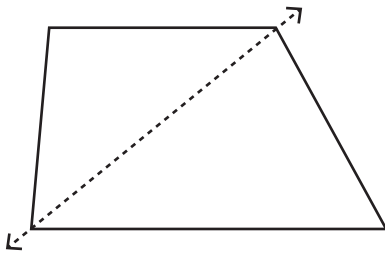
Gain complete access to the largest collection of worksheets in all subjects!

Members, please log in to download this worksheet.

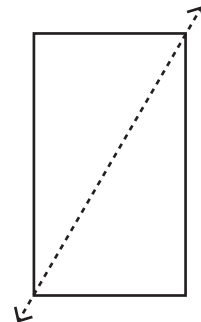
Not a member? Please sign up to gain complete access.

[www.mathworksheets4kids.com](http://www.mathworksheets4kids.com)**Yes**

7)

**No**

8)

**No**