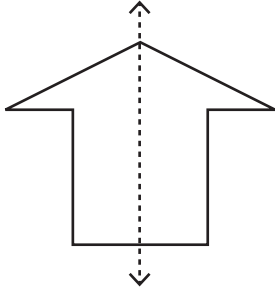


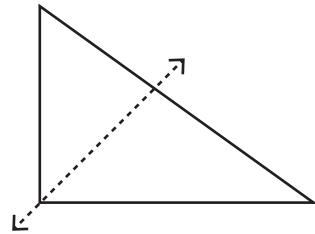
**Recognize the line of symmetry**

Is the dotted line on each shape a line of symmetry? Write yes or no.

1)



2)



3)



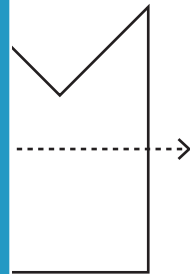
**PREVIEW**

Gain complete access to the largest collection of worksheets in all subjects!

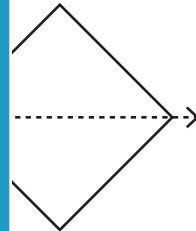
Members, please log in to download this worksheet.

Not a member? Please sign up to gain complete access.

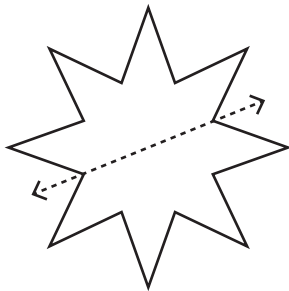
[www.mathworksheets4kids.com](http://www.mathworksheets4kids.com)



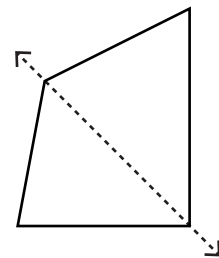
5)



7)



8)



\_\_\_\_\_

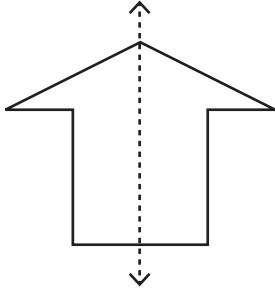
\_\_\_\_\_

**Answer key**

**Recognize the line of symmetry**

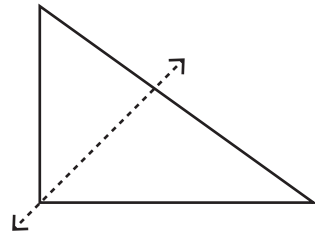
Is the dotted line on each shape a line of symmetry? Write yes or no.

1)



**Yes**

2)



**No**

3)



**No**

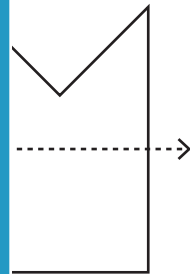
**PREVIEW**

Gain complete access to the largest collection of worksheets in all subjects!

Members, please log in to download this worksheet.


Not a member? Please sign up to gain complete access.

[www.mathworksheets4kids.com](http://www.mathworksheets4kids.com)

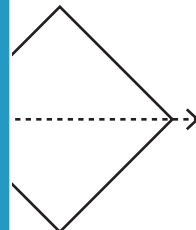


**No**

5)

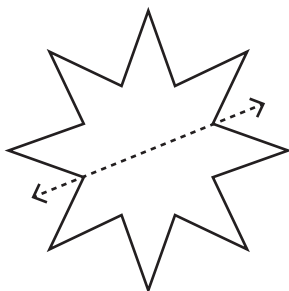


**Yes**



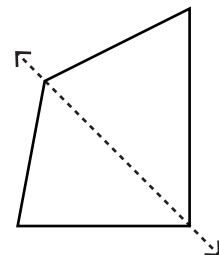
**Yes**

7)



**Yes**

8)



**No**