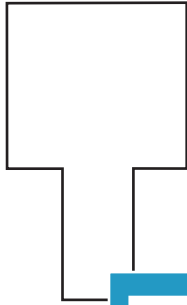



Symmetry in Shapes

Draw a line of symmetry on each shape.

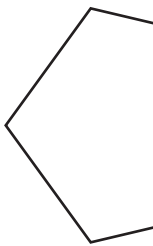
1)



2)



3)



PREVIEW

Gain complete access to the largest collection of worksheets in all subjects!

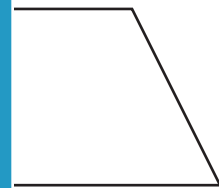
Members, please log in to download this worksheet.

Not a member? Please sign up to gain complete access.

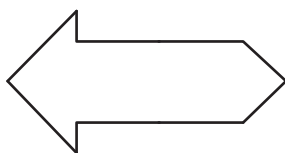
www.mathworksheets4kids.com




5)



7)



8)

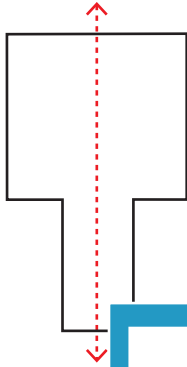


Answer key**Symmetry in Shapes**

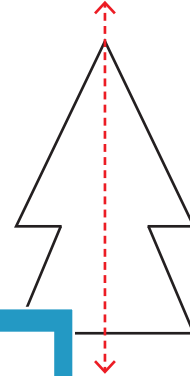
Sheet 4

Draw a line of symmetry on each shape.

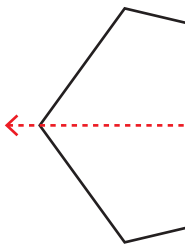
1)



2)

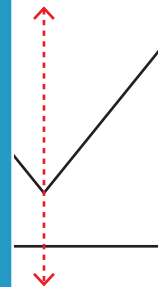


3)

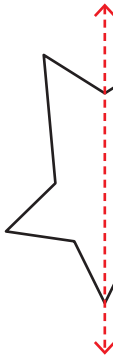


PREVIEW

Gain complete access to the largest collection of worksheets in all subjects!



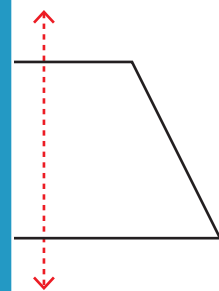
5)



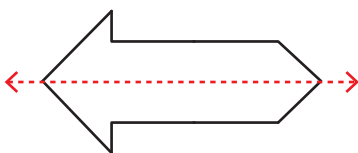
Members, please log in to download this worksheet.

Not a member? Please sign up to gain complete access.

www.mathworksheets4kids.com



7)



8)

