


Name : _____

Tall vs Short

Sheet 3

1) Which is taller?



2) Which is shorter?

PREVIEW

Gain complete access to the largest collection of worksheets in all subjects!

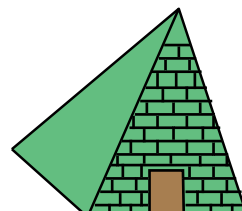

Members, please log in to download this worksheet.

Not a member? Please sign up to gain complete access.

www.mathworksheets4kids.com


3) Which is shorter?

4) Which is taller?



Tall vs Short

1) Which is taller?



2) Which is shorter?

PREVIEW

Gain complete access to the largest collection of worksheets in all subjects!

Members, please log in to download this worksheet.

Not a member? Please sign up to gain complete access.

www.mathworksheets4kids.com

3) Which is shorter?

4) Which is taller?

