


Name : _____

Tall vs Short

Sheet 2

1) Which is taller?



2) Which is shorter?

PREVIEW

Gain complete access to the largest collection of worksheets in all subjects!

Members, please log in to download this worksheet.


Not a member? Please sign up to gain complete access.

www.mathworksheets4kids.com

3) Which is taller?



4) Which is shorter?




Name : _____

Answer Key

Tall vs Short

Sheet 2

1) Which is taller?



2) Which is shorter?

PREVIEW

Gain complete access to the largest collection of worksheets in all subjects!

Members, please log in to download this worksheet.

Not a member? Please sign up to gain complete access.

www.mathworksheets4kids.com

3) Which is taller?



4) Which is shorter?

